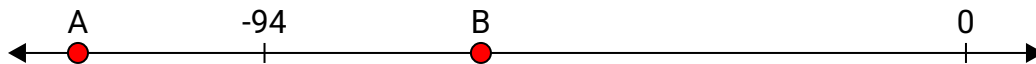




Solve each problem.

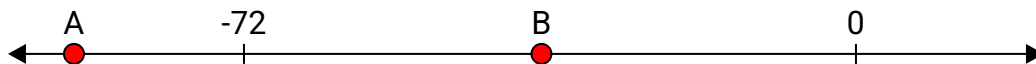
Answers

- 1) Which letter best shows -119?




1. _____

- 2) Which letter best shows -92?




2. _____

- 3) Which letter best shows -28?




3. _____

- 4) Which letter best shows -82?




4. _____

- 5) Which letter best shows -13?




5. _____

- 6) Which letter best shows -99?



6. _____

- 7) Which letter best shows -92?



7. _____

- 8) Which letter best shows -19?



8. _____

- 9) Which letter best shows -34?



9. _____

- 10) Which letter best shows -10?



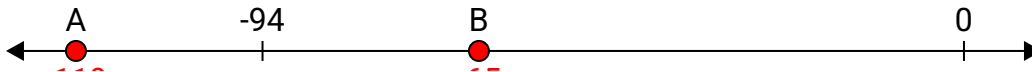
10. _____



Solve each problem.

Answers


- 1) Which letter best shows -119?

1. **A**


- 2) Which letter best shows -92?

2. **A**


- 3) Which letter best shows -28?

3. **B**


- 4) Which letter best shows -82?

4. **A**


- 5) Which letter best shows -13?

5. **B**


- 6) Which letter best shows -99?

6. **A**


- 7) Which letter best shows -92?

7. **A**


- 8) Which letter best shows -19?

8. **B**

- 9) Which letter best shows -34?

9. **B**

- 10) Which letter best shows -10?

10. **B**