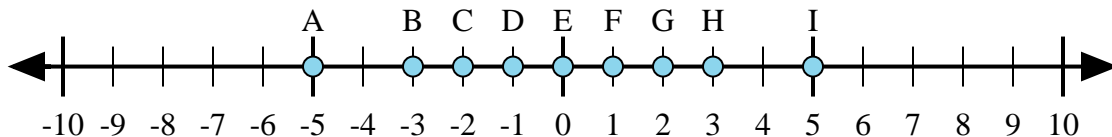




Determine which letter in the numberline best represents the answer to each problem.

Answers



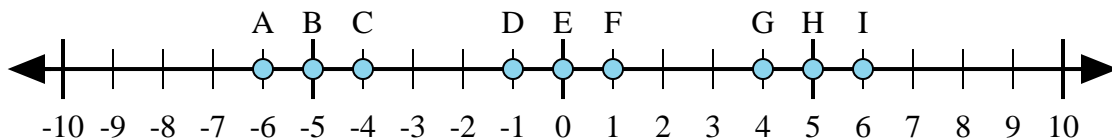
1) $2 + (-3) =$

2) $(-3) + (-2) =$

3) $3 + (-2) =$

4) $3 + 2 =$

5) $(-2) + 3 =$



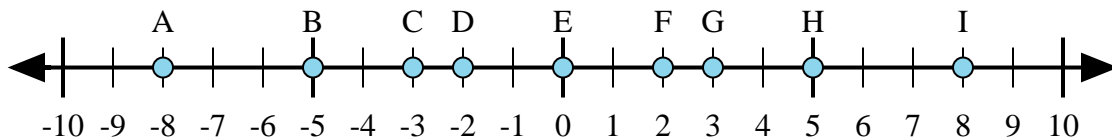
6) $(-1) + 5 =$

7) $(-5) + (-1) =$

8) $5 + (-1) =$

9) $1 + (-5) =$

10) $5 + 1 =$



11) $5 + 3 =$

12) $(-5) + 3 =$

13) $5 + (-3) =$

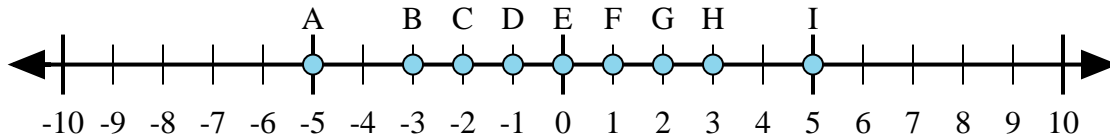
14) $3 + (-5) =$

15) $(-3) + 5 =$

1. _____
2. _____
3. _____
4. _____
5. _____
6. _____
7. _____
8. _____
9. _____
10. _____
11. _____
12. _____
13. _____
14. _____
15. _____



Determine which letter in the numberline best represents the answer to each problem.



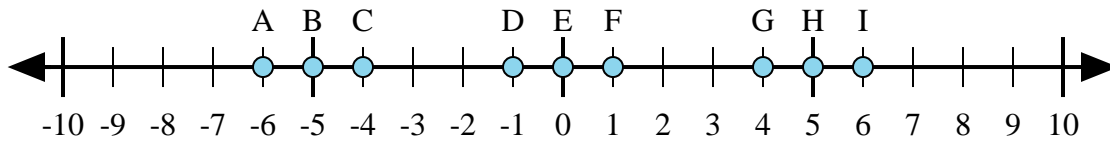
1) $2 + (-3) =$

2) $(-3) + (-2) =$

3) $3 + (-2) =$

4) $3 + 2 =$

5) $(-2) + 3 =$



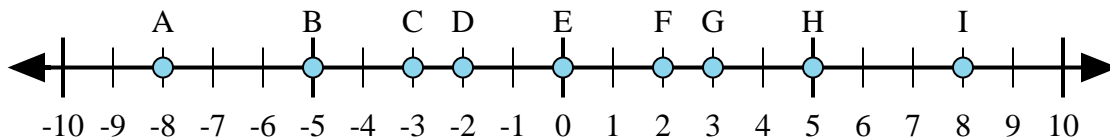
6) $(-1) + 5 =$

7) $(-5) + (-1) =$

8) $5 + (-1) =$

9) $1 + (-5) =$

10) $5 + 1 =$



11) $5 + 3 =$

12) $(-5) + 3 =$

13) $5 + (-3) =$

14) $3 + (-5) =$

15) $(-3) + 5 =$

Answers1. D2. A3. F4. I5. F6. G7. A8. G9. C10. I11. I12. D13. F14. D15. F