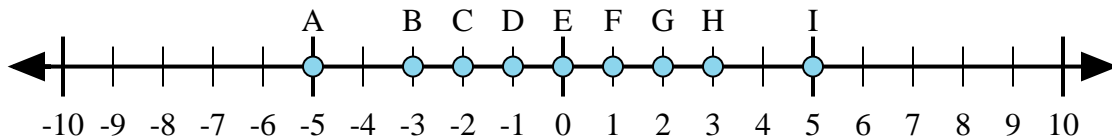




Determine which letter in the numberline best represents the answer to each problem.

Answers



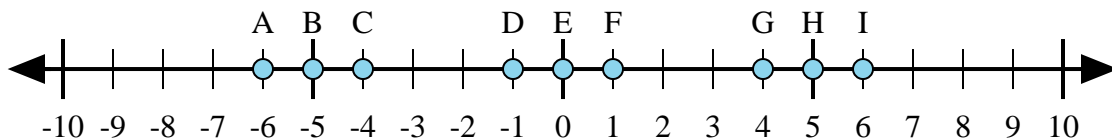
1)  $2 + (-3) =$

2)  $(-3) + (-2) =$

3)  $3 + (-2) =$

4)  $3 + 2 =$

5)  $(-2) + 3 =$



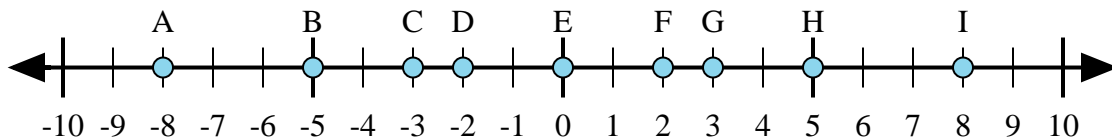
6)  $(-1) + 5 =$

7)  $(-5) + (-1) =$

8)  $5 + (-1) =$

9)  $1 + (-5) =$

10)  $5 + 1 =$



11)  $5 + 3 =$

12)  $(-5) + 3 =$

13)  $5 + (-3) =$

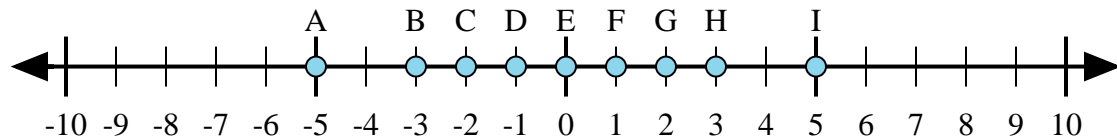
14)  $3 + (-5) =$

15)  $(-3) + 5 =$

1. \_\_\_\_\_
2. \_\_\_\_\_
3. \_\_\_\_\_
4. \_\_\_\_\_
5. \_\_\_\_\_
6. \_\_\_\_\_
7. \_\_\_\_\_
8. \_\_\_\_\_
9. \_\_\_\_\_
10. \_\_\_\_\_
11. \_\_\_\_\_
12. \_\_\_\_\_
13. \_\_\_\_\_
14. \_\_\_\_\_
15. \_\_\_\_\_



Determine which letter in the numberline best represents the answer to each problem.



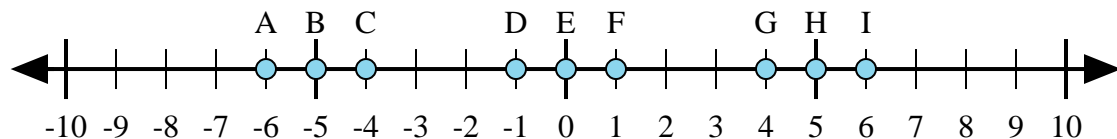
1)  $2 + (-3) =$

2)  $(-3) + (-2) =$

3)  $3 + (-2) =$

4)  $3 + 2 =$

5)  $(-2) + 3 =$



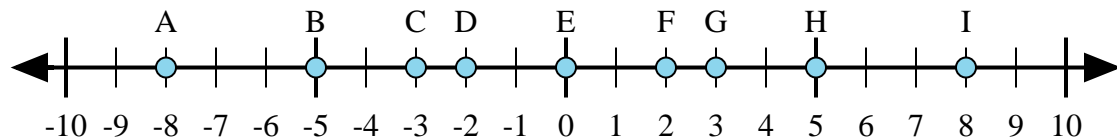
6)  $(-1) + 5 =$

7)  $(-5) + (-1) =$

8)  $5 + (-1) =$

9)  $1 + (-5) =$

10)  $5 + 1 =$



11)  $5 + 3 =$

12)  $(-5) + 3 =$

13)  $5 + (-3) =$

14)  $3 + (-5) =$

15)  $(-3) + 5 =$

Answers

1.     **D**    

2.     **A**    

3.     **F**    

4.     **I**    

5.     **F**    

6.     **G**    

7.     **A**    

8.     **G**    

9.     **C**    

10.     **I**    

11.     **I**    

12.     **D**    

13.     **F**    

14.     **D**    

15.     **F**