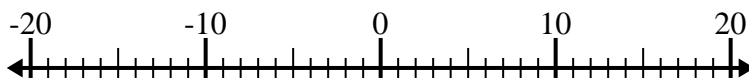




Solve each problem. Use the numberline if needed.

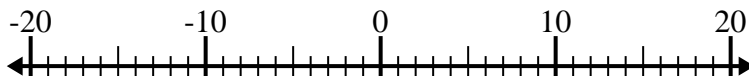
## Answers

1)  $(-12) - (-8) =$  \_\_\_\_\_



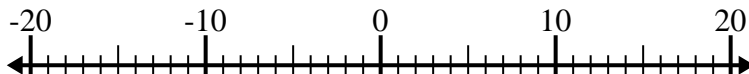
1. \_\_\_\_\_

2)  $(-7) + (-5) =$  \_\_\_\_\_



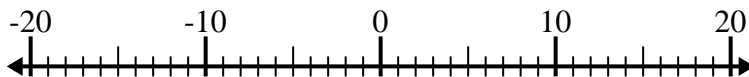
2. \_\_\_\_\_

3)  $13 + (-4) =$  \_\_\_\_\_



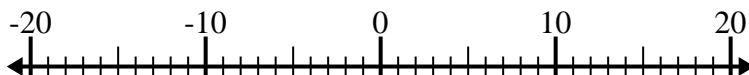
3. \_\_\_\_\_

4)  $(-6) + 7 =$  \_\_\_\_\_



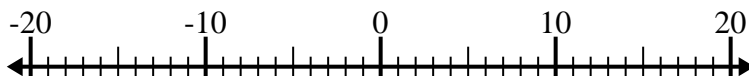
4. \_\_\_\_\_

5)  $9 + (-10) =$  \_\_\_\_\_



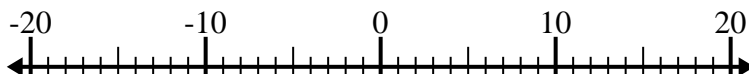
5. \_\_\_\_\_

6)  $(-2) + 4 =$  \_\_\_\_\_



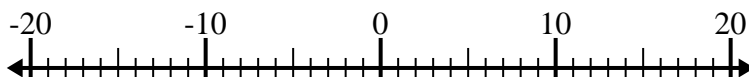
6. \_\_\_\_\_

7)  $(-6) - (-15) =$  \_\_\_\_\_



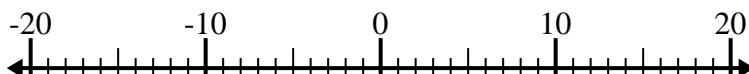
7. \_\_\_\_\_

8)  $(-11) - 3 =$  \_\_\_\_\_



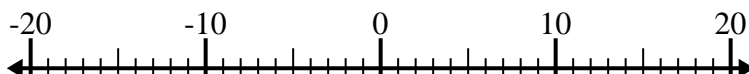
8. \_\_\_\_\_

9)  $(-5) - 2 =$  \_\_\_\_\_



9. \_\_\_\_\_

10)  $11 - (-4) =$  \_\_\_\_\_



10. \_\_\_\_\_



Solve each problem. Use the numberline if needed.

1)  $(-12) - (-8) = \underline{-4}$



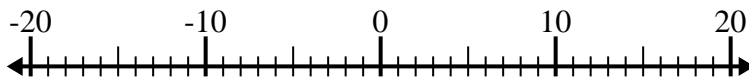
2)  $(-7) + (-5) = \underline{-12}$



3)  $13 + (-4) = \underline{9}$



4)  $(-6) + 7 = \underline{1}$



5)  $9 + (-10) = \underline{-1}$



6)  $(-2) + 4 = \underline{2}$



7)  $(-6) - (-15) = \underline{9}$



8)  $(-11) - 3 = \underline{-14}$



9)  $(-5) - 2 = \underline{-7}$



10)  $11 - (-4) = \underline{15}$



Answers

1. **-4**

2. **-12**

3. **9**

4. **1**

5. **-1**

6. **2**

7. **9**

8. **-14**

9. **-7**

10. **15**