



Express each set as a multiplication problem.

Answers

Ex)

Ex. $9 \times 5 = 45$

1)

1. _____

2. _____

2)

3. _____

4. _____

3)

5. _____

6. _____

4)

7. _____

8. _____

5)


6)

7)

8)

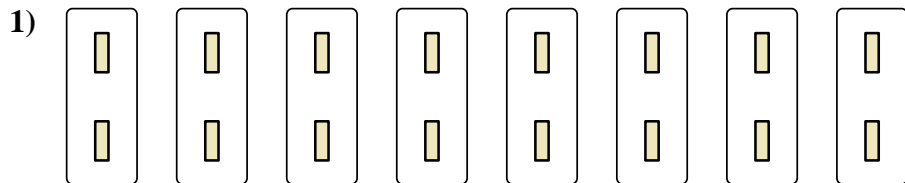


Express each set as a multiplication problem.



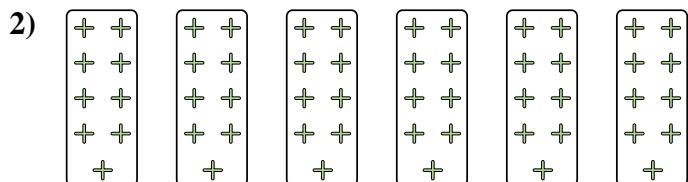
Answers

Ex. 9×5=45




1. 8×2=16

2. 6×9=54



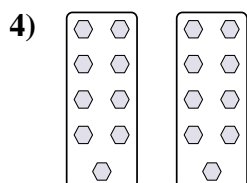
3. 3×7=21

4. 2×9=18



5. 3×4=12

6. 8×10=80



7. 10×9=90

8. 2×10=20

