



Express each set as a multiplication problem.

Answers

Ex)

Ex. $9 \times 6 = 54$

1)

1. _____

2. _____

2)

3. _____

4. _____

3)

5. _____

6. _____

4)

7. _____

8. _____

5)


6)

7)

8)

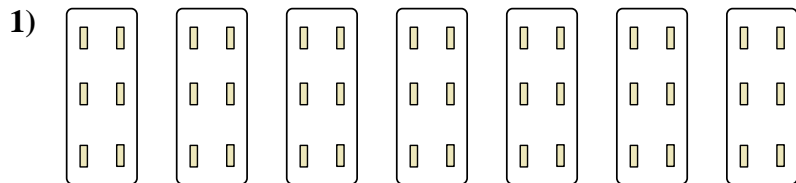


Express each set as a multiplication problem.



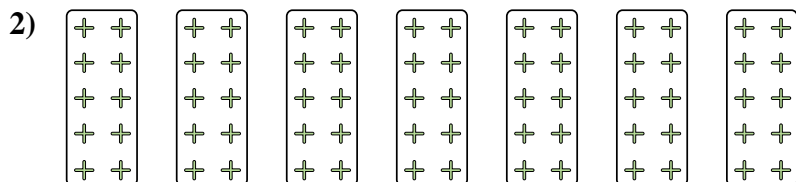
Answers

Ex. 9×6=54




1. 7×6=42

2. 7×10=70



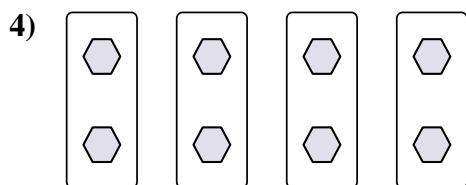
3. 8×2=16

4. 4×2=8



5. 4×8=32

6. 3×2=6



7. 10×7=70

8. 4×10=40

