



Express each set as a multiplication problem.

**Answers**

Ex)

Ex.  $8 \times 5 = 40$

1)

1. \_\_\_\_\_

2. \_\_\_\_\_

2)

3. \_\_\_\_\_

4. \_\_\_\_\_

5. \_\_\_\_\_

3)

6. \_\_\_\_\_

7. \_\_\_\_\_

8. \_\_\_\_\_

4)

5)


6)

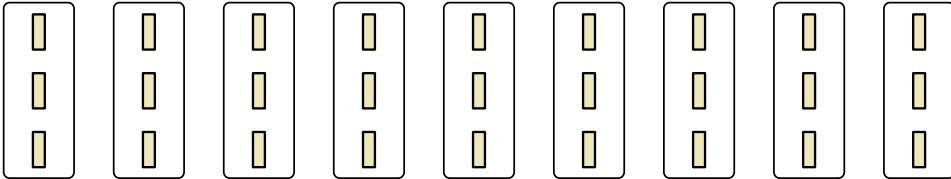
7)

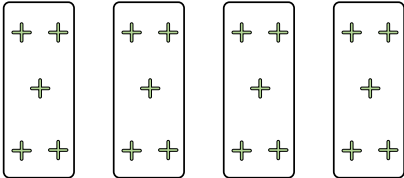
8)




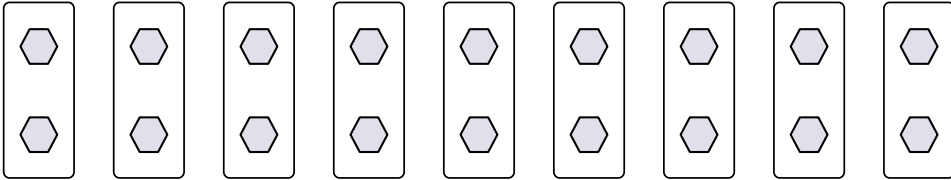
Express each set as a multiplication problem.

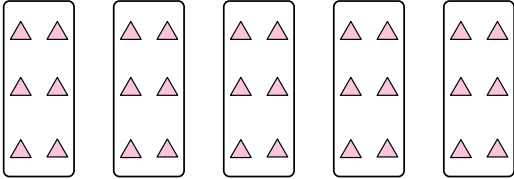
Ex) 

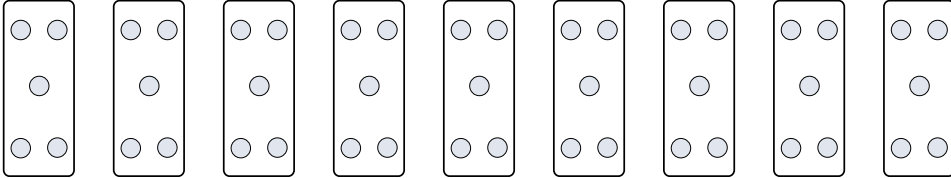
1) 


2) 


3) 

4) 

5) 

6) 

7) 

8) 

Answers

Ex.  $8 \times 5 = 40$

1.  $9 \times 3 = 27$

2.  $4 \times 5 = 20$

3.  $5 \times 8 = 40$

4.  $10 \times 2 = 20$

5.  $5 \times 6 = 30$

6.  $9 \times 5 = 45$

7.  $8 \times 2 = 16$

8.  $7 \times 8 = 56$