



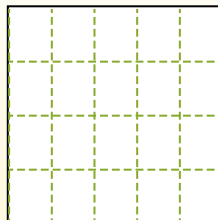
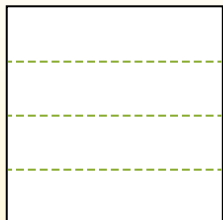
Partition the shape as described and then count to find the number of boxes.

**Answers**

Rows go left to right.


Columns go up and down.

This has 4 rows and 5 columns.  
There are 20 boxes total.




1. \_\_\_\_\_
2. \_\_\_\_\_
3. \_\_\_\_\_
4. \_\_\_\_\_
5. \_\_\_\_\_
6. \_\_\_\_\_
7. \_\_\_\_\_
8. \_\_\_\_\_
9. \_\_\_\_\_

1) 5 rows  
5 columns




2) 3 rows  
4 columns



3) 5 rows  
3 columns



4) 2 rows  
3 columns




5) 3 rows  
3 columns




6) 2 rows  
5 columns




7) 4 rows  
3 columns



8) 5 rows  
4 columns



9) 4 rows  
4 columns



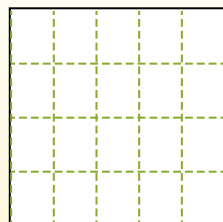
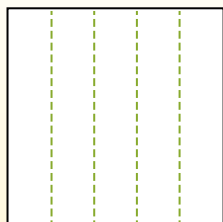



Partition the shape as described and then count to find the number of boxes.

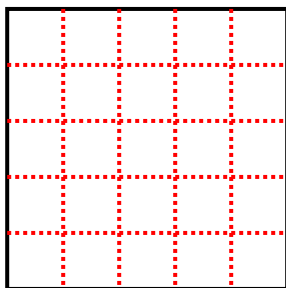
Rows go left to right.

Columns go up and down.

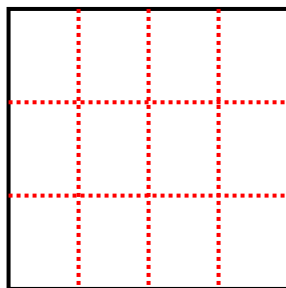
This has 4 rows and 5 columns.  
There are 20 boxes total.



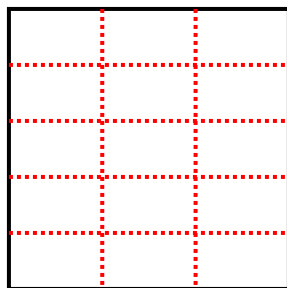
1) 5 rows  
5 columns



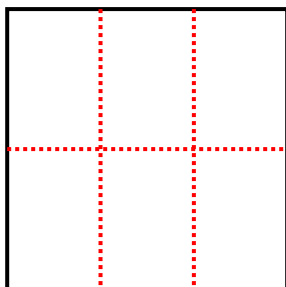
2) 3 rows  
4 columns



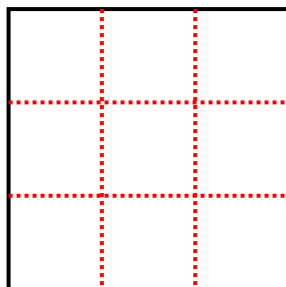
3) 5 rows  
3 columns



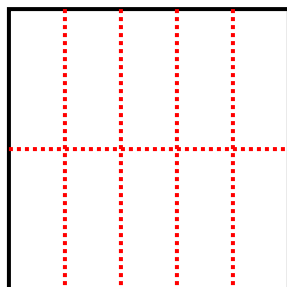
4) 2 rows  
3 columns



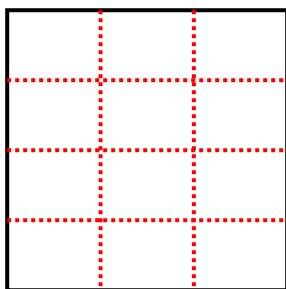
5) 3 rows  
3 columns



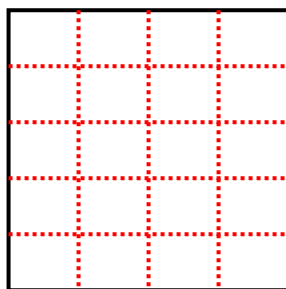
6) 2 rows  
5 columns




7) 4 rows  
3 columns



8) 5 rows  
4 columns



9) 4 rows  
4 columns



Answers

1. 25

2. 12

3. 15

4. 6

5. 9

6. 10

7. 12

8. 20

9. 16