



Partition the shape as described and then count to find the number of boxes.

Answers

Rows go left to right.

Columns go up and down.

This has 4 rows and 5 columns.
There are 20 boxes total.



- 1. _____
- 2. _____
- 3. _____
- 4. _____
- 5. _____
- 6. _____
- 7. _____
- 8. _____
- 9. _____

1) 5 rows
4 columns



2) 4 rows
4 columns



3) 2 rows
3 columns



4) 4 rows
3 columns



5) 5 rows
5 columns



6) 3 rows
5 columns



7) 5 rows
2 columns



8) 2 rows
5 columns



9) 3 rows
3 columns



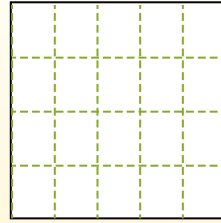
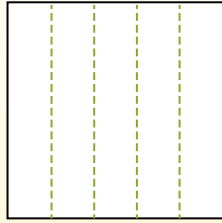
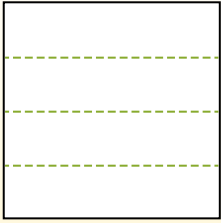


Partition the shape as described and then count to find the number of boxes.

Rows go left to right.

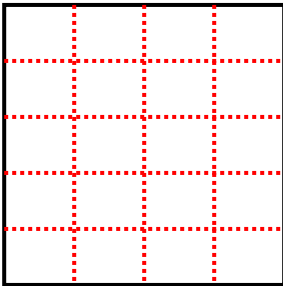
Columns go up and down.

This has 4 rows and 5 columns.
There are 20 boxes total.

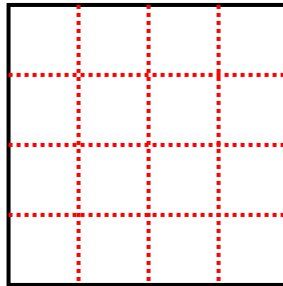


Answers

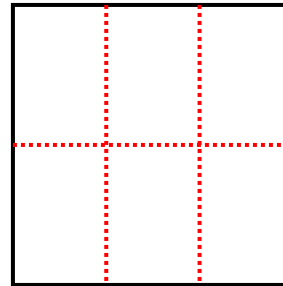
1) 5 rows
4 columns



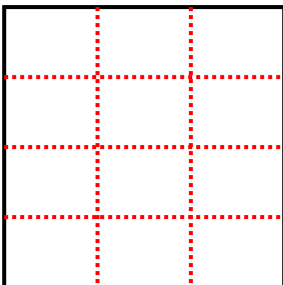
2) 4 rows
4 columns




3) 2 rows
3 columns



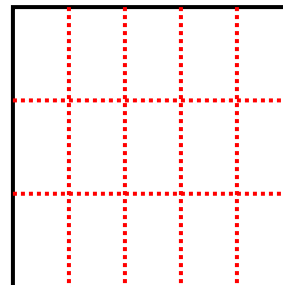
4) 4 rows
3 columns



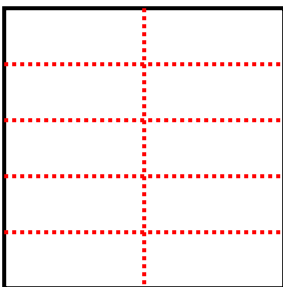
5) 5 rows
5 columns




6) 3 rows
5 columns



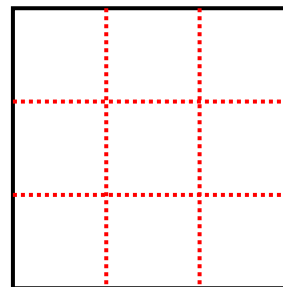
7) 5 rows
2 columns



8) 2 rows
5 columns



9) 3 rows
3 columns



- 1. 20
- 2. 16
- 3. 6
- 4. 12
- 5. 25
- 6. 15
- 7. 10
- 8. 10
- 9. 9