





Use the array provided to solve each problem.


1) $29 \times 20 =$




2) $20 \times 26 =$




3) $21 \times 20 =$




4) $25 \times 20 =$



5) $24 \times 20 =$



6) $27 \times 20 =$



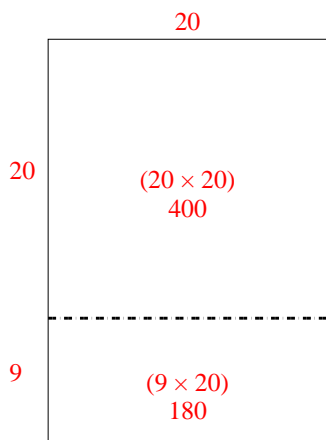
Answers

- 1. _____
- 2. _____
- 3. _____
- 4. _____
- 5. _____
- 6. _____

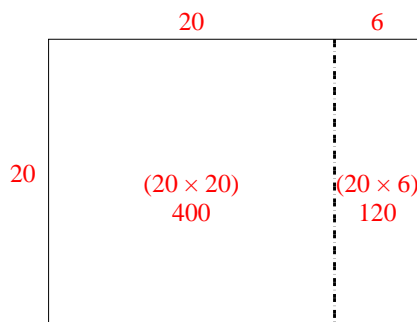


Use the array provided to solve each problem.

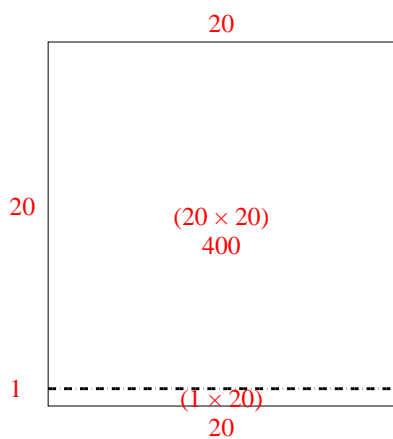
1) $29 \times 20 =$



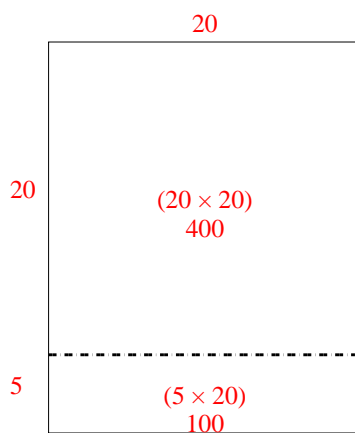
2) $20 \times 26 =$



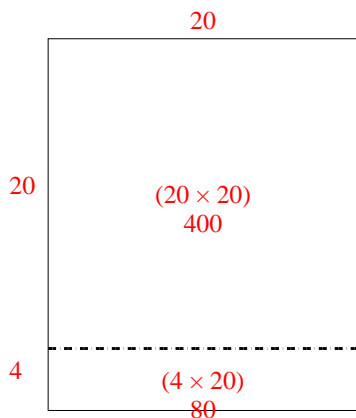
3) $21 \times 20 =$



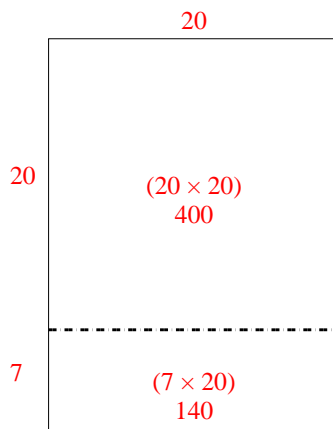
4) $25 \times 20 =$



5) $24 \times 20 =$



6) $27 \times 20 =$



Answers

1. **580**

2. **520**

3. **420**

4. **500**

5. **480**

6. **540**