





Use the array provided to solve each problem.


1) $68 \times 57 =$




2) $59 \times 69 =$




3) $38 \times 17 =$



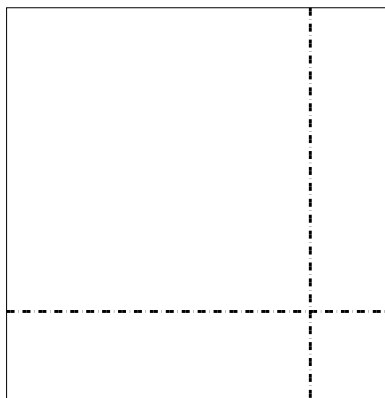
4) $37 \times 32 =$



5) $34 \times 17 =$



6) $39 \times 38 =$



Answers

1. _____

2. _____

3. _____

4. _____

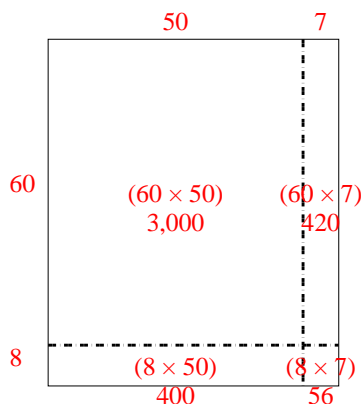
5. _____

6. _____

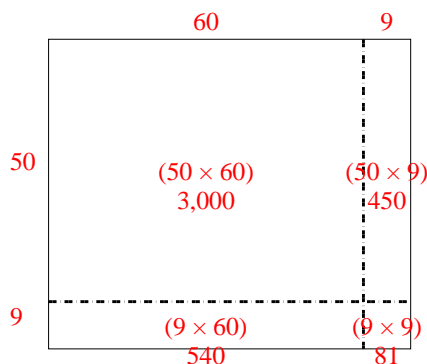


Use the array provided to solve each problem.

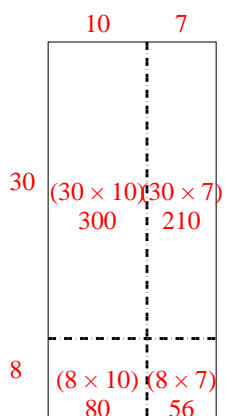
1) $68 \times 57 =$



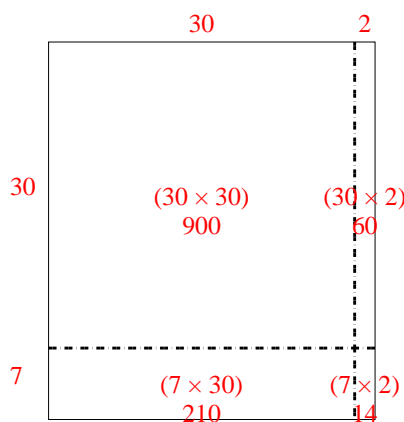
2) $59 \times 69 =$



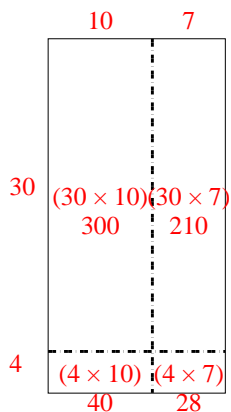
3) $38 \times 17 =$



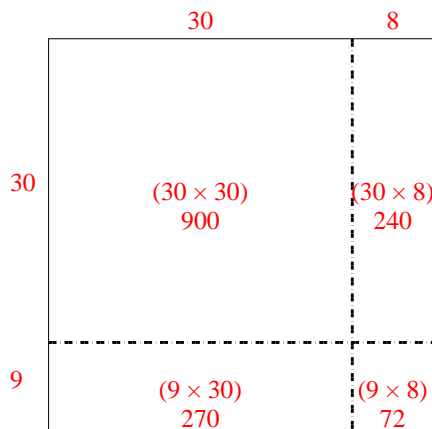
4) $37 \times 32 =$



5) $34 \times 17 =$



6) $39 \times 38 =$



Answers

1. **3,876**

2. **4,071**

3. **646**

4. **1,184**

5. **578**

6. **1,482**