





Use the array provided to solve each problem.


1) $29 \times 20 =$




2) $18 \times 10 =$




3) $11 \times 10 =$




4) $17 \times 10 =$



5) $10 \times 18 =$



6) $10 \times 11 =$



Answers

1. _____

2. _____

3. _____

4. _____

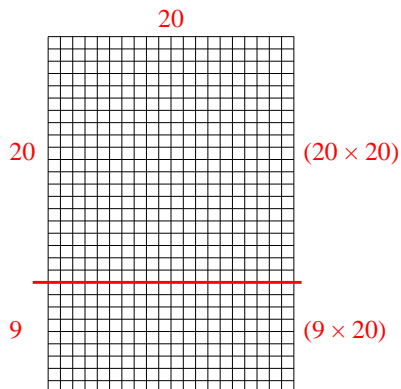
5. _____

6. _____

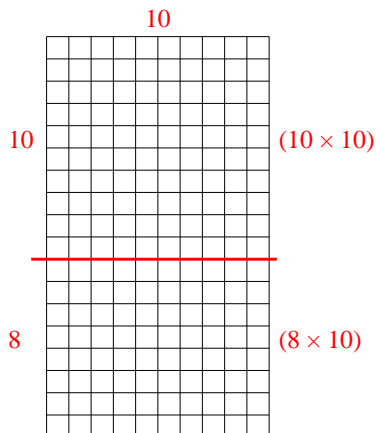


Use the array provided to solve each problem.

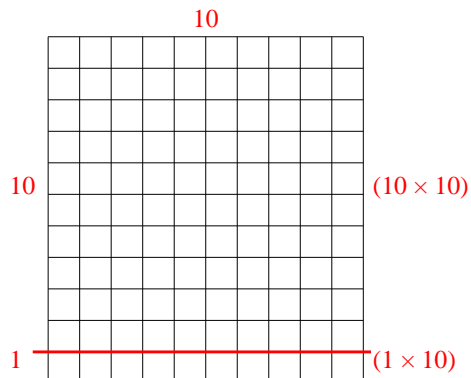
1) $29 \times 20 =$



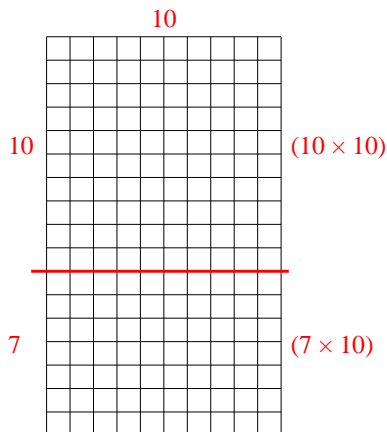
2) $18 \times 10 =$



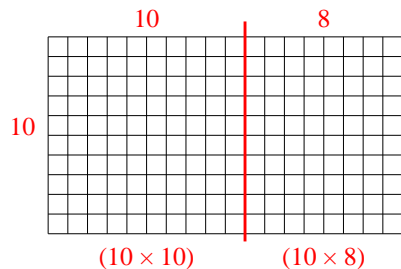
3) $11 \times 10 =$



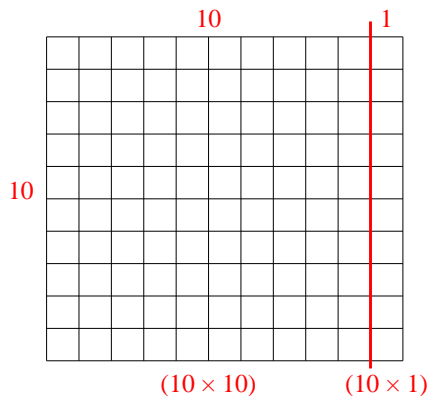
4) $17 \times 10 =$



5) $10 \times 18 =$



6) $10 \times 11 =$



Answers

1. **580**

2. **180**

3. **110**

4. **170**


5. **180**

6. **110**




Use the array provided to solve each problem.


1) $11 \times 10 =$




2) $17 \times 10 =$




3) $10 \times 13 =$




4) $10 \times 17 =$



5) $10 \times 19 =$



6) $10 \times 15 =$



Answers

1. _____

2. _____

3. _____

4. _____

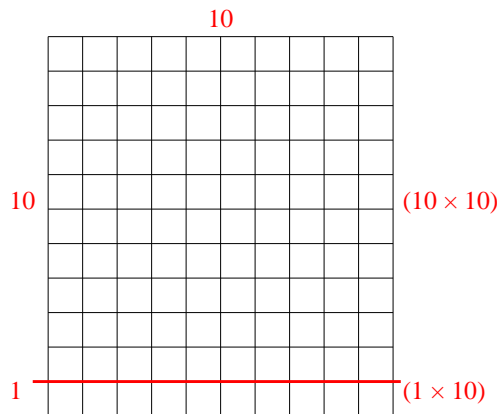
5. _____

6. _____

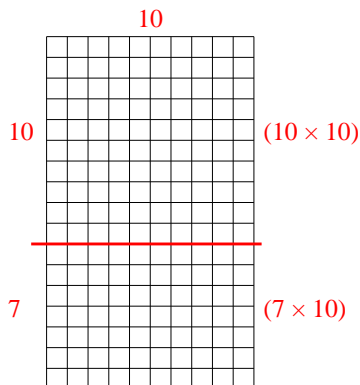


Use the array provided to solve each problem.

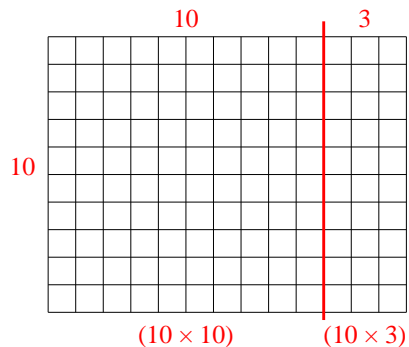
1) $11 \times 10 =$



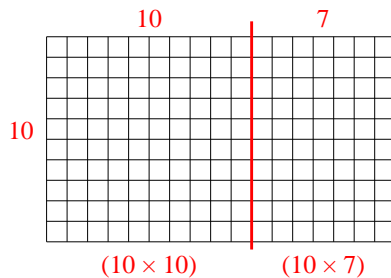
2) $17 \times 10 =$



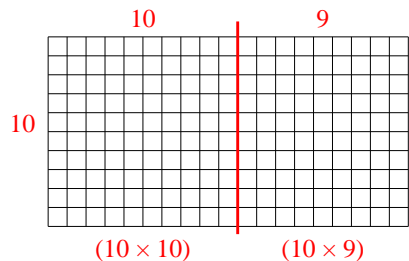
3) $10 \times 13 =$



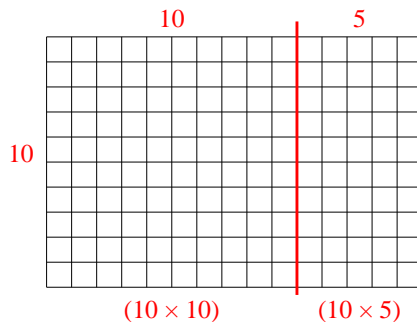
4) $10 \times 17 =$



5) $10 \times 19 =$



6) $10 \times 15 =$



Answers

1. **110**

2. **170**

3. **130**

4. **170**


5. **190**

6. **150**




Use the array provided to solve each problem.


1) $16 \times 10 =$




2) $10 \times 12 =$




3) $19 \times 10 =$




4) $10 \times 19 =$



5) $15 \times 10 =$



6) $10 \times 18 =$



Answers

1. _____

2. _____

3. _____

4. _____

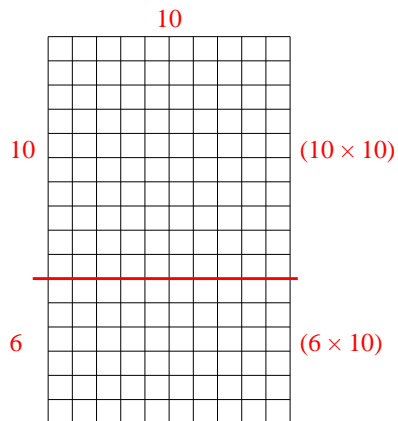
5. _____

6. _____

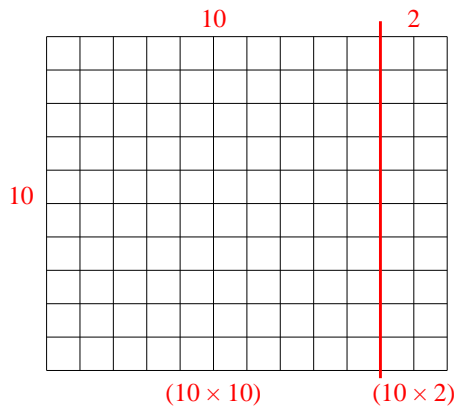


Use the array provided to solve each problem.

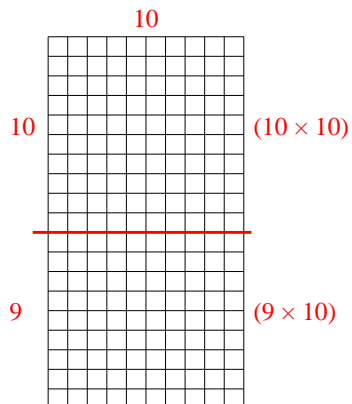
1) $16 \times 10 =$



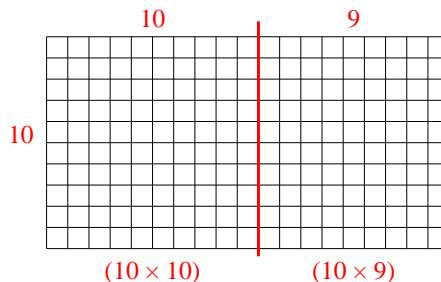
2) $10 \times 12 =$



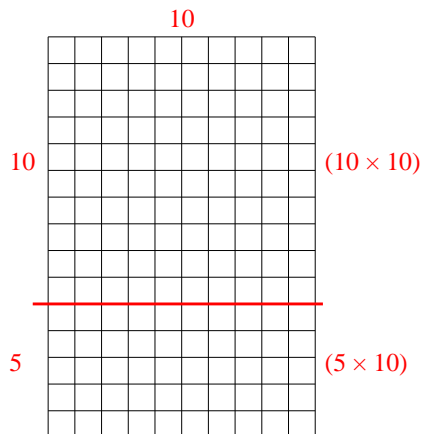
3) $19 \times 10 =$



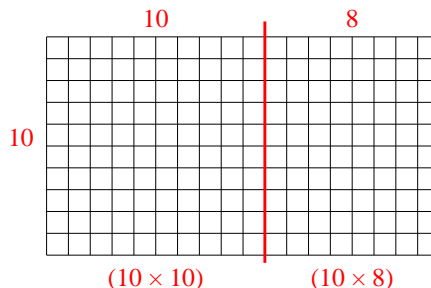
4) $10 \times 19 =$



5) $15 \times 10 =$



6) $10 \times 18 =$



Answers

1. 160

2. 120

3. 190

4. 190


5. 150

6. 180




Use the array provided to solve each problem.


1) $23 \times 20 =$




2) $10 \times 13 =$




3) $10 \times 11 =$




4) $10 \times 17 =$



5) $10 \times 16 =$



6) $19 \times 10 =$



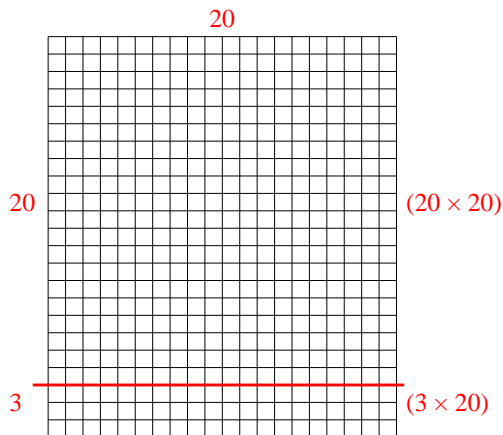
Answers

- 1. _____
- 2. _____
- 3. _____
- 4. _____
- 5. _____
- 6. _____

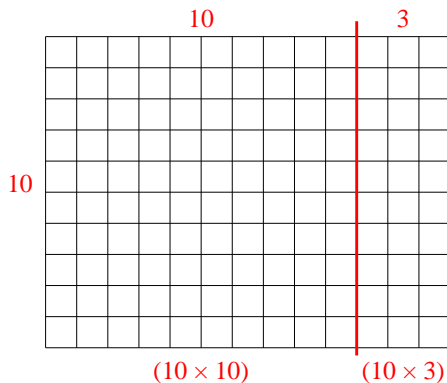


Use the array provided to solve each problem.

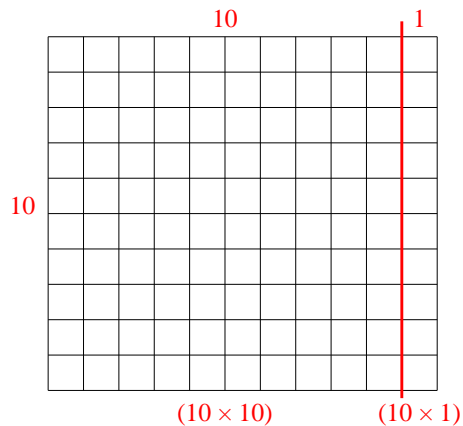
1) $23 \times 20 =$



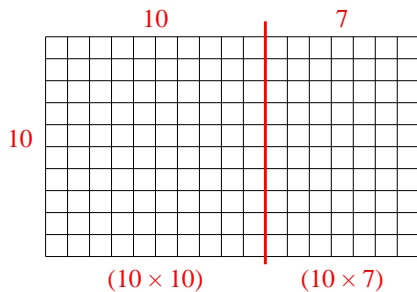
2) $10 \times 13 =$



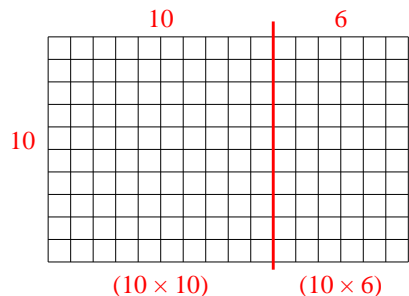
3) $10 \times 11 =$



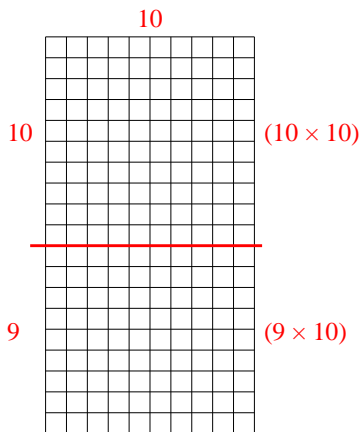
4) $10 \times 17 =$



5) $10 \times 16 =$



6) $19 \times 10 =$



Answers

1. **460**

2. **130**

3. **110**

4. **170**


5. **160**

6. **190**




Use the array provided to solve each problem.


1) $33 \times 20 =$




2) $22 \times 20 =$




3) $10 \times 13 =$




4) $15 \times 10 =$



5) $10 \times 14 =$



6) $12 \times 10 =$



Answers

1. _____

2. _____

3. _____

4. _____

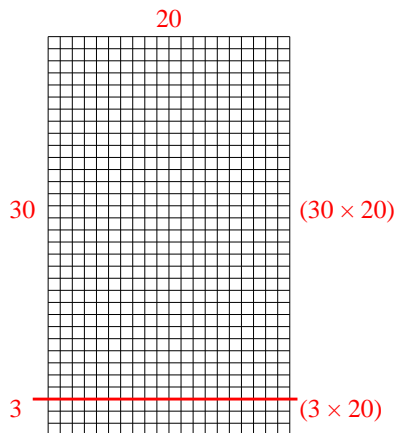
5. _____

6. _____

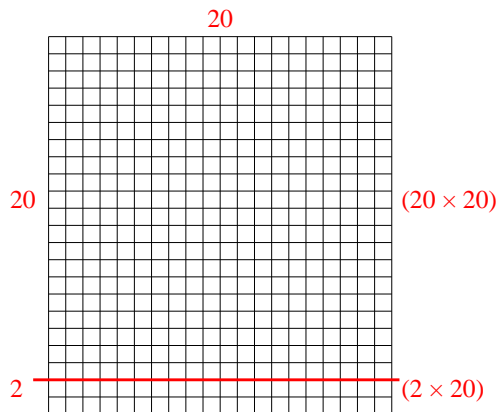


Use the array provided to solve each problem.

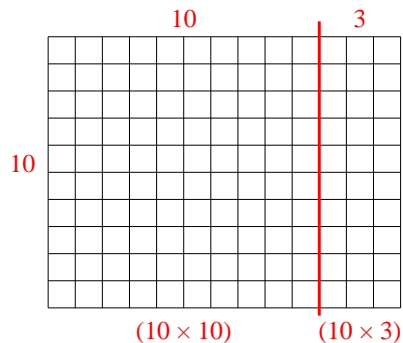
1) $33 \times 20 =$



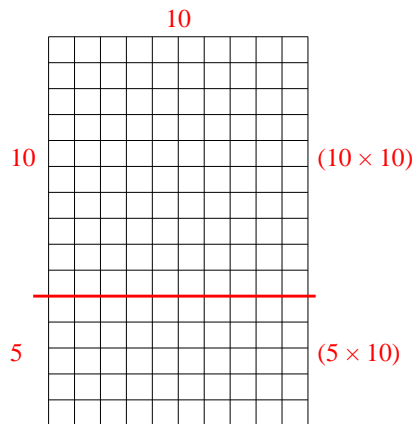
2) $22 \times 20 =$



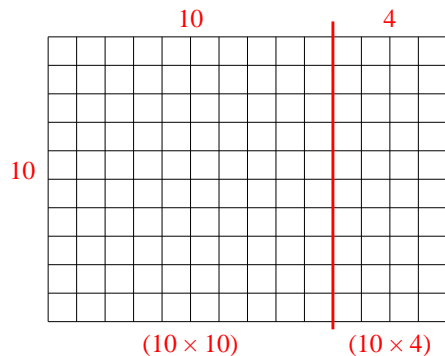
3) $10 \times 13 =$



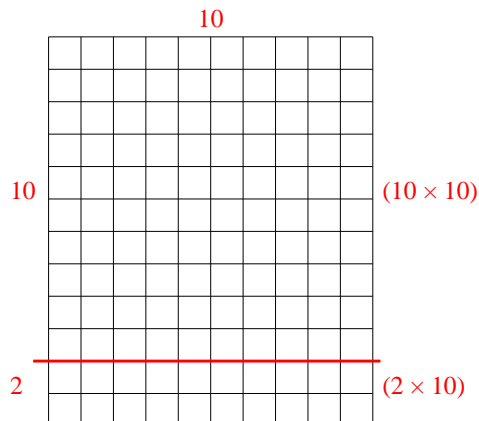
4) $15 \times 10 =$



5) $10 \times 14 =$



6) $12 \times 10 =$



Answers

1. 660

2. 440

3. 130

4. 150


5. 140

6. 120




Use the array provided to solve each problem.


1) $10 \times 13 =$




2) $18 \times 10 =$




3) $14 \times 10 =$




4) $16 \times 10 =$



5) $10 \times 15 =$



6) $10 \times 14 =$



Answers

1. _____

2. _____

3. _____

4. _____

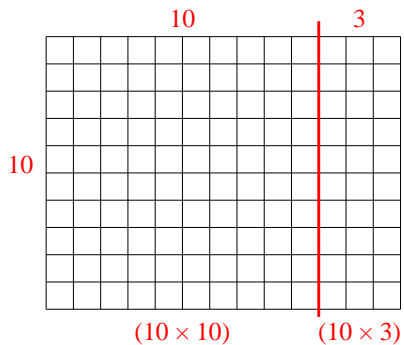
5. _____

6. _____

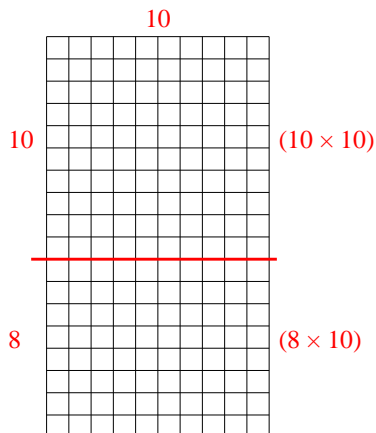


Use the array provided to solve each problem.

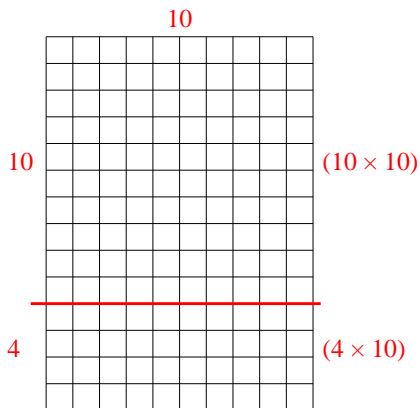
1) $10 \times 13 =$



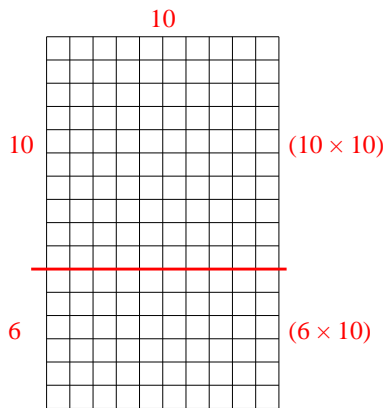
2) $18 \times 10 =$



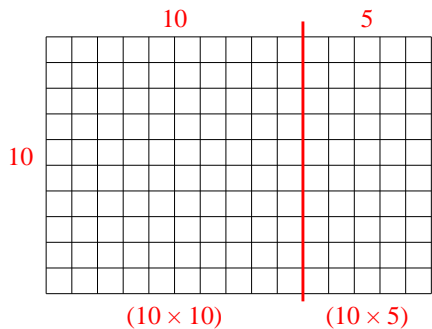
3) $14 \times 10 =$



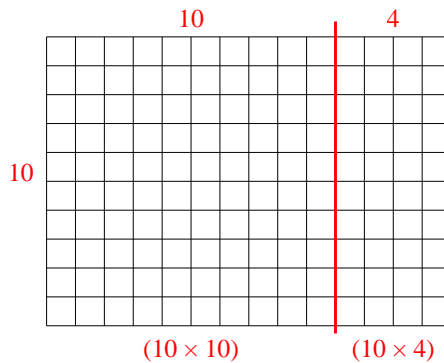
4) $16 \times 10 =$



5) $10 \times 15 =$



6) $10 \times 14 =$



Answers

1. **130**

2. **180**

3. **140**

4. **160**


5. **150**

6. **140**




Use the array provided to solve each problem.


1) $20 \times 22 =$




2) $10 \times 13 =$




3) $15 \times 10 =$




4) $16 \times 10 =$



5) $12 \times 10 =$



6) $10 \times 11 =$



Answers

1. _____

2. _____

3. _____

4. _____

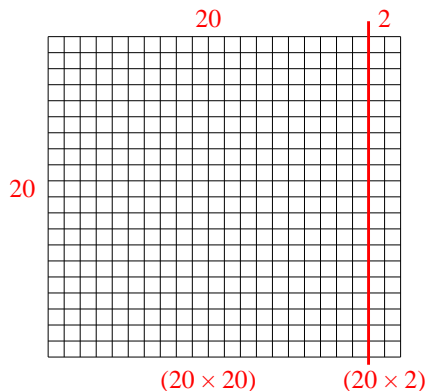
5. _____

6. _____

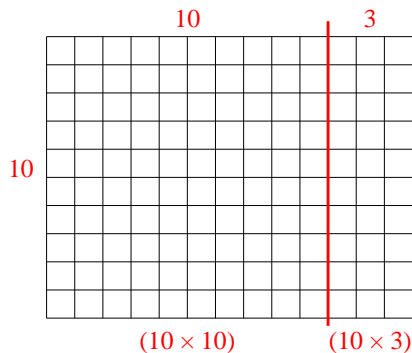


Use the array provided to solve each problem.

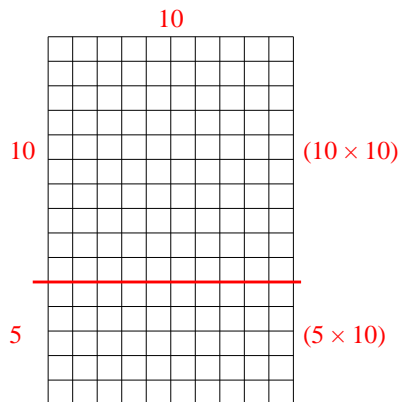
1) $20 \times 22 =$



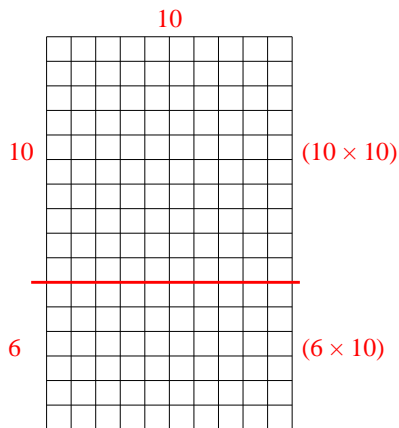
2) $10 \times 13 =$



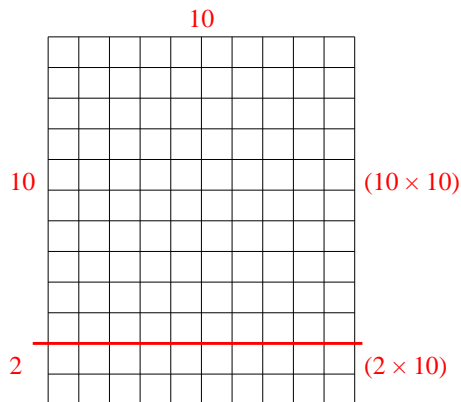
3) $15 \times 10 =$



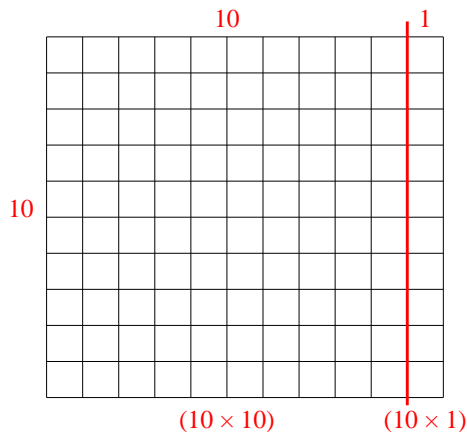
4) $16 \times 10 =$



5) $12 \times 10 =$



6) $10 \times 11 =$



Answers

1. **440**

2. **130**

3. **150**

4. **160**


5. **120**

6. **110**




Use the array provided to solve each problem.


1) $22 \times 10 =$




2) $20 \times 27 =$




3) $10 \times 12 =$




4) $10 \times 19 =$



5) $13 \times 10 =$



6) $18 \times 10 =$



Answers

1. _____

2. _____

3. _____

4. _____

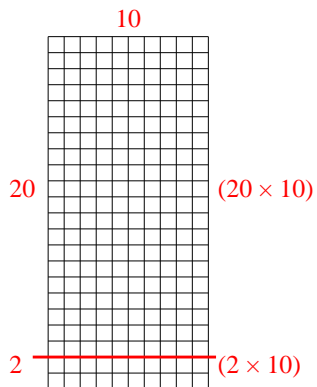
5. _____

6. _____

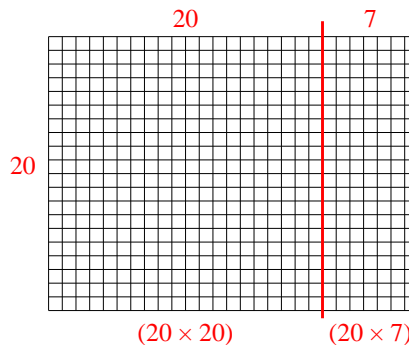


Use the array provided to solve each problem.

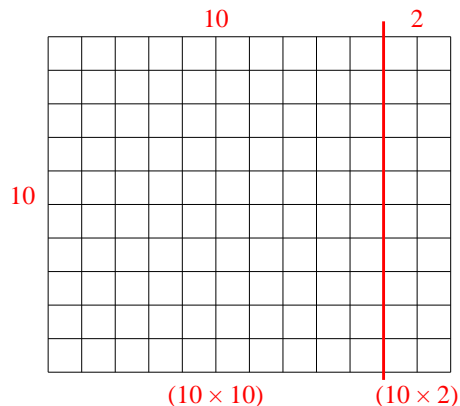
1) $22 \times 10 =$



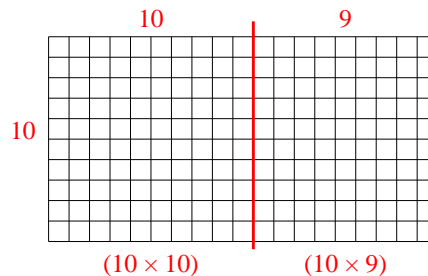
2) $20 \times 27 =$



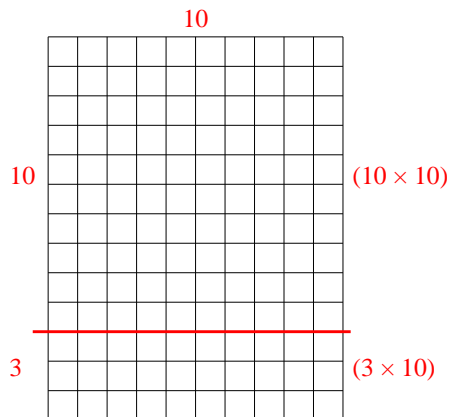
3) $10 \times 12 =$



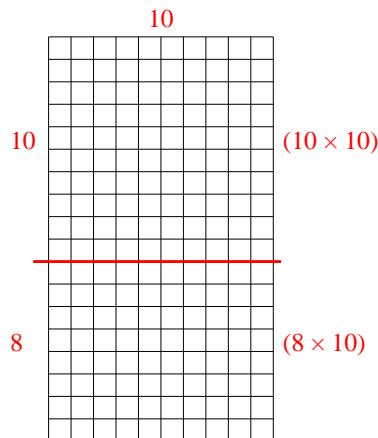
4) $10 \times 19 =$



5) $13 \times 10 =$



6) $18 \times 10 =$



Answers

1. **220**

2. **540**

3. **120**

4. **190**


5. **130**

6. **180**




Use the array provided to solve each problem.


1) $13 \times 10 =$




2) $10 \times 18 =$




3) $10 \times 11 =$




4) $16 \times 10 =$



5) $10 \times 12 =$



6) $15 \times 10 =$



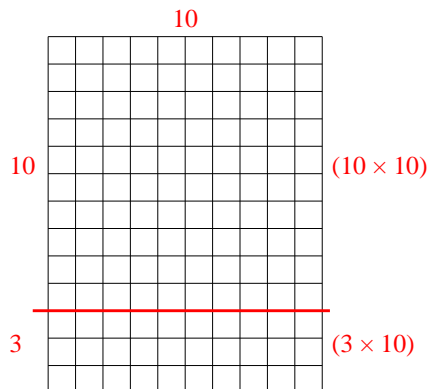
Answers

- 1. _____
- 2. _____
- 3. _____
- 4. _____
- 5. _____
- 6. _____

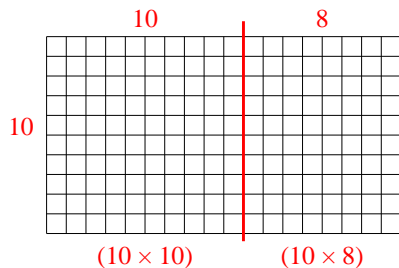


Use the array provided to solve each problem.

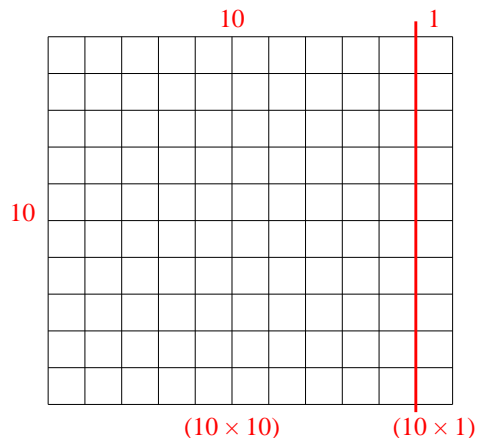
1) $13 \times 10 =$



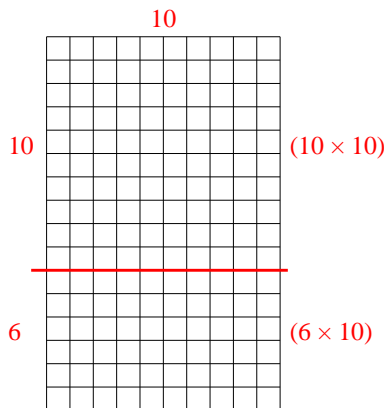
2) $10 \times 18 =$



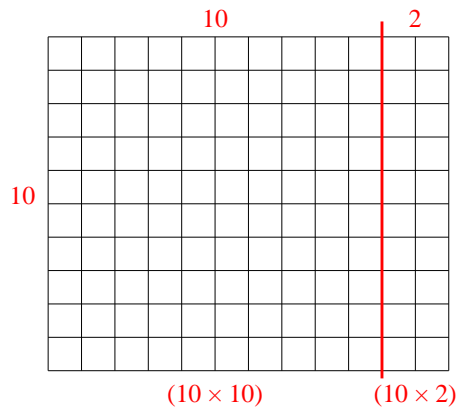
3) $10 \times 11 =$



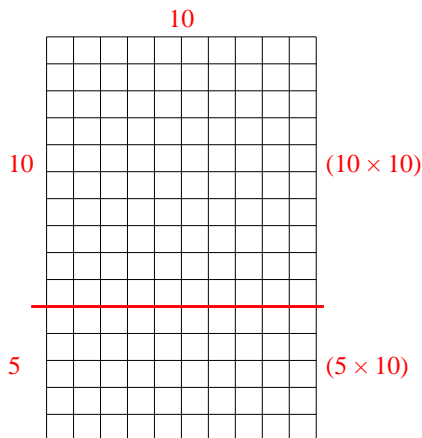
4) $16 \times 10 =$



5) $10 \times 12 =$



6) $15 \times 10 =$



Answers

1. **130**

2. **180**

3. **110**

4. **160**


5. **120**

6. **150**




Use the array provided to solve each problem.


1) $10 \times 16 =$




2) $11 \times 10 =$




3) $10 \times 12 =$




4) $10 \times 18 =$



5) $10 \times 19 =$



6) $10 \times 13 =$



Answers

1. _____

2. _____

3. _____

4. _____

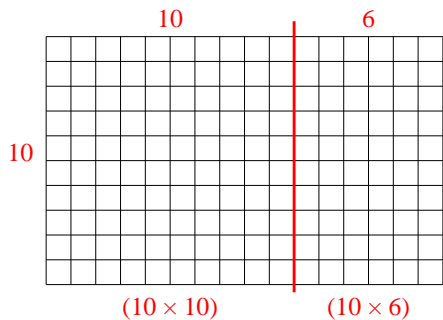
5. _____

6. _____

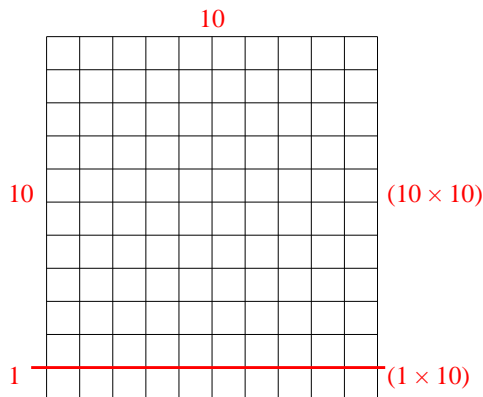


Use the array provided to solve each problem.

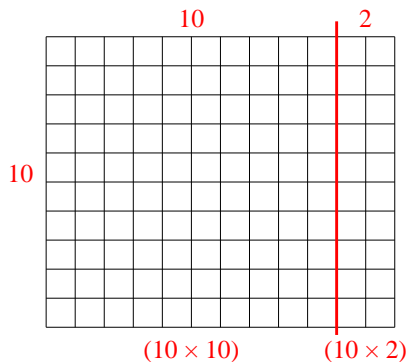
1) $10 \times 16 =$



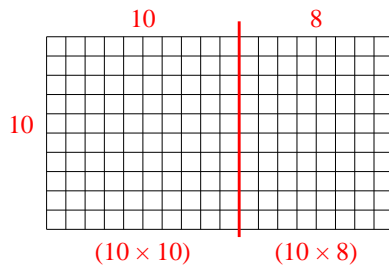
2) $11 \times 10 =$



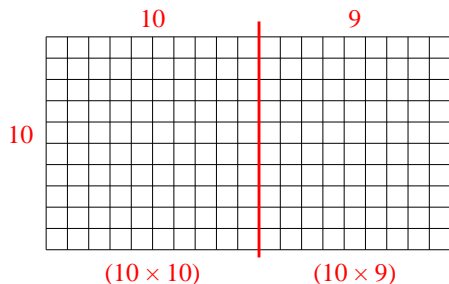
3) $10 \times 12 =$



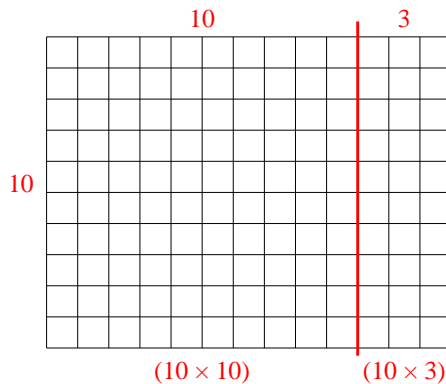
4) $10 \times 18 =$



5) $10 \times 19 =$



6) $10 \times 13 =$



Answers

1. **160**

2. **110**

3. **120**

4. **180**

5. **190**

6. **130**