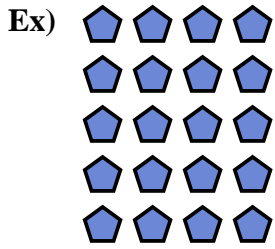




Write an equation to express the array and then find the number of shapes.

Answers




Ex. $5 \times 4 = 20$

1. _____

2. _____

3. _____


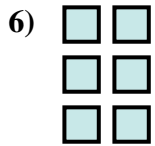


4. _____

5. _____

6. _____

7. _____

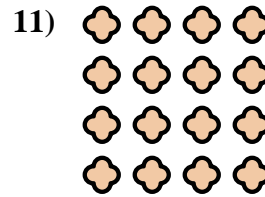
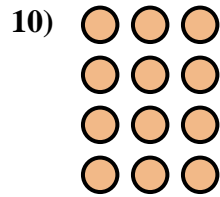



8. _____

9. _____

10. _____

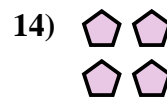


11. _____



12. _____

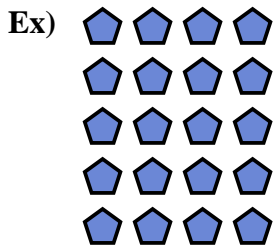
13. _____

14. _____





Write an equation to express the array and then find the number of shapes.



Answers

Ex. $5 \times 4 = 20$

1. $2 \times 3 = 6$

2. $3 \times 3 = 9$

3. $5 \times 2 = 10$

4. $4 \times 5 = 20$

5. $5 \times 5 = 25$

6. $3 \times 2 = 6$

7. $3 \times 5 = 15$

8. $5 \times 3 = 15$

9. $2 \times 4 = 8$

10. $4 \times 3 = 12$

11. $4 \times 4 = 16$

12. $4 \times 2 = 8$

13. $2 \times 5 = 10$

14. $2 \times 2 = 4$

