



Use lattice multiplication to solve each problem.

1)  $133 \times 55 =$



2)  $680 \times 53 =$



3)  $362 \times 51 =$



4)  $703 \times 44 =$



5)  $560 \times 57 =$



6)  $637 \times 90 =$



7)  $711 \times 62 =$



8)  $361 \times 36 =$



9)  $743 \times 53 =$



10)  $344 \times 41 =$



11)  $279 \times 94 =$



12)  $862 \times 89 =$



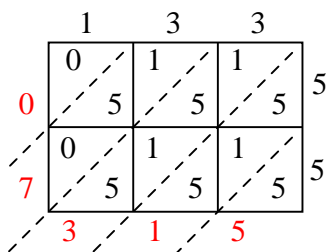
**Answers**

1. \_\_\_\_\_
2. \_\_\_\_\_
3. \_\_\_\_\_
4. \_\_\_\_\_
5. \_\_\_\_\_
6. \_\_\_\_\_
7. \_\_\_\_\_
8. \_\_\_\_\_
9. \_\_\_\_\_
10. \_\_\_\_\_
11. \_\_\_\_\_
12. \_\_\_\_\_

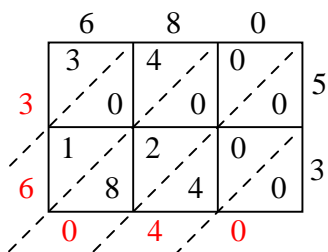


Use lattice multiplication to solve each problem.

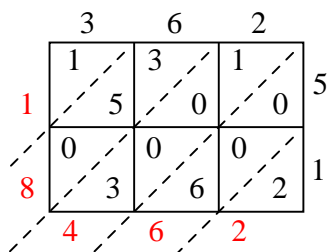
1)  $133 \times 55 =$



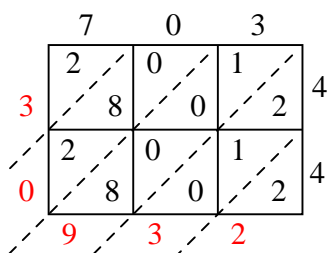
2)  $680 \times 53 =$



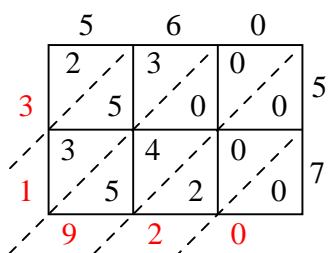
3)  $362 \times 51 =$



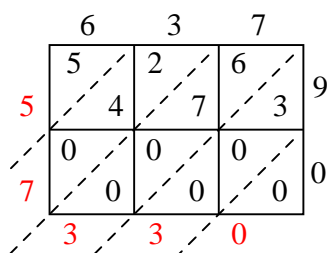
4)  $703 \times 44 =$



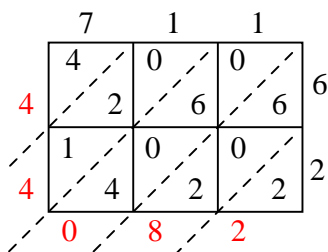
5)  $560 \times 57 =$



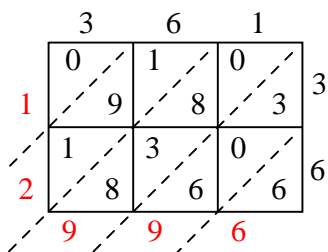
6)  $637 \times 90 =$



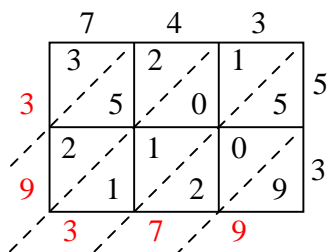
7)  $711 \times 62 =$



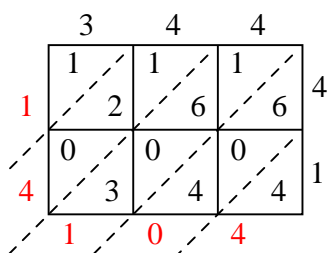
8)  $361 \times 36 =$



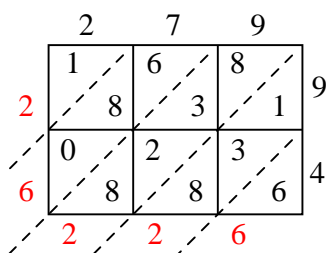
9)  $743 \times 53 =$



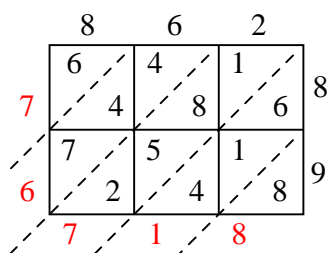
10)  $344 \times 41 =$



11)  $279 \times 94 =$



12)  $862 \times 89 =$



Answers

1. **7,315**

2. **36,040**

3. **18,462**

4. **30,932**

5. **31,920**

6. **57,330**

7. **44,082**

8. **12,996**

9. **39,379**

10. **14,104**

11. **26,226**

12. **76,718**