



Use lattice multiplication to solve each problem.

1) $617 \times 36 =$



2) $902 \times 60 =$



3) $936 \times 11 =$



4) $506 \times 97 =$



5) $375 \times 92 =$



6) $944 \times 94 =$



7) $773 \times 32 =$



8) $444 \times 54 =$



9) $950 \times 35 =$



10) $608 \times 49 =$



11) $289 \times 74 =$



12) $530 \times 32 =$



Answers

1. _____

2. _____

3. _____

4. _____

5. _____

6. _____

7. _____

8. _____

9. _____

10. _____

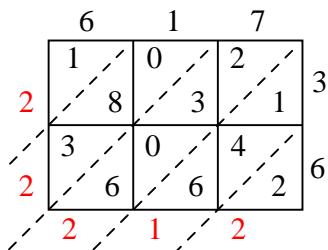
11. _____

12. _____

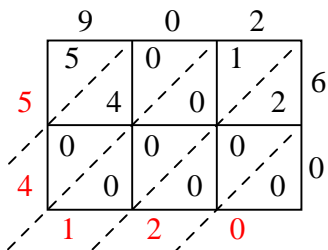


Use lattice multiplication to solve each problem.

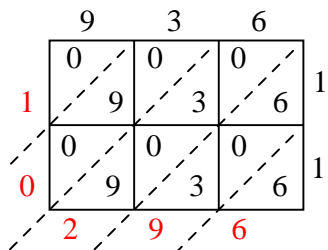
1) $617 \times 36 =$



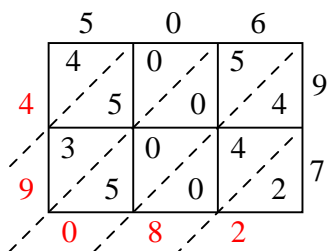
2) $902 \times 60 =$



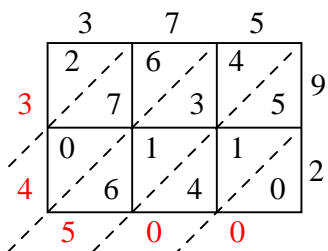
3) $936 \times 11 =$



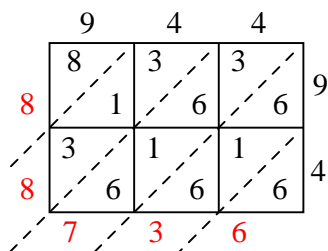
4) $506 \times 97 =$



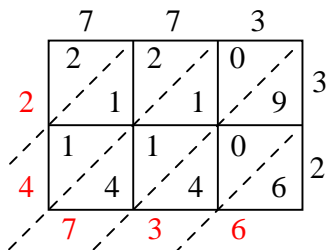
5) $375 \times 92 =$



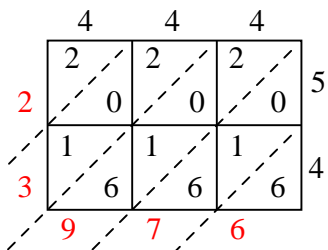
6) $944 \times 94 =$



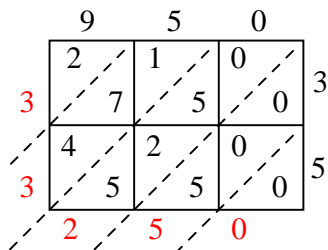
7) $773 \times 32 =$



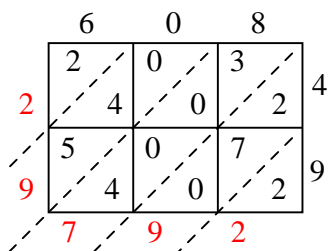
8) $444 \times 54 =$



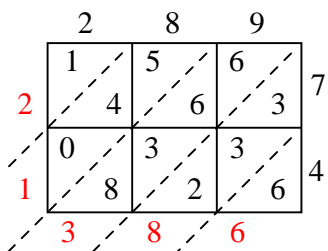
9) $950 \times 35 =$



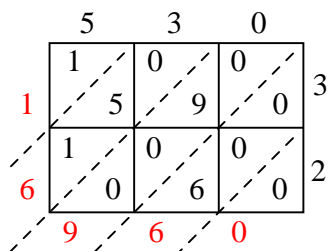
10) $608 \times 49 =$



11) $289 \times 74 =$



12) $530 \times 32 =$



Answers

1. **22,212**

2. **54,120**

3. **10,296**

4. **49,082**

5. **34,500**

6. **88,736**

7. **24,736**

8. **23,976**

9. **33,250**

10. **29,792**

11. **21,386**

12. **16,960**