

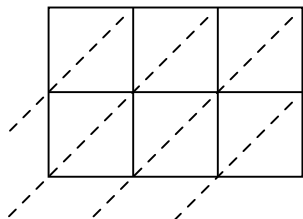


Use lattice multiplication to solve each problem.

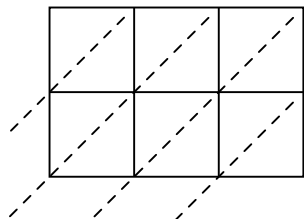
1) $485 \times 11 =$



2) $401 \times 55 =$



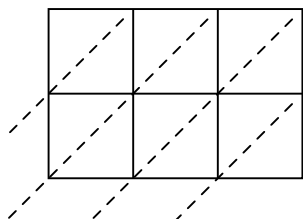
3) $665 \times 39 =$



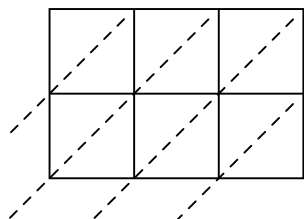
4) $257 \times 58 =$



5) $242 \times 51 =$



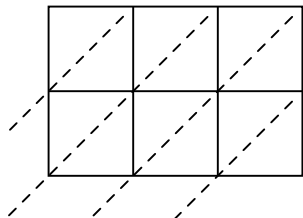
6) $338 \times 18 =$



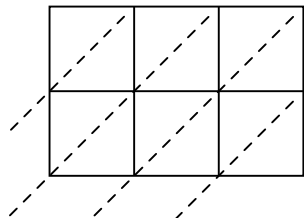
7) $690 \times 32 =$



8) $309 \times 90 =$



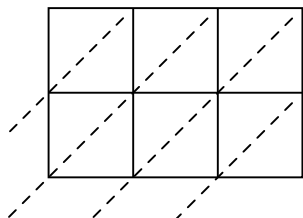
9) $211 \times 95 =$



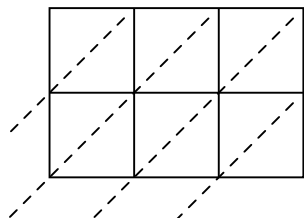
10) $226 \times 83 =$



11) $329 \times 59 =$



12) $306 \times 62 =$



Answers

1. _____

2. _____

3. _____

4. _____

5. _____

6. _____

7. _____

8. _____

9. _____

10. _____

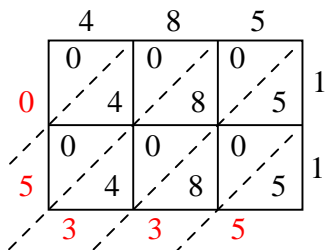
11. _____

12. _____

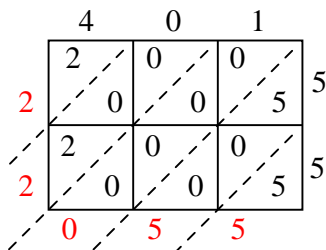


Use lattice multiplication to solve each problem.

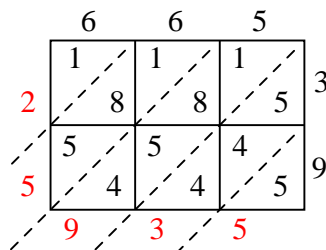
1) $485 \times 11 =$



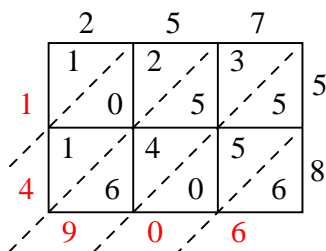
2) $401 \times 55 =$



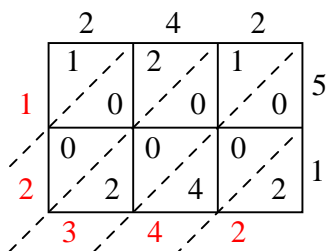
3) $665 \times 39 =$



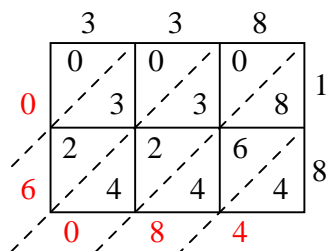
4) $257 \times 58 =$



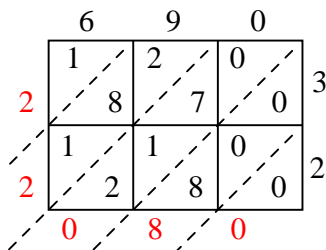
5) $242 \times 51 =$



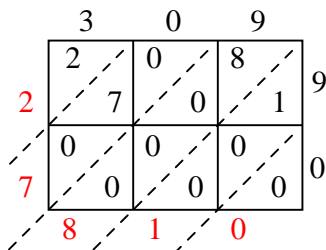
6) $338 \times 18 =$



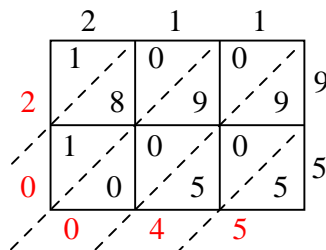
7) $690 \times 32 =$



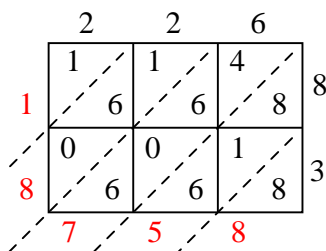
8) $309 \times 90 =$



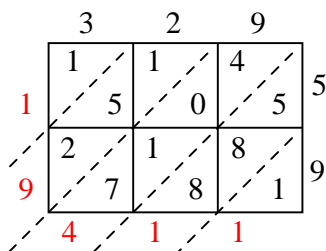
9) $211 \times 95 =$



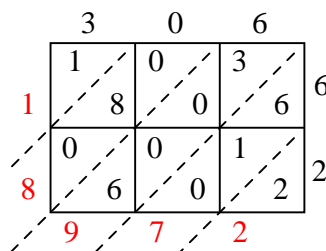
10) $226 \times 83 =$



11) $329 \times 59 =$



12) $306 \times 62 =$



Answers

1. **5,335**

2. **22,055**

3. **25,935**

4. **14,906**

5. **12,342**

6. **6,084**

7. **22,080**

8. **27,810**

9. **20,045**

10. **18,758**

11. **19,411**

12. **18,972**