



Use lattice multiplication to solve each problem.

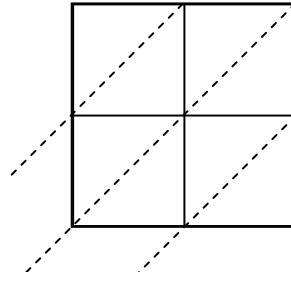
1) $27 \times 78 =$



2) $39 \times 51 =$



3) $54 \times 95 =$



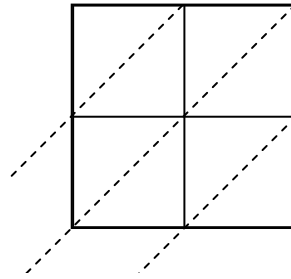
4) $79 \times 28 =$



5) $56 \times 14 =$



6) $23 \times 46 =$



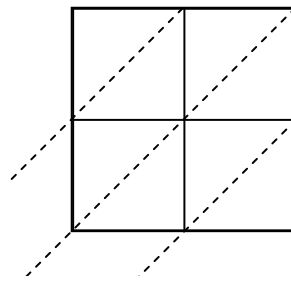
7) $49 \times 10 =$



8) $49 \times 15 =$



9) $22 \times 85 =$



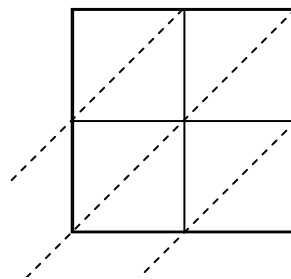
10) $62 \times 17 =$



11) $92 \times 41 =$



12) $85 \times 63 =$



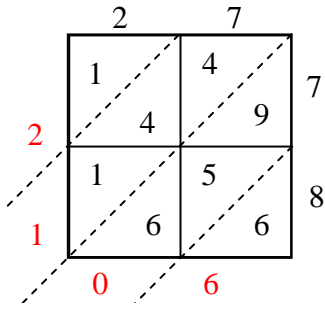
Answers

1. _____
2. _____
3. _____
4. _____
5. _____
6. _____
7. _____
8. _____
9. _____
10. _____
11. _____
12. _____

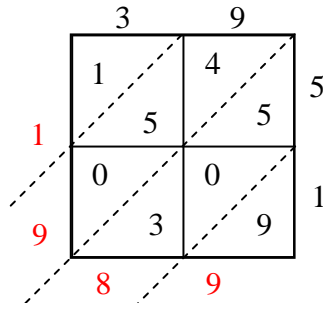


Use lattice multiplication to solve each problem.

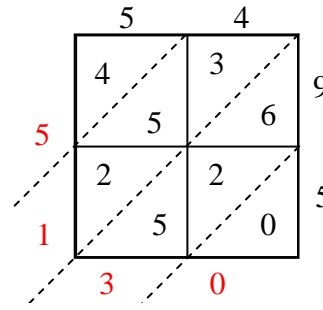
1) $27 \times 78 =$



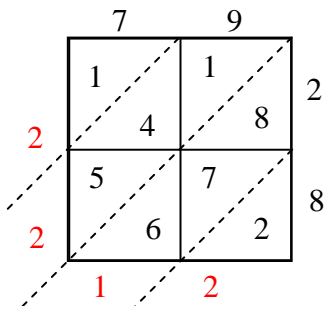
2) $39 \times 51 =$



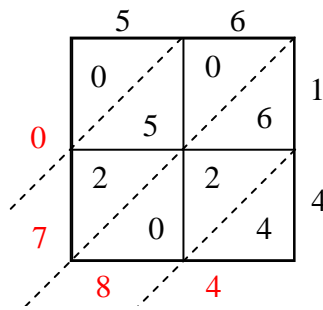
3) $54 \times 95 =$



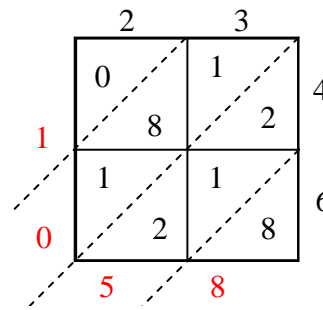
4) $79 \times 28 =$



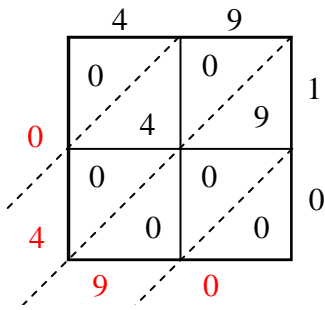
5) $56 \times 14 =$



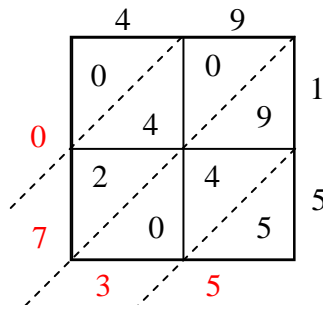
6) $23 \times 46 =$



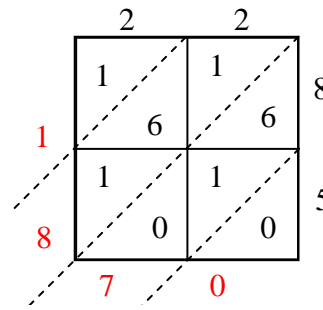
7) $49 \times 10 =$



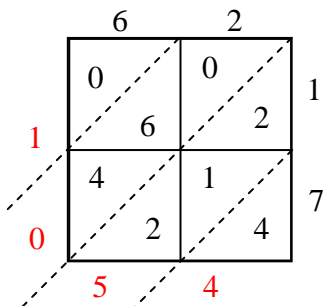
8) $49 \times 15 =$



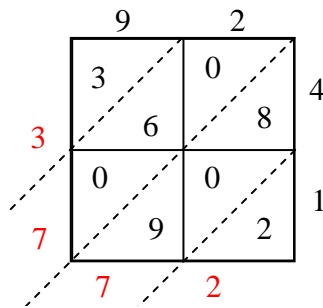
9) $22 \times 85 =$



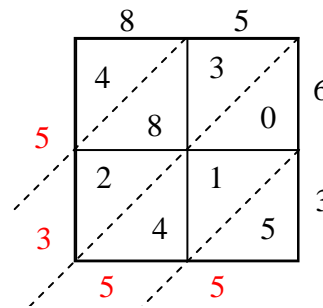
10) $62 \times 17 =$



11) $92 \times 41 =$



12) $85 \times 63 =$



Answers

1. 2,106
2. 1,989
3. 5,130
4. 2,212
5. 784
6. 1,058
7. 490
8. 735
9. 1,870
10. 1,054
11. 3,772
12. 5,355