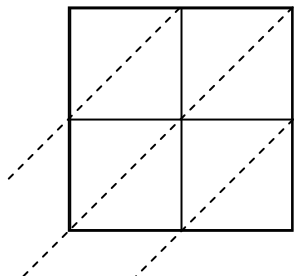


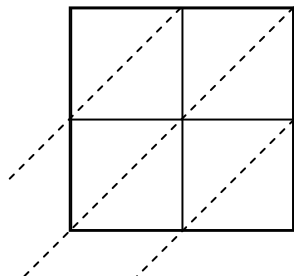


Use lattice multiplication to solve each problem.

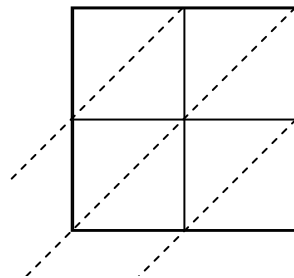
1)  $71 \times 47 =$



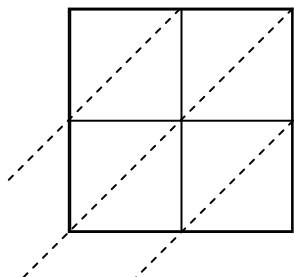
2)  $48 \times 31 =$



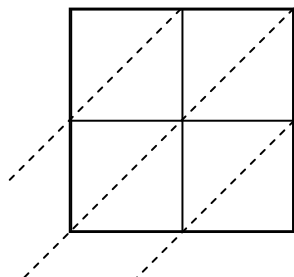
3)  $76 \times 52 =$



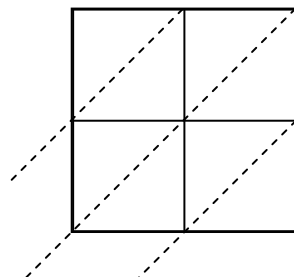
4)  $36 \times 82 =$



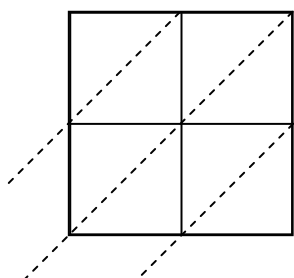
5)  $40 \times 86 =$



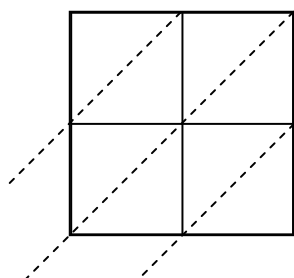
6)  $62 \times 58 =$



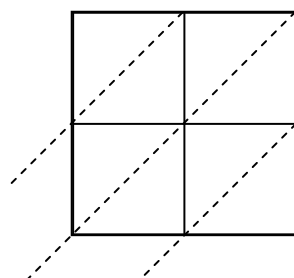
7)  $88 \times 37 =$



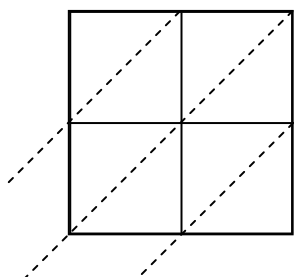
8)  $85 \times 68 =$



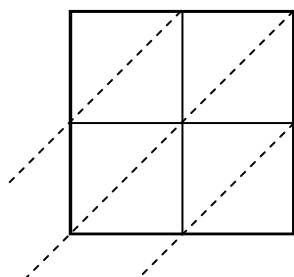
9)  $91 \times 39 =$



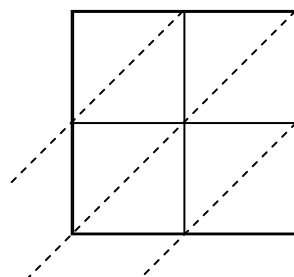
10)  $44 \times 13 =$



11)  $83 \times 57 =$



12)  $34 \times 75 =$



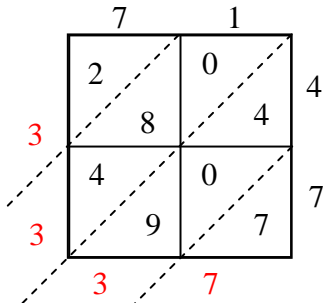
**Answers**

1. \_\_\_\_\_
2. \_\_\_\_\_
3. \_\_\_\_\_
4. \_\_\_\_\_
5. \_\_\_\_\_
6. \_\_\_\_\_
7. \_\_\_\_\_
8. \_\_\_\_\_
9. \_\_\_\_\_
10. \_\_\_\_\_
11. \_\_\_\_\_
12. \_\_\_\_\_

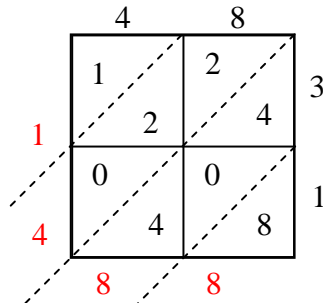


Use lattice multiplication to solve each problem.

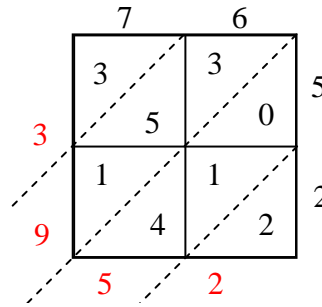
1)  $71 \times 47 =$



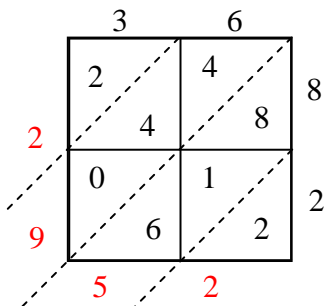
2)  $48 \times 31 =$



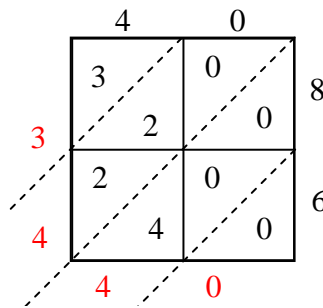
3)  $76 \times 52 =$



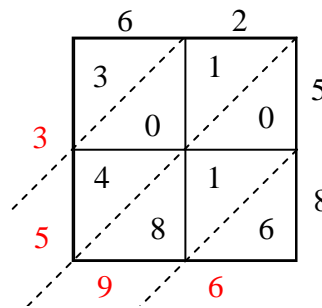
4)  $36 \times 82 =$



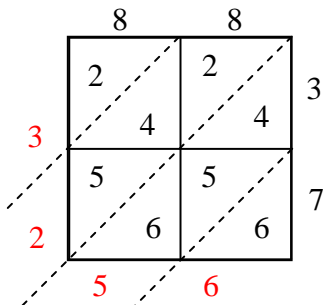
5)  $40 \times 86 =$



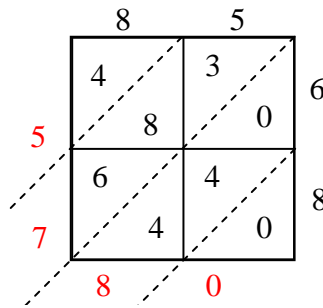
6)  $62 \times 58 =$



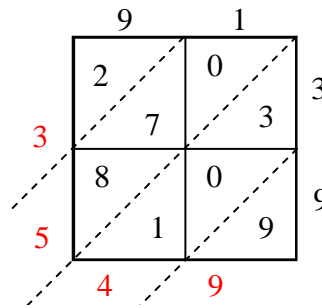
7)  $88 \times 37 =$



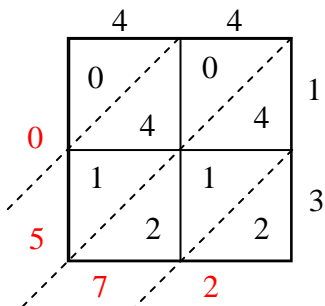
8)  $85 \times 68 =$



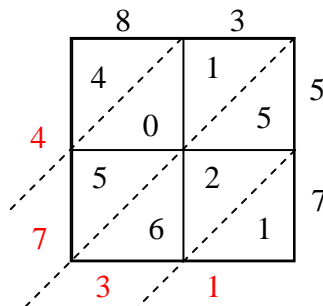
9)  $91 \times 39 =$



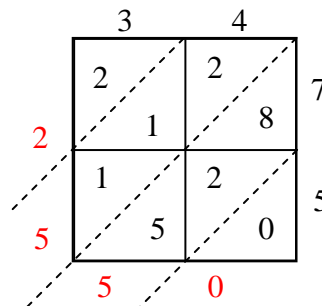
10)  $44 \times 13 =$



11)  $83 \times 57 =$



12)  $34 \times 75 =$



Answers

1. **3,337**

2. **1,488**

3. **3,952**

4. **2,952**

5. **3,440**

6. **3,596**

7. **3,256**

8. **5,780**

9. **3,549**

10. **572**

11. **4,731**

12. **2,550**