



Use lattice multiplication to solve each problem.

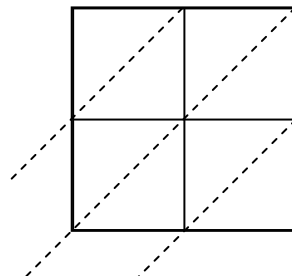
1) $77 \times 36 =$



2) $92 \times 60 =$



3) $36 \times 11 =$



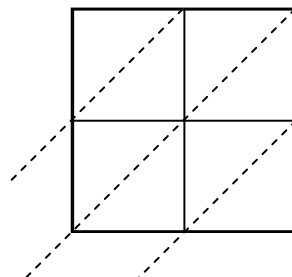
4) $56 \times 97 =$



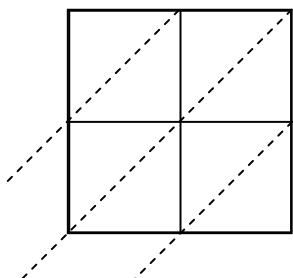
5) $15 \times 92 =$



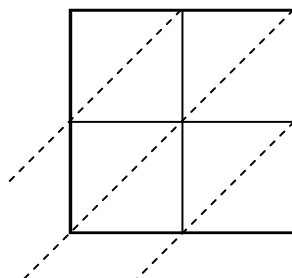
6) $44 \times 94 =$



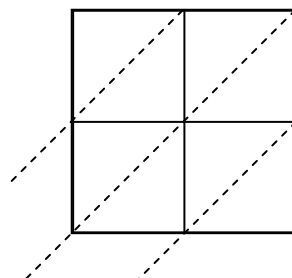
7) $53 \times 32 =$



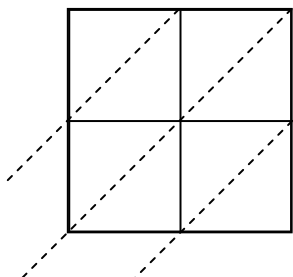
8) $84 \times 54 =$



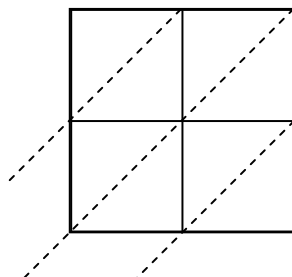
9) $50 \times 35 =$



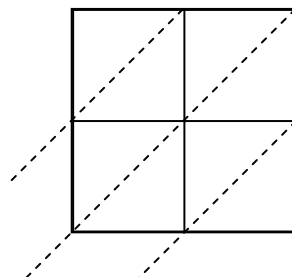
10) $68 \times 49 =$



11) $19 \times 74 =$



12) $80 \times 32 =$



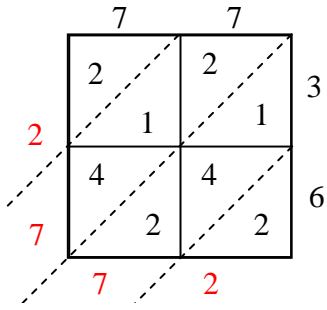
Answers

1. _____
2. _____
3. _____
4. _____
5. _____
6. _____
7. _____
8. _____
9. _____
10. _____
11. _____
12. _____

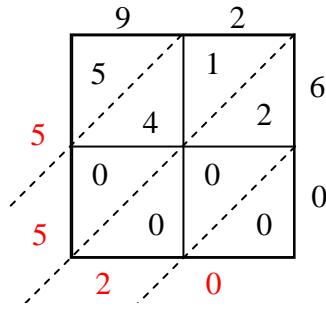


Use lattice multiplication to solve each problem.

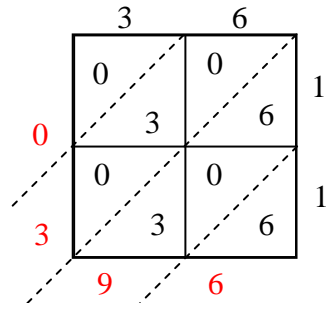
1) $77 \times 36 =$



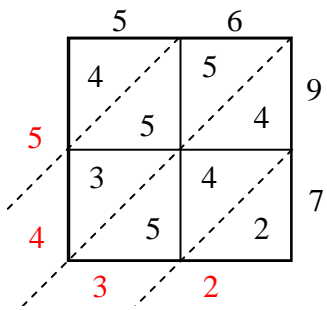
2) $92 \times 60 =$



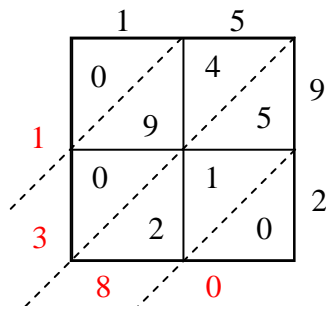
3) $36 \times 11 =$



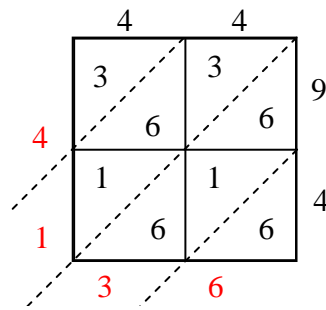
4) $56 \times 97 =$



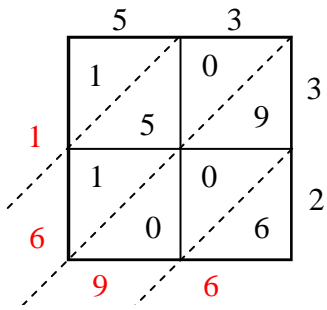
5) $15 \times 92 =$



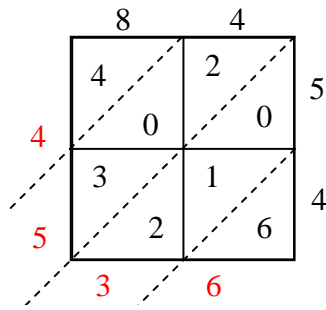
6) $44 \times 94 =$



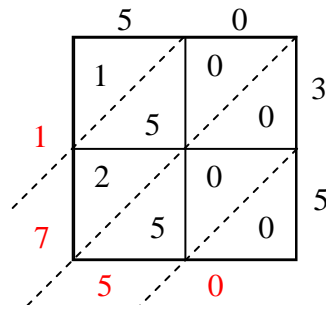
7) $53 \times 32 =$



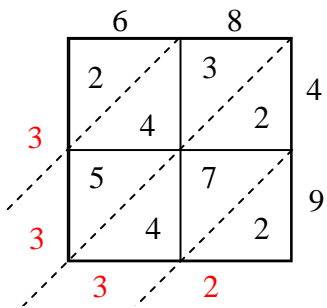
8) $84 \times 54 =$



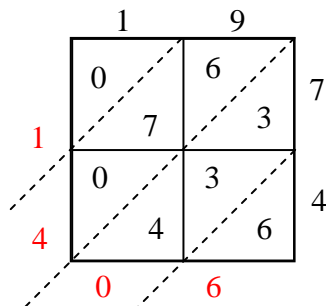
9) $50 \times 35 =$



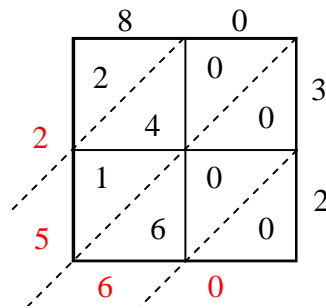
10) $68 \times 49 =$



11) $19 \times 74 =$



12) $80 \times 32 =$



Answers

1. 2,772

2. 5,520

3. 396

4. 5,432

5. 1,380

6. 4,136

7. 1,696

8. 4,536

9. 1,750

10. 3,332

11. 1,406

12. 2,560