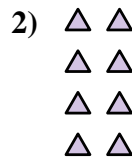
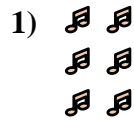
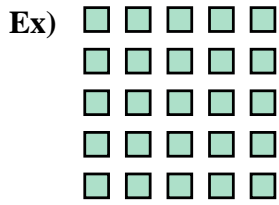




Write each array as an addition problem and solve.

Answers



Ex. 5+5+5+5+5=25

1. _____

2. _____

3. _____

4. _____

5. _____

6. _____

7. _____

8. _____

9. _____

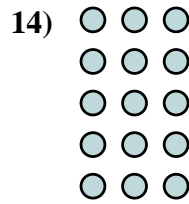
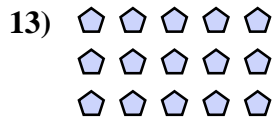
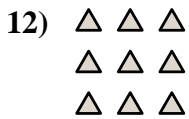
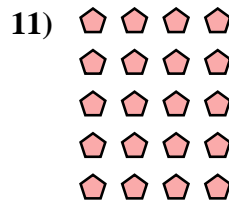
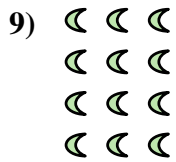


10. _____

11. _____

12. _____

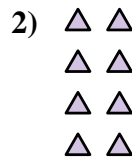
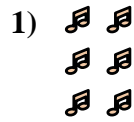
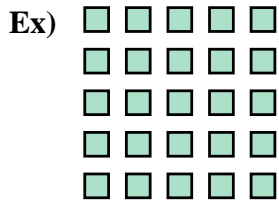
13. _____

14. _____





Write each array as an addition problem and solve.



Answers

Ex. 5+5+5+5+5=25

1. 2+2+2=6

2. 2+2+2+2=8

3. 3+3=6

4. 5+5+5+5=20

5. 2+2+2+2+2=10

6. 2+2=4

7. 4+4+4=12

8. 5+5=10

9. 3+3+3+3=12

10. 4+4+4+4=16

11. 4+4+4+4+4=20

12. 3+3+3=9

13. 5+5+5=15

14. 3+3+3+3+3=15

