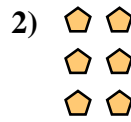




Write each array as an addition problem and solve.

Answers



Ex.  $2+2=4$

1. \_\_\_\_\_

2. \_\_\_\_\_

3. \_\_\_\_\_

4. \_\_\_\_\_

5. \_\_\_\_\_

6. \_\_\_\_\_

7. \_\_\_\_\_

8. \_\_\_\_\_

9. \_\_\_\_\_


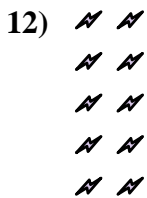
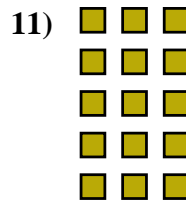
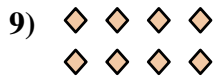




10. \_\_\_\_\_

11. \_\_\_\_\_

12. \_\_\_\_\_



13. \_\_\_\_\_

14. \_\_\_\_\_








Write each array as an addition problem and solve.




Ex)   





1)   
  






2)   
  


Answers

Ex. 2+2=4

3)   
  
  


4)   
  


5)   
  
  


1. 3+3+3=9

2. 2+2+2=6




3. 3+3+3+3=12

4. 4+4+4=12

5. 2+2+2+2=8

6. 4+4+4+4=16

7. 5+5+5=15

6)   
  
  


7)   
  







8)   
  
  


8. 5+5+5+5=20

9. 4+4=8

9)   


10)   


11)   
  
  
  







10. 3+3=6

11. 3+3+3+3+3=15

12. 2+2+2+2+2=10

13. 5+5=10

14. 4+4+4+4+4=20

12)   
  
  
  


13)   


14) 