

**Determine which choice best describes the coins in the order shown.****Answers**

1)



- A. nickel, dime, quarter, penny  
B. penny, dime, quarter, nickel  
C. nickel, quarter, penny, dime  
D. nickel, quarter, dime, penny

1. \_\_\_\_\_

2. \_\_\_\_\_

2)



- A. quarter, nickel, penny, dime  
B. dime, nickel, quarter, penny  
C. penny, nickel, quarter, dime  
D. nickel, penny, quarter, dime

3. \_\_\_\_\_

4. \_\_\_\_\_

3)



- A. penny, dime, nickel, quarter  
B. quarter, dime, nickel, penny  
C. quarter, penny, nickel, dime  
D. penny, quarter, nickel, dime

5. \_\_\_\_\_

6. \_\_\_\_\_


4)



- A. quarter, penny, dime, nickel  
B. penny, nickel, quarter, dime  
C. quarter, penny, nickel, dime  
D. nickel, penny, dime, quarter

8. \_\_\_\_\_

5)



- A. penny, dime, nickel, quarter  
B. dime, quarter, nickel, penny  
C. quarter, dime, penny, nickel  
D. penny, quarter, dime, nickel

6)



- A. dime, penny, quarter, nickel  
B. dime, quarter, nickel, penny  
C. penny, nickel, quarter, dime  
D. quarter, dime, penny, nickel

7)



- A. nickel, quarter, dime, penny  
B. quarter, penny, dime, nickel  
C. dime, nickel, quarter, penny  
D. dime, penny, nickel, quarter

8)



- A. penny, quarter, nickel, dime  
B. dime, nickel, quarter, penny  
C. quarter, nickel, penny, dime  
D. penny, nickel, quarter, dime



Determine which choice best describes the coins in the order shown.

1)



- A. nickel, dime, quarter, penny  
B. penny, dime, quarter, nickel  
C. nickel, quarter, penny, dime  
D. nickel, quarter, dime, penny

2)



- A. quarter, nickel, penny, dime  
B. dime, nickel, quarter, penny  
C. penny, nickel, quarter, dime  
D. nickel, penny, quarter, dime

3)



- A. penny, dime, nickel, quarter  
B. quarter, dime, nickel, penny  
C. quarter, penny, nickel, dime  
D. penny, quarter, nickel, dime

4)




- A. quarter, penny, dime, nickel  
B. penny, nickel, quarter, dime  
C. quarter, penny, nickel, dime  
D. nickel, penny, dime, quarter

5)



- A. penny, dime, nickel, quarter  
B. dime, quarter, nickel, penny  
C. quarter, dime, penny, nickel  
D. penny, quarter, dime, nickel

6)



- A. dime, penny, quarter, nickel  
B. dime, quarter, nickel, penny  
C. penny, nickel, quarter, dime  
D. quarter, dime, penny, nickel

7)



- A. nickel, quarter, dime, penny  
B. quarter, penny, dime, nickel  
C. dime, nickel, quarter, penny  
D. dime, penny, nickel, quarter

8)



- A. penny, quarter, nickel, dime  
B. dime, nickel, quarter, penny  
C. quarter, nickel, penny, dime  
D. penny, nickel, quarter, dime

Answers

1. **C**  
2. **D**  
3. **C**  
4. **B**  
5. **C**  
6. **D**  
7. **B**  
8. **A**

**Determine which choice best describes the coins in the order shown.****Answers**

1)



- A. penny, quarter, nickel, dime  
B. quarter, nickel, dime, penny  
C. dime, nickel, penny, quarter  
D. penny, nickel, quarter, dime

1. \_\_\_\_\_

2)



- A. nickel, penny, quarter, dime  
B. nickel, quarter, dime, penny  
C. dime, nickel, quarter, penny  
D. dime, quarter, nickel, penny

2. \_\_\_\_\_

3)



- A. nickel, quarter, penny, dime  
B. nickel, dime, penny, quarter  
C. penny, quarter, dime, nickel  
D. dime, nickel, penny, quarter

3. \_\_\_\_\_

4)



- A. dime, nickel, quarter, penny  
B. penny, quarter, dime, nickel  
C. nickel, quarter, dime, penny  
D. quarter, nickel, penny, dime

4. \_\_\_\_\_

5)



- A. quarter, penny, dime, nickel  
B. penny, quarter, dime, nickel  
C. nickel, quarter, dime, penny  
D. penny, dime, quarter, nickel

5. \_\_\_\_\_

6)



- A. quarter, dime, penny, nickel  
B. dime, nickel, quarter, penny  
C. dime, quarter, nickel, penny  
D. penny, nickel, dime, quarter

6. \_\_\_\_\_

7)



- A. quarter, penny, nickel, dime  
B. nickel, dime, penny, quarter  
C. nickel, penny, dime, quarter  
D. penny, nickel, quarter, dime

7. \_\_\_\_\_

8)



- A. dime, nickel, penny, quarter  
B. penny, nickel, quarter, dime  
C. nickel, dime, penny, quarter  
D. penny, dime, nickel, quarter

8. \_\_\_\_\_



Determine which choice best describes the coins in the order shown.

1)



- A. penny, quarter, nickel, dime  
B. quarter, nickel, dime, penny  
C. dime, nickel, penny, quarter  
D. penny, nickel, quarter, dime

2)



- A. nickel, penny, quarter, dime  
B. nickel, quarter, dime, penny  
C. dime, nickel, quarter, penny  
D. dime, quarter, nickel, penny

3)



- A. nickel, quarter, penny, dime  
B. nickel, dime, penny, quarter  
C. penny, quarter, dime, nickel  
D. dime, nickel, penny, quarter

4)



- A. dime, nickel, quarter, penny  
B. penny, quarter, dime, nickel  
C. nickel, quarter, dime, penny  
D. quarter, nickel, penny, dime

5)



- A. quarter, penny, dime, nickel  
B. penny, quarter, dime, nickel  
C. nickel, quarter, dime, penny  
D. penny, dime, quarter, nickel

6)



- A. quarter, dime, penny, nickel  
B. dime, nickel, quarter, penny  
C. dime, quarter, nickel, penny  
D. penny, nickel, dime, quarter

7)



- A. quarter, penny, nickel, dime  
B. nickel, dime, penny, quarter  
C. nickel, penny, dime, quarter  
D. penny, nickel, quarter, dime

8)



- A. dime, nickel, penny, quarter  
B. penny, nickel, quarter, dime  
C. nickel, dime, penny, quarter  
D. penny, dime, nickel, quarter

**Answers**

1. **D**  
2. **A**  
3. **D**  
4. **B**  
5. **D**  
6. **A**  
7. **D**  
8. **B**

**Determine which choice best describes the coins in the order shown.****Answers**

1)




- A. dime, nickel, penny, quarter  
B. penny, quarter, nickel, dime  
C. dime, penny, quarter, nickel  
D. quarter, nickel, penny, dime

1. \_\_\_\_\_

2. \_\_\_\_\_

2)



- A. quarter, dime, penny, nickel  
B. nickel, dime, penny, quarter  
C. penny, nickel, quarter, dime  
D. nickel, quarter, dime, penny

3. \_\_\_\_\_

4. \_\_\_\_\_

3)



- A. penny, quarter, dime, nickel  
B. dime, nickel, penny, quarter  
C. nickel, penny, dime, quarter  
D. dime, quarter, nickel, penny

5. \_\_\_\_\_

6. \_\_\_\_\_

4)



- A. penny, dime, nickel, quarter  
B. quarter, dime, nickel, penny  
C. dime, nickel, quarter, penny  
D. dime, penny, quarter, nickel

7. \_\_\_\_\_

8. \_\_\_\_\_

5)



- A. penny, dime, quarter, nickel  
B. nickel, dime, penny, quarter  
C. penny, nickel, dime, quarter  
D. nickel, quarter, dime, penny

6)



- A. quarter, nickel, dime, penny  
B. dime, quarter, penny, nickel  
C. dime, nickel, penny, quarter  
D. penny, nickel, quarter, dime

7)



- A. nickel, dime, penny, quarter  
B. nickel, quarter, penny, dime  
C. nickel, penny, quarter, dime  
D. penny, dime, quarter, nickel

8)



- A. penny, dime, nickel, quarter  
B. quarter, penny, nickel, dime  
C. penny, quarter, dime, nickel  
D. penny, nickel, quarter, dime





Determine which choice best describes the coins in the order shown.

1)



- A. dime, nickel, penny, quarter  
B. penny, quarter, nickel, dime  
C. dime, penny, quarter, nickel  
D. quarter, nickel, penny, dime

2)



- A. quarter, dime, penny, nickel  
B. nickel, dime, penny, quarter  
C. penny, nickel, quarter, dime  
D. nickel, quarter, dime, penny

3)



- A. penny, quarter, dime, nickel  
B. dime, nickel, penny, quarter  
C. nickel, penny, dime, quarter  
D. dime, quarter, nickel, penny

4)



- A. penny, dime, nickel, quarter  
B. quarter, dime, nickel, penny  
C. dime, nickel, quarter, penny  
D. dime, penny, quarter, nickel

5)



- A. penny, dime, quarter, nickel  
B. nickel, dime, penny, quarter  
C. penny, nickel, dime, quarter  
D. nickel, quarter, dime, penny

6)



- A. quarter, nickel, dime, penny  
B. dime, quarter, penny, nickel  
C. dime, nickel, penny, quarter  
D. penny, nickel, quarter, dime

7)



- A. nickel, dime, penny, quarter  
B. nickel, quarter, penny, dime  
C. nickel, penny, quarter, dime  
D. penny, dime, quarter, nickel

8)



- A. penny, dime, nickel, quarter  
B. quarter, penny, nickel, dime  
C. penny, quarter, dime, nickel  
D. penny, nickel, quarter, dime

**Answers**1. **B**2. **A**3. **C**4. **D**5. **D**6. **C**7. **B**8. **A**

**Determine which choice best describes the coins in the order shown.****Answers**

1)



- A. dime, nickel, quarter, penny  
B. nickel, quarter, penny, dime  
C. quarter, nickel, penny, dime  
D. penny, nickel, dime, quarter

1. \_\_\_\_\_

2)



- A. nickel, quarter, dime, penny  
B. dime, nickel, penny, quarter  
C. penny, nickel, quarter, dime  
D. penny, quarter, dime, nickel

2. \_\_\_\_\_

3)



- A. dime, nickel, penny, quarter  
B. quarter, penny, dime, nickel  
C. quarter, nickel, penny, dime  
D. dime, penny, quarter, nickel

3. \_\_\_\_\_

4)



- A. dime, nickel, quarter, penny  
B. dime, penny, quarter, nickel  
C. penny, dime, quarter, nickel  
D. penny, quarter, nickel, dime

4. \_\_\_\_\_

5)



- A. penny, quarter, dime, nickel  
B. penny, nickel, quarter, dime  
C. dime, quarter, penny, nickel  
D. quarter, penny, nickel, dime

5. \_\_\_\_\_

6)



- A. nickel, penny, quarter, dime  
B. penny, quarter, dime, nickel  
C. dime, nickel, quarter, penny  
D. nickel, dime, penny, quarter

6. \_\_\_\_\_

7)



- A. dime, penny, quarter, nickel  
B. quarter, penny, nickel, dime  
C. nickel, dime, penny, quarter  
D. penny, nickel, quarter, dime

7. \_\_\_\_\_

8)



- A. nickel, quarter, dime, penny  
B. penny, dime, nickel, quarter  
C. dime, penny, quarter, nickel  
D. quarter, dime, nickel, penny

8. \_\_\_\_\_



Determine which choice best describes the coins in the order shown.

1)



- A. dime, nickel, quarter, penny  
B. nickel, quarter, penny, dime  
C. quarter, nickel, penny, dime  
D. penny, nickel, dime, quarter

2)



- A. nickel, quarter, dime, penny  
B. dime, nickel, penny, quarter  
C. penny, nickel, quarter, dime  
D. penny, quarter, dime, nickel

3)



- A. dime, nickel, penny, quarter  
B. quarter, penny, dime, nickel  
C. quarter, nickel, penny, dime  
D. dime, penny, quarter, nickel

4)



- A. dime, nickel, quarter, penny  
B. dime, penny, quarter, nickel  
C. penny, dime, quarter, nickel  
D. penny, quarter, nickel, dime

5)



- A. penny, quarter, dime, nickel  
B. penny, nickel, quarter, dime  
C. dime, quarter, penny, nickel  
D. quarter, penny, nickel, dime

6)



- A. nickel, penny, quarter, dime  
B. penny, quarter, dime, nickel  
C. dime, nickel, quarter, penny  
D. nickel, dime, penny, quarter

7)



- A. dime, penny, quarter, nickel  
B. quarter, penny, nickel, dime  
C. nickel, dime, penny, quarter  
D. penny, nickel, quarter, dime

8)



- A. nickel, quarter, dime, penny  
B. penny, dime, nickel, quarter  
C. dime, penny, quarter, nickel  
D. quarter, dime, nickel, penny

**Answers**1. **C**2. **B**3. **D**4. **B**5. **A**6. **D**7. **C**8. **A**



**Determine which choice best describes the coins in the order shown.****Answers**

1)



- A. penny, dime, quarter, nickel  
B. dime, nickel, quarter, penny  
C. dime, quarter, nickel, penny  
D. penny, quarter, nickel, dime

1. \_\_\_\_\_

2)



- A. penny, nickel, quarter, dime  
B. nickel, dime, penny, quarter  
C. quarter, penny, nickel, dime  
D. penny, nickel, dime, quarter

2. \_\_\_\_\_

3)



- A. penny, nickel, dime, quarter  
B. dime, nickel, quarter, penny  
C. quarter, penny, dime, nickel  
D. quarter, penny, nickel, dime

3. \_\_\_\_\_

4)



- A. nickel, quarter, dime, penny  
B. nickel, penny, quarter, dime  
C. dime, penny, nickel, quarter  
D. quarter, nickel, dime, penny

4. \_\_\_\_\_

5)



- A. quarter, penny, nickel, dime  
B. nickel, penny, dime, quarter  
C. dime, quarter, penny, nickel  
D. penny, quarter, dime, nickel

5. \_\_\_\_\_

6)



- A. quarter, dime, nickel, penny  
B. nickel, penny, quarter, dime  
C. nickel, dime, quarter, penny  
D. dime, nickel, quarter, penny

6. \_\_\_\_\_

7)



- A. nickel, quarter, penny, dime  
B. dime, quarter, penny, nickel  
C. nickel, dime, quarter, penny  
D. dime, nickel, quarter, penny

7. \_\_\_\_\_

8)



- A. quarter, dime, nickel, penny  
B. nickel, quarter, dime, penny  
C. nickel, quarter, penny, dime  
D. quarter, nickel, dime, penny

8. \_\_\_\_\_



Determine which choice best describes the coins in the order shown.

1)



- A. penny, dime, quarter, nickel  
B. dime, nickel, quarter, penny  
C. dime, quarter, nickel, penny  
D. penny, quarter, nickel, dime

2)



- A. penny, nickel, quarter, dime  
B. nickel, dime, penny, quarter  
C. quarter, penny, nickel, dime  
D. penny, nickel, dime, quarter

3)



- A. penny, nickel, dime, quarter  
B. dime, nickel, quarter, penny  
C. quarter, penny, dime, nickel  
D. quarter, penny, nickel, dime

4)



- A. nickel, quarter, dime, penny  
B. nickel, penny, quarter, dime  
C. dime, penny, nickel, quarter  
D. quarter, nickel, dime, penny

5)



- A. quarter, penny, nickel, dime  
B. nickel, penny, dime, quarter  
C. dime, quarter, penny, nickel  
D. penny, quarter, dime, nickel

6)



- A. quarter, dime, nickel, penny  
B. nickel, penny, quarter, dime  
C. nickel, dime, quarter, penny  
D. dime, nickel, quarter, penny

7)



- A. nickel, quarter, penny, dime  
B. dime, quarter, penny, nickel  
C. nickel, dime, quarter, penny  
D. dime, nickel, quarter, penny

8)



- A. quarter, dime, nickel, penny  
B. nickel, quarter, dime, penny  
C. nickel, quarter, penny, dime  
D. quarter, nickel, dime, penny

**Answers**1. **C**2. **C**3. **A**4. **B**5. **B**6. **C**7. **C**8. **A**

**Determine which choice best describes the coins in the order shown.****Answers**

1)



- A. nickel, penny, quarter, dime  
B. quarter, dime, nickel, penny  
C. penny, quarter, dime, nickel  
D. penny, nickel, dime, quarter

1. \_\_\_\_\_

2)



- A. nickel, quarter, penny, dime  
B. dime, quarter, nickel, penny  
C. quarter, penny, dime, nickel  
D. penny, dime, quarter, nickel

2. \_\_\_\_\_

3)



- A. quarter, nickel, penny, dime  
B. penny, nickel, quarter, dime  
C. quarter, dime, penny, nickel  
D. quarter, penny, nickel, dime

3. \_\_\_\_\_

4)



- A. penny, nickel, quarter, dime  
B. dime, nickel, penny, quarter  
C. nickel, penny, dime, quarter  
D. penny, quarter, dime, nickel

4. \_\_\_\_\_

5)



- A. dime, nickel, penny, quarter  
B. penny, nickel, dime, quarter  
C. nickel, dime, penny, quarter  
D. quarter, penny, dime, nickel

5. \_\_\_\_\_

6)



- A. penny, quarter, nickel, dime  
B. nickel, quarter, dime, penny  
C. penny, dime, quarter, nickel  
D. penny, quarter, dime, nickel

6. \_\_\_\_\_

7)



- A. quarter, nickel, dime, penny  
B. dime, quarter, nickel, penny  
C. penny, dime, quarter, nickel  
D. quarter, penny, dime, nickel

7. \_\_\_\_\_

8)



- A. penny, quarter, dime, nickel  
B. penny, nickel, dime, quarter  
C. dime, nickel, quarter, penny  
D. dime, quarter, penny, nickel

8. \_\_\_\_\_



Determine which choice best describes the coins in the order shown.

1)



- A. nickel, penny, quarter, dime  
B. quarter, dime, nickel, penny  
C. penny, quarter, dime, nickel  
D. penny, nickel, dime, quarter

2)



- A. nickel, quarter, penny, dime  
B. dime, quarter, nickel, penny  
C. quarter, penny, dime, nickel  
D. penny, dime, quarter, nickel

3)



- A. quarter, nickel, penny, dime  
B. penny, nickel, quarter, dime  
C. quarter, dime, penny, nickel  
D. quarter, penny, nickel, dime

4)



- A. penny, nickel, quarter, dime  
B. dime, nickel, penny, quarter  
C. nickel, penny, dime, quarter  
D. penny, quarter, dime, nickel

5)



- A. dime, nickel, penny, quarter  
B. penny, nickel, dime, quarter  
C. nickel, dime, penny, quarter  
D. quarter, penny, dime, nickel

6)



- A. penny, quarter, nickel, dime  
B. nickel, quarter, dime, penny  
C. penny, dime, quarter, nickel  
D. penny, quarter, dime, nickel

7)



- A. quarter, nickel, dime, penny  
B. dime, quarter, nickel, penny  
C. penny, dime, quarter, nickel  
D. quarter, penny, dime, nickel

8)



- A. penny, quarter, dime, nickel  
B. penny, nickel, dime, quarter  
C. dime, nickel, quarter, penny  
D. dime, quarter, penny, nickel

**Answers**

1. **D**  
2. **B**  
3. **B**  
4. **A**  
5. **A**  
6. **C**  
7. **B**  
8. **D**

**Determine which choice best describes the coins in the order shown.****Answers**

1)



- A. quarter, nickel, penny, dime  
B. nickel, quarter, penny, dime  
C. quarter, penny, dime, nickel  
D. dime, quarter, penny, nickel

1. \_\_\_\_\_

2)



- A. nickel, dime, penny, quarter  
B. nickel, quarter, dime, penny  
C. penny, quarter, dime, nickel  
D. quarter, dime, nickel, penny

2. \_\_\_\_\_

3)



- A. dime, nickel, quarter, penny  
B. penny, dime, quarter, nickel  
C. penny, dime, nickel, quarter  
D. nickel, dime, penny, quarter

3. \_\_\_\_\_

4)



- A. quarter, dime, penny, nickel  
B. nickel, dime, quarter, penny  
C. dime, quarter, nickel, penny  
D. nickel, quarter, dime, penny

4. \_\_\_\_\_


5)



- A. nickel, dime, penny, quarter  
B. penny, nickel, quarter, dime  
C. dime, quarter, nickel, penny  
D. penny, quarter, nickel, dime

5. \_\_\_\_\_

6)



- A. dime, penny, quarter, nickel  
B. quarter, dime, penny, nickel  
C. nickel, quarter, dime, penny  
D. penny, nickel, quarter, dime

6. \_\_\_\_\_

7)



- A. quarter, penny, dime, nickel  
B. nickel, quarter, penny, dime  
C. dime, quarter, nickel, penny  
D. dime, nickel, penny, quarter

7. \_\_\_\_\_

8)



- A. dime, nickel, penny, quarter  
B. nickel, penny, dime, quarter  
C. quarter, dime, nickel, penny  
D. dime, nickel, quarter, penny

8. \_\_\_\_\_





Determine which choice best describes the coins in the order shown.

1)



- A. quarter, nickel, penny, dime  
B. nickel, quarter, penny, dime  
C. quarter, penny, dime, nickel  
D. dime, quarter, penny, nickel

2)



- A. nickel, dime, penny, quarter  
B. nickel, quarter, dime, penny  
C. penny, quarter, dime, nickel  
D. quarter, dime, nickel, penny

3)



- A. dime, nickel, quarter, penny  
B. penny, dime, quarter, nickel  
C. penny, dime, nickel, quarter  
D. nickel, dime, penny, quarter

4)




- A. quarter, dime, penny, nickel  
B. nickel, dime, quarter, penny  
C. dime, quarter, nickel, penny  
D. nickel, quarter, dime, penny

5)



- A. nickel, dime, penny, quarter  
B. penny, nickel, quarter, dime  
C. dime, quarter, nickel, penny  
D. penny, quarter, nickel, dime

6)



- A. dime, penny, quarter, nickel  
B. quarter, dime, penny, nickel  
C. nickel, quarter, dime, penny  
D. penny, nickel, quarter, dime

7)



- A. quarter, penny, dime, nickel  
B. nickel, quarter, penny, dime  
C. dime, quarter, nickel, penny  
D. dime, nickel, penny, quarter

8)



- A. dime, nickel, penny, quarter  
B. nickel, penny, dime, quarter  
C. quarter, dime, nickel, penny  
D. dime, nickel, quarter, penny

**Answers**

1. **C**  
2. **A**  
3. **A**  
4. **B**  
5. **B**  
6. **B**  
7. **D**  
8. **B**



Determine which choice best describes the coins in the order shown.

Answers

1)



- A. quarter, penny, nickel, dime  
B. dime, quarter, nickel, penny  
C. nickel, penny, dime, quarter  
D. quarter, nickel, penny, dime

1. \_\_\_\_\_

2)



- A. quarter, dime, nickel, penny  
B. quarter, nickel, dime, penny  
C. dime, quarter, penny, nickel  
D. penny, quarter, nickel, dime

2. \_\_\_\_\_

3)



- A. nickel, quarter, penny, dime  
B. nickel, penny, dime, quarter  
C. penny, dime, nickel, quarter  
D. dime, penny, nickel, quarter

3. \_\_\_\_\_

4)



- A. dime, quarter, penny, nickel  
B. nickel, dime, quarter, penny  
C. penny, nickel, quarter, dime  
D. penny, dime, quarter, nickel

4. \_\_\_\_\_

5)



- A. penny, dime, quarter, nickel  
B. dime, quarter, nickel, penny  
C. dime, penny, nickel, quarter  
D. quarter, penny, dime, nickel

5. \_\_\_\_\_

6)



- A. penny, quarter, dime, nickel  
B. quarter, nickel, penny, dime  
C. nickel, quarter, dime, penny  
D. quarter, penny, dime, nickel

6. \_\_\_\_\_

7)



- A. nickel, penny, quarter, dime  
B. quarter, nickel, penny, dime  
C. quarter, dime, penny, nickel  
D. dime, penny, nickel, quarter

7. \_\_\_\_\_

8)



- A. nickel, penny, quarter, dime  
B. quarter, dime, nickel, penny  
C. nickel, dime, penny, quarter  
D. penny, dime, nickel, quarter

8. \_\_\_\_\_



Determine which choice best describes the coins in the order shown.

Answers

1)



- A. quarter, penny, nickel, dime  
B. dime, quarter, nickel, penny  
C. nickel, penny, dime, quarter  
D. quarter, nickel, penny, dime

1. **B**

2)



- A. quarter, dime, nickel, penny  
B. quarter, nickel, dime, penny  
C. dime, quarter, penny, nickel  
D. penny, quarter, nickel, dime

2. **C**

3)



- A. nickel, quarter, penny, dime  
B. nickel, penny, dime, quarter  
C. penny, dime, nickel, quarter  
D. dime, penny, nickel, quarter

3. **D**

4)



- A. dime, quarter, penny, nickel  
B. nickel, dime, quarter, penny  
C. penny, nickel, quarter, dime  
D. penny, dime, quarter, nickel

4. **A**

5)



- A. penny, dime, quarter, nickel  
B. dime, quarter, nickel, penny  
C. dime, penny, nickel, quarter  
D. quarter, penny, dime, nickel

5. **B**


6)



- A. penny, quarter, dime, nickel  
B. quarter, nickel, penny, dime  
C. nickel, quarter, dime, penny  
D. quarter, penny, dime, nickel

6. **C**

7)



- A. nickel, penny, quarter, dime  
B. quarter, nickel, penny, dime  
C. quarter, dime, penny, nickel  
D. dime, penny, nickel, quarter

7. **D**

8)



- A. nickel, penny, quarter, dime  
B. quarter, dime, nickel, penny  
C. nickel, dime, penny, quarter  
D. penny, dime, nickel, quarter

8. **C**

**Determine which choice best describes the coins in the order shown.****Answers**

1)



- A. nickel, penny, quarter, dime  
B. penny, dime, nickel, quarter  
C. nickel, quarter, penny, dime  
D. penny, quarter, dime, nickel

1. \_\_\_\_\_

2. \_\_\_\_\_

2)



- A. nickel, dime, quarter, penny  
B. penny, quarter, nickel, dime  
C. nickel, penny, dime, quarter  
D. nickel, quarter, dime, penny

3. \_\_\_\_\_

4. \_\_\_\_\_

3)



- A. nickel, penny, quarter, dime  
B. quarter, dime, penny, nickel  
C. dime, quarter, penny, nickel  
D. penny, nickel, quarter, dime

5. \_\_\_\_\_

6. \_\_\_\_\_

4)



- A. quarter, nickel, dime, penny  
B. quarter, nickel, penny, dime  
C. quarter, penny, nickel, dime  
D. dime, nickel, quarter, penny

8. \_\_\_\_\_

5)



- A. penny, dime, nickel, quarter  
B. nickel, dime, quarter, penny  
C. nickel, dime, penny, quarter  
D. quarter, nickel, dime, penny

6)



- A. quarter, penny, nickel, dime  
B. nickel, penny, quarter, dime  
C. dime, penny, quarter, nickel  
D. penny, quarter, dime, nickel

7)



- A. quarter, nickel, dime, penny  
B. nickel, quarter, dime, penny  
C. nickel, dime, penny, quarter  
D. dime, quarter, nickel, penny

8)



- A. nickel, penny, quarter, dime  
B. nickel, penny, dime, quarter  
C. quarter, dime, penny, nickel  
D. penny, quarter, nickel, dime



Determine which choice best describes the coins in the order shown.

1)



- A. nickel, penny, quarter, dime  
B. penny, dime, nickel, quarter  
C. nickel, quarter, penny, dime  
D. penny, quarter, dime, nickel

2)



- A. nickel, dime, quarter, penny  
B. penny, quarter, nickel, dime  
C. nickel, penny, dime, quarter  
D. nickel, quarter, dime, penny

3)



- A. nickel, penny, quarter, dime  
B. quarter, dime, penny, nickel  
C. dime, quarter, penny, nickel  
D. penny, nickel, quarter, dime

4)



- A. quarter, nickel, dime, penny  
B. quarter, nickel, penny, dime  
C. quarter, penny, nickel, dime  
D. dime, nickel, quarter, penny

5)



- A. penny, dime, nickel, quarter  
B. nickel, dime, quarter, penny  
C. nickel, dime, penny, quarter  
D. quarter, nickel, dime, penny

6)



- A. quarter, penny, nickel, dime  
B. nickel, penny, quarter, dime  
C. dime, penny, quarter, nickel  
D. penny, quarter, dime, nickel

7)



- A. quarter, nickel, dime, penny  
B. nickel, quarter, dime, penny  
C. nickel, dime, penny, quarter  
D. dime, quarter, nickel, penny

8)



- A. nickel, penny, quarter, dime  
B. nickel, penny, dime, quarter  
C. quarter, dime, penny, nickel  
D. penny, quarter, nickel, dime

**Answers**

1. **A**  
2. **C**  
3. **C**  
4. **A**  
5. **A**  
6. **A**  
7. **A**  
8. **D**



**Determine which choice best describes the coins in the order shown.****Answers**

1)



- A. penny, dime, nickel, quarter  
B. quarter, nickel, penny, dime  
C. penny, quarter, nickel, dime  
D. nickel, penny, dime, quarter

1. \_\_\_\_\_

2)



- A. nickel, penny, quarter, dime  
B. penny, quarter, nickel, dime  
C. penny, nickel, quarter, dime  
D. dime, penny, quarter, nickel

2. \_\_\_\_\_

3)



- A. dime, quarter, penny, nickel  
B. nickel, penny, dime, quarter  
C. penny, dime, quarter, nickel  
D. quarter, dime, nickel, penny

3. \_\_\_\_\_


4)



- A. dime, nickel, quarter, penny  
B. dime, quarter, penny, nickel  
C. dime, quarter, nickel, penny  
D. nickel, penny, dime, quarter

4. \_\_\_\_\_

5)



- A. quarter, dime, penny, nickel  
B. quarter, dime, nickel, penny  
C. nickel, dime, quarter, penny  
D. penny, nickel, dime, quarter

5. \_\_\_\_\_

6)



- A. nickel, quarter, dime, penny  
B. dime, penny, quarter, nickel  
C. dime, quarter, nickel, penny  
D. dime, nickel, penny, quarter

6. \_\_\_\_\_

7)



- A. quarter, nickel, dime, penny  
B. quarter, nickel, penny, dime  
C. nickel, dime, quarter, penny  
D. dime, quarter, nickel, penny

7. \_\_\_\_\_

8)



- A. quarter, dime, penny, nickel  
B. nickel, quarter, dime, penny  
C. penny, dime, nickel, quarter  
D. nickel, penny, dime, quarter

8. \_\_\_\_\_



Determine which choice best describes the coins in the order shown.

1)



- A. penny, dime, nickel, quarter  
B. quarter, nickel, penny, dime  
C. penny, quarter, nickel, dime  
D. nickel, penny, dime, quarter

2)



- A. nickel, penny, quarter, dime  
B. penny, quarter, nickel, dime  
C. penny, nickel, quarter, dime  
D. dime, penny, quarter, nickel

3)




- A. dime, quarter, penny, nickel  
B. nickel, penny, dime, quarter  
C. penny, dime, quarter, nickel  
D. quarter, dime, nickel, penny

4)



- A. dime, nickel, quarter, penny  
B. dime, quarter, penny, nickel  
C. dime, quarter, nickel, penny  
D. nickel, penny, dime, quarter

5)



- A. quarter, dime, penny, nickel  
B. quarter, dime, nickel, penny  
C. nickel, dime, quarter, penny  
D. penny, nickel, dime, quarter

6)



- A. nickel, quarter, dime, penny  
B. dime, penny, quarter, nickel  
C. dime, quarter, nickel, penny  
D. dime, nickel, penny, quarter

7)



- A. quarter, nickel, dime, penny  
B. quarter, nickel, penny, dime  
C. nickel, dime, quarter, penny  
D. dime, quarter, nickel, penny

8)



- A. quarter, dime, penny, nickel  
B. nickel, quarter, dime, penny  
C. penny, dime, nickel, quarter  
D. nickel, penny, dime, quarter

**Answers**

1. **D**  
2. **A**  
3. **C**  
4. **B**  
5. **A**  
6. **D**  
7. **A**  
8. **B**