




Count the number of quarters (25¢), dimes(10¢), nickels(5¢) and pennies(1¢).


Answers

Ex) 

1) 


2) 

3) 

4) 

5) 

6) 

7) 

8) 

9) 

10) 

Ex. 3 2 1 3

1. _____

2. _____

3. _____

4. _____

5. _____

6. _____

7. _____

8. _____

9. _____

10. _____



Count the number of quarters (25¢), dimes(10¢), nickels(5¢) and pennies(1¢).

Ex)

1)

2)

3)

4)

5)

6)

7)

8)

9)

10)

Answers

Ex.	<u>3</u>	<u>2</u>	<u>1</u>	<u>3</u>
1.	<u>2</u>	<u>3</u>	<u>3</u>	<u>1</u>
2.	<u>1</u>	<u>3</u>	<u>3</u>	<u>2</u>
3.	<u>2</u>	<u>2</u>	<u>2</u>	<u>3</u>
4.	<u>3</u>	<u>2</u>	<u>2</u>	<u>2</u>
5.	<u>2</u>	<u>4</u>	<u>1</u>	<u>2</u>
6.	<u>2</u>	<u>2</u>	<u>3</u>	<u>2</u>
7.	<u>2</u>	<u>2</u>	<u>3</u>	<u>2</u>
8.	<u>2</u>	<u>1</u>	<u>3</u>	<u>3</u>
9.	<u>2</u>	<u>4</u>	<u>1</u>	<u>2</u>
10.	<u>1</u>	<u>3</u>	<u>1</u>	<u>4</u>