




Determine the amount of money shown.

Answers



1. _____




2. _____



3. _____

4. _____



5. _____

6. _____



7. _____

8. _____






9. _____

10. _____





Determine the amount of money shown.



Answers

1. \$0.81

2. \$0.95

3. \$0.98

4. \$0.99

5. \$0.96

6. \$0.92

7. \$0.98

8. \$0.99

9. \$0.98

10. \$0.68