






Use the units provided to measure the width of each of the bars.



Answers

1. _____

2. _____

3. _____

4. _____

5. _____

6. _____

7. _____






8. _____

9. _____

10. _____



Use the units provided to measure the width of each of the bars.



Answers

1. 10

2. 1

3. 4

4. 3

5. 6

6. 8

7. 9

8. 11

9. 5

10. 13