



Determine which letter best represents the length / height.

Answers

Millimeter (mm)

Centimeter (cm)

Meter (m)

Kilometer (km)

A millimeter is about the thickness of a credit card.

10 mm = 1 cm.
The metal portion of a pencil is about 1 cm. A ruler is about 30 centimeters.

100 cm = 1 m
From the floor to a door knob is about 1 meter.

1,000 m = 1 km
Most major roads are at least a kilometer long.



1. _____
2. _____
3. _____
4. _____
5. _____
6. _____
7. _____
8. _____
9. _____




Bicycle

- A. 10 centimeters
- B. 25 centimeters
- C. 1 meter
- D. 3 meters



Vacuum

- A. 30 centimeters
- B. 120 centimeters
- C. 3 meters
- D. 35 centimeters




Toothbrush

- A. 3 meters
- B. 10 centimeters
- C. 17 centimeters
- D. 1 meter



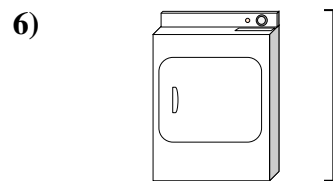
Cereal Box Height

- A. 10 centimeters
- B. 60 centimeters
- C. 3 centimeters
- D. 30 centimeters



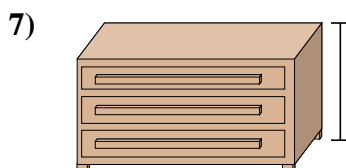
Elephant

- A. 2 kilometers
- B. 150 millimeters
- C. 45 centimeters
- D. 4 meters



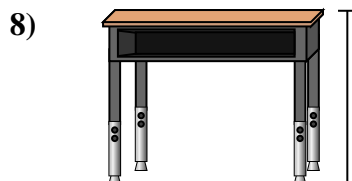
Clothes Dryer

- A. 15 centimeters
- B. 60 centimeters
- C. 25 centimeters
- D. 1 meter



Dresser

- A. 30 centimeters
- B. 3 meters
- C. 90 centimeters
- D. 45 centimeters



Desk

- A. 15 centimeters
- B. 30 centimeters
- C. 70 centimeters
- D. 2 meters



Bug

- A. 30 centimeters
- B. 10 centimeters
- C. 5 centimeters
- D. 7 millimeters



Determine which letter best represents the length / height.

Millimeter (mm)

A millimeter is about the thickness of a credit card.



Centimeter (cm)

10 mm = 1 cm.

The metal portion of a pencil is about 1 cm. A ruler is about 30 centimeters.



Meter (m)

100 cm = 1 m

From the floor to a door knob is about 1 meter.



Kilometer (km)

1,000 m = 1 km

Most major roads are at least a kilometer long.



Answers

1. **C**

2. **B**

3. **C**

4. **D**

5. **D**

6. **D**

7. **C**

8. **C**

9. **D**

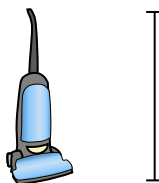
1)



Bicycle

- A. 10 centimeters
- B. 25 centimeters
- C. 1 meter
- D. 3 meters

2)



Vacuum

- A. 30 centimeters
- B. 120 centimeters
- C. 3 meters
- D. 35 centimeters


3)



Toothbrush

- A. 3 meters
- B. 10 centimeters
- C. 17 centimeters
- D. 1 meter


4)



Cereal Box Height

- A. 10 centimeters
- B. 60 centimeters
- C. 3 centimeters
- D. 30 centimeters


5)



Elephant

- A. 2 kilometers
- B. 150 millimeters
- C. 45 centimeters
- D. 4 meters

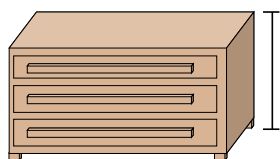
6)



Clothes Dryer

- A. 15 centimeters
- B. 60 centimeters
- C. 25 centimeters
- D. 1 meter

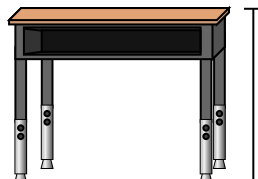
7)



Dresser

- A. 30 centimeters
- B. 3 meters
- C. 90 centimeters
- D. 45 centimeters

8)



Desk

- A. 15 centimeters
- B. 30 centimeters
- C. 70 centimeters
- D. 2 meters

9)



Bug

- A. 30 centimeters
- B. 10 centimeters
- C. 5 centimeters
- D. 7 millimeters