




Measure the width of each block in inches and in centimeters.



**Answers**

Ex. 2 1/2 6 - 7

1. \_\_\_\_\_

2. \_\_\_\_\_

3. \_\_\_\_\_

4. \_\_\_\_\_

5. \_\_\_\_\_

6. \_\_\_\_\_

7. \_\_\_\_\_

8. \_\_\_\_\_

9. \_\_\_\_\_



Measure the width of each block in inches and in centimeters.

Ex)



**Answers**

Ex. 2 1/2 6 - 7


1)



1. 4 1/2 11 - 12

2. 3 7 - 8

2)



3. 5 12 - 13

4. 2 5 - 6

3)



5. 3 1/2 8 - 9

6. 5 1/2 13 - 14

4)



7. 0 1/2 1 - 2

8. 1 2 - 3

5)




9. 4 10 - 11

6)



7)



8)




9)





Measure the width of each block in inches and in centimeters.

Ex)



**Answers**

Ex. 1 2-3

1)



1. \_\_\_\_\_

2. \_\_\_\_\_

2)



3. \_\_\_\_\_

4. \_\_\_\_\_


3)



5. \_\_\_\_\_

6. \_\_\_\_\_

4)



7. \_\_\_\_\_

8. \_\_\_\_\_

5)



9. \_\_\_\_\_

6)



7)



8)




9)





Measure the width of each block in inches and in centimeters.



**Answers**

Ex. 1    2 - 3

1. 1 1/2    3 - 4

2. 5    12 - 13

3. 5 1/2    13 - 14

4. 0 1/2    1 - 2

5. 3    7 - 8

6. 2    5 - 6

7. 4    10 - 11

8. 4 1/2    11 - 12

9. 3 1/2    8 - 9



Measure the width of each block in inches and in centimeters.

Ex)



Ex. 4 1/2 11 - 12

1)



1. \_\_\_\_\_

2. \_\_\_\_\_

2)



3. \_\_\_\_\_

4. \_\_\_\_\_


3)



5. \_\_\_\_\_

6. \_\_\_\_\_

4)



7. \_\_\_\_\_

8. \_\_\_\_\_

5)



9. \_\_\_\_\_


6)



7)



8)



9)



**Answers**

Ex. 4 1/2 11 - 12

1. \_\_\_\_\_

2. \_\_\_\_\_

3. \_\_\_\_\_

4. \_\_\_\_\_

5. \_\_\_\_\_

6. \_\_\_\_\_

7. \_\_\_\_\_

8. \_\_\_\_\_

9. \_\_\_\_\_



Measure the width of each block in inches and in centimeters.



**Answers**

Ex. 4 1/2 11 - 12

1. 5 1/2 13 - 14

2. 1 2 - 3

3. 1 1/2 3 - 4

4. 4 10 - 11

5. 2 5 - 6

6. 2 1/2 6 - 7

7. 3 7 - 8

8. 0 1/2 1 - 2

9. 5 12 - 13



Measure the width of each block in inches and in centimeters.



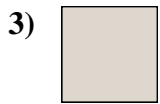
**Answers**  
Ex. 3 7-8



1. \_\_\_\_\_



2. \_\_\_\_\_



3. \_\_\_\_\_



4. \_\_\_\_\_



5. \_\_\_\_\_



6. \_\_\_\_\_



7. \_\_\_\_\_



8. \_\_\_\_\_



9. \_\_\_\_\_



Measure the width of each block in inches and in centimeters.



**Answers**

Ex. 3   7 - 8



1. 5   12 - 13



2. 1 1/2   3 - 4



3. 0 1/2   1 - 2



4. 4 1/2   11 - 12



5. 3 1/2   8 - 9



6. 2 1/2   6 - 7



7. 5 1/2   13 - 14



8. 2   5 - 6

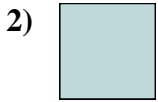


9. 4   10 - 11





Measure the width of each block in inches and in centimeters.



Answers

Ex. 3 7-8

1. \_\_\_\_\_

2. \_\_\_\_\_

3. \_\_\_\_\_

4. \_\_\_\_\_

5. \_\_\_\_\_

6. \_\_\_\_\_

7. \_\_\_\_\_

8. \_\_\_\_\_

9. \_\_\_\_\_



Measure the width of each block in inches and in centimeters.



**Answers**

Ex. 3    7 - 8

1. 1 1/2    3 - 4

2. 0 1/2    1 - 2

3. 5 1/2    13 - 14

4. 1    2 - 3

5. 4 1/2    11 - 12

6. 4    10 - 11

7. 5    12 - 13

8. 2    5 - 6

9. 2 1/2    6 - 7



Measure the width of each block in inches and in centimeters.

Ex)



1)



2)



3)




4)



5)



6)



7)



8)



9)



Answers

Ex. 5 1/2 13 - 14

1. \_\_\_\_\_

2. \_\_\_\_\_

3. \_\_\_\_\_

4. \_\_\_\_\_

5. \_\_\_\_\_

6. \_\_\_\_\_

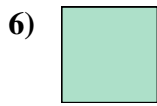
7. \_\_\_\_\_

8. \_\_\_\_\_

9. \_\_\_\_\_



Measure the width of each block in inches and in centimeters.



**Answers**

Ex. 5 1/2 13 - 14

1. 3 1/2 8 - 9

2. 4 10 - 11

3. 5 12 - 13

4. 1 2 - 3

5. 3 7 - 8

6. 0 1/2 1 - 2

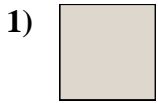
7. 1 1/2 3 - 4

8. 2 5 - 6

9. 4 1/2 11 - 12



Measure the width of each block in inches and in centimeters.



Answers

Ex. 4 10 - 11

1. \_\_\_\_\_

2. \_\_\_\_\_

3. \_\_\_\_\_

4. \_\_\_\_\_

5. \_\_\_\_\_

6. \_\_\_\_\_

7. \_\_\_\_\_

8. \_\_\_\_\_

9. \_\_\_\_\_



Measure the width of each block in inches and in centimeters.



**Answers**

Ex. 4    10 - 11

1. 0 1/2    1 - 2

2. 1 1/2    3 - 4

3. 5 1/2    13 - 14

4. 3    7 - 8

5. 2 1/2    6 - 7

6. 1    2 - 3

7. 2    5 - 6

8. 4 1/2    11 - 12

9. 3 1/2    8 - 9



Measure the width of each block in inches and in centimeters.



**Answers**

Ex. 3 1/2 8 - 9

1. \_\_\_\_\_

2. \_\_\_\_\_

3. \_\_\_\_\_

4. \_\_\_\_\_

5. \_\_\_\_\_

6. \_\_\_\_\_

7. \_\_\_\_\_

8. \_\_\_\_\_

9. \_\_\_\_\_



Measure the width of each block in inches and in centimeters.

Ex)



Answers

Ex. 3 1/2 8 - 9

1)



1. 1 2 - 3

2)



2. 1 1/2 3 - 4

3)



3. 5 1/2 13 - 14

4)



4. 5 12 - 13

5)



5. 2 5 - 6

6)



6. 3 7 - 8

7)




7. 4 1/2 11 - 12

8)



8. 2 1/2 6 - 7

9)



9. 0 1/2 1 - 2





Measure the width of each block in inches and in centimeters.

Ex)



**Answers**

Ex. 4 10 - 11

1)



1. \_\_\_\_\_

2)




2. \_\_\_\_\_

3)



3. \_\_\_\_\_

4)



4. \_\_\_\_\_

5)



5. \_\_\_\_\_

6)



6. \_\_\_\_\_

7)



7. \_\_\_\_\_

8)



8. \_\_\_\_\_

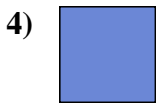
9)



9. \_\_\_\_\_



Measure the width of each block in inches and in centimeters.



Answers

Ex. 4    10 - 11

1. 2    5 - 6

2. 3    7 - 8

3. 3 1/2    8 - 9

4. 0 1/2    1 - 2

5. 1 1/2    3 - 4

6. 2 1/2    6 - 7


7. 5    12 - 13

8. 4 1/2    11 - 12

9. 5 1/2    13 - 14



Measure the width of each block in inches and in centimeters.



Answers

Ex. 1 2-3

1. \_\_\_\_\_

2. \_\_\_\_\_

3. \_\_\_\_\_

4. \_\_\_\_\_

5. \_\_\_\_\_

6. \_\_\_\_\_



7. \_\_\_\_\_

8. \_\_\_\_\_

9. \_\_\_\_\_



Measure the width of each block in inches and in centimeters.



Answers

Ex. 1    2 - 3

1. 3 1/2    8 - 9

2. 5 1/2    13 - 14

3. 5    12 - 13

4. 4 1/2    11 - 12

5. 1 1/2    3 - 4

6. 4    10 - 11

7. 2    5 - 6

8. 3    7 - 8

9. 0 1/2    1 - 2