



Measure the width and height of each block in inches and in centimeters.

Ex)



## Answers

Ex. 2 1/2 0 1/2 6.4 1.3


1. \_\_\_\_\_

2. \_\_\_\_\_


3. \_\_\_\_\_

4. \_\_\_\_\_

1)




2)



3)



4)





Measure the width and height of each block in inches and in centimeters.

Ex)



**Answers**

Ex. 2  $\frac{1}{2}$  0  $\frac{1}{2}$  6.4 1.3


1. 5 1 12.7 2.5

2. 3 0  $\frac{1}{2}$  7.6 1.3


3. 3  $\frac{1}{2}$  1  $\frac{1}{2}$  8.9 3.8

4. 4  $\frac{1}{2}$  1  $\frac{1}{2}$  11.4 3.8


1)



2)



3)



4)

