



Measure the width and height of each block in inches and in centimeters.

Ex)



**Answers**

Ex. 2 1/2 1 6.4 2.5


1. \_\_\_\_\_

2. \_\_\_\_\_


3. \_\_\_\_\_

4. \_\_\_\_\_


1)



2)



3)



4)





Measure the width and height of each block in inches and in centimeters.

Ex)



**Answers**

Ex.  $2\frac{1}{2}$  1 6.4 2.5

1.  $4\frac{1}{2}$  1\frac{1}{2} 11.4 3.8

2. 3 1 7.6 2.5

3. 5 1\frac{1}{2} 12.7 3.8

4. 2 0\frac{1}{2} 5.1 1.3


1)



2)



3)



4)

