




Measure the width and height of each block in inches and in centimeters.

Ex)




1)




2)



3)



4)



Answers

Ex. $4\frac{1}{2}$ **1** 11.4 2.5

1. _____



2. _____

3. _____

4. _____



Measure the width and height of each block in inches and in centimeters.



Answers

- Ex. $\frac{4\frac{1}{2}}{\text{in}}$ **1** $\frac{11.4}{\text{cm}}$ $\frac{2.5}{\text{in}}$
1. $\frac{0\frac{1}{2}}{\text{in}}$ $\frac{1\frac{1}{2}}{\text{in}}$ **1.3** **3.8**
2. **5** $\frac{0\frac{1}{2}}{\text{in}}$ $\frac{12.7}{\text{cm}}$ **1.3**
3. **1** $\frac{1\frac{1}{2}}{\text{in}}$ **2.5** **3.8**
4. **2** $\frac{1\frac{1}{2}}{\text{in}}$ **5.1** **3.8**