

**Determine which letter best represents the length / height.****Answers****Inch (in)**

A quarter is almost 1 inch (0.95").

**Foot (ft)**

12 inches = 1 foot
Most rulers are 1 foot.

**Yard (yd)**

3 feet = 1 yard
From the floor to a door knob is about 1 yard.

**Mile (mi)**

5,280 feet = 1 mile
Most major roads are at least a mile long.



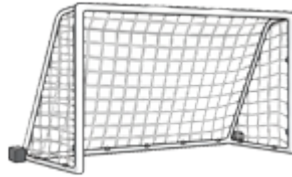
1)



height of a bedroom door

- A. 5 yards
- B. 1 mile
- C. 7 feet
- D. 24 inches

2)



width of a soccer goal

- A. 2 yards
- B. 24 feet
- C. 6 feet
- D. 2 miles


3)



height of a crayon

- A. 4 feet
- B. 1 inch
- C. 3 inches
- D. 3 yards

4)



height of a sheet of paper

- A. 4 feet
- B. 11 inches
- C. 3 yards
- D. 2 yards

5)



height of a classroom chair

- A. 6 feet
- B. 1 mile
- C. 2 miles
- D. 1 yard

6)



height of the statue of liberty

- A. 2 yards
- B. 76 feet
- C. 305 feet
- D. 36 inches

7)



length of the great wall of china

- A. 3250 miles
- B. 13000 miles
- C. 3 feet
- D. 24 inches

8)



thickness of a sheet of paper

- A. 2 yards
- B. 1 inch
- C. 1 foot
- D. less than 1 inch

9)



width of a trampoline

- A. 24 inches
- B. 1 mile
- C. 2 yards
- D. 12 feet

1. _____
2. _____
3. _____
4. _____
5. _____
6. _____
7. _____
8. _____
9. _____

**Determine which letter best represents the length / height.****Answers****Inch (in)**

A quarter is almost 1 inch (0.95").

**Foot (ft)**

12 inches = 1 foot
Most rulers are 1 foot.

**Yard (yd)**

3 feet = 1 yard
From the floor to a door knob is about 1 yard.

**Mile (mi)**

5,280 feet = 1 mile
Most major roads are at least a mile long.



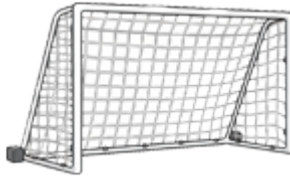
1)



height of a bedroom door

- A. 5 yards
- B. 1 mile
- C. 7 feet
- D. 24 inches

2)



width of a soccer goal

- A. 2 yards
- B. 24 feet
- C. 6 feet
- D. 2 miles


3)



height of a crayon

- A. 4 feet
- B. 1 inch
- C. 3 inches
- D. 3 yards

4)



height of a sheet of paper

- A. 4 feet
- B. 11 inches
- C. 3 yards
- D. 2 yards

5)



height of a classroom chair

- A. 6 feet
- B. 1 mile
- C. 2 miles
- D. 1 yard

6)



height of the statue of liberty

- A. 2 yards
- B. 76 feet
- C. 305 feet
- D. 36 inches

7)



length of the great wall of china

- A. 3250 miles
- B. 13000 miles
- C. 3 feet
- D. 24 inches

8)



thickness of a sheet of paper

- A. 2 yards
- B. 1 inch
- C. 1 foot
- D. less than 1 inch

9)



width of a trampoline

- A. 24 inches
- B. 1 mile
- C. 2 yards
- D. 12 feet

- 1. **C**
- 2. **B**
- 3. **C**
- 4. **B**
- 5. **D**
- 6. **C**
- 7. **B**
- 8. **D**
- 9. **D**