



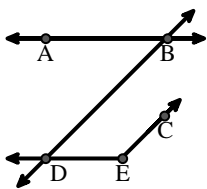
Match the description on the top with the visual image on the bottom.

Answers

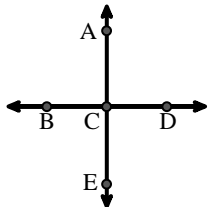
- 1) D as the midpoint of \overleftrightarrow{CE}
- 2) \overleftrightarrow{AE} intersecting \overleftrightarrow{DB}
- 3) \overleftrightarrow{AD} intersecting \overleftrightarrow{BC} at point E
- 4) Acute $\angle BDE$
- 5) $\angle BAC$ creating an obtuse angle
- 6) Right $\angle ADE$
- 7) \overleftrightarrow{BC} intersecting $\angle ACD$
- 8) \overleftrightarrow{AC} intersected by \overleftrightarrow{BD}
- 9) Acute $\angle ABC$ intersecting \overleftrightarrow{AD}
- 10) \overleftrightarrow{BD} intersecting $\angle ACE$
- 11) \overleftrightarrow{AB} parallel to \overleftrightarrow{CD}
- 12) $\angle DEC$ intersected by \overleftrightarrow{AC}

1. _____
2. _____
3. _____
4. _____
5. _____
6. _____
7. _____
8. _____
9. _____
10. _____
11. _____
12. _____

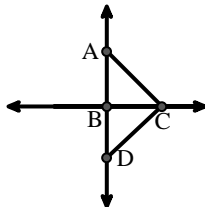
A.



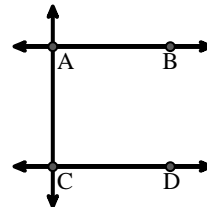
B.



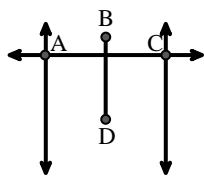
C.



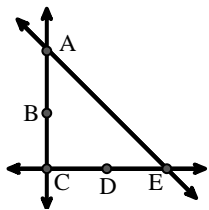
D.



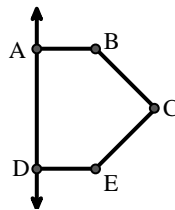
E.



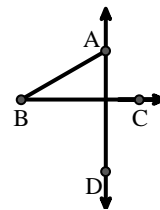
F.



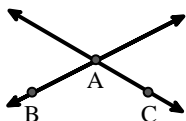
G.



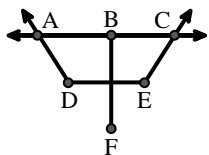
H.



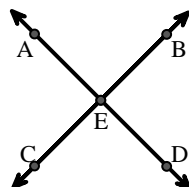
I.



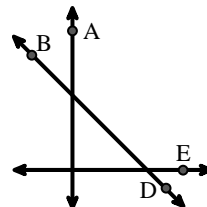
J.



K.



L.





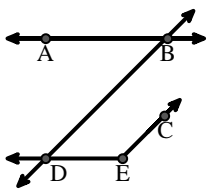
Match the description on the top with the visual image on the bottom.

Answers

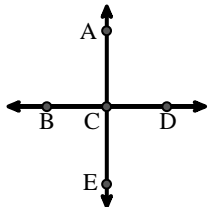
- 1) D as the midpoint of \overleftrightarrow{CE}
- 2) \overleftrightarrow{AE} intersecting \overleftrightarrow{DB}
- 3) \overleftrightarrow{AD} intersecting \overleftrightarrow{BC} at point E
- 4) Acute $\angle BDE$
- 5) $\angle BAC$ creating an obtuse angle
- 6) Right $\angle ADE$
- 7) \overleftrightarrow{BC} intersecting $\angle ACD$
- 8) \overleftrightarrow{AC} intersected by \overleftrightarrow{BD}
- 9) Acute $\angle ABC$ intersecting \overleftrightarrow{AD}
- 10) \overleftrightarrow{BD} intersecting $\angle ACE$
- 11) \overleftrightarrow{AB} parallel to \overleftrightarrow{CD}
- 12) $\angle DEC$ intersected by \overleftrightarrow{AC}

1. **F**
2. **B**
3. **K**
4. **A**
5. **I**
6. **G**
7. **C**
8. **E**
9. **H**
10. **L**
11. **D**
12. **J**

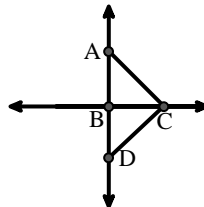
A.



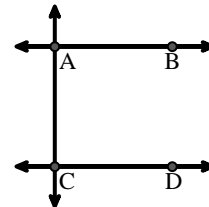
B.



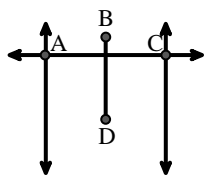
C.



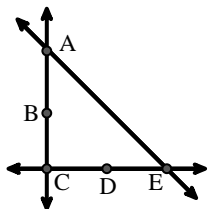
D.



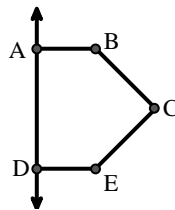
E.



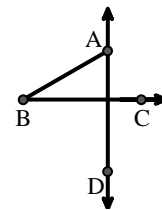
F.



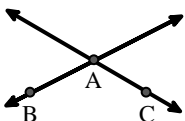
G.



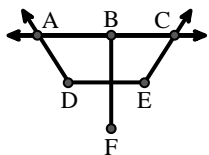
H.



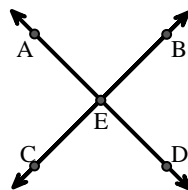
I.



J.



K.



L.

