



Match the description on the top with the visual image on the bottom.

Answers

1) \overleftrightarrow{AD} intersecting \overleftrightarrow{BC} at point E

2) \overleftrightarrow{AC} parallel to \overleftrightarrow{EB}

3) D as the midpoint of \overleftrightarrow{CE}

4) \overleftrightarrow{AC} intersected by \overleftrightarrow{BD}

5) \overleftrightarrow{BE} intersecting \overleftrightarrow{CD}

6) \overleftrightarrow{BC} intersecting $\angle ACD$

7) $\angle BAC$ creating an obtuse angle

8) Acute $\angle ABC$ intersecting \overleftrightarrow{AD}

9) \overleftrightarrow{AB} intersecting \overleftrightarrow{AD}

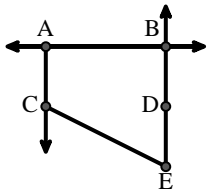
10) \overleftrightarrow{BA} intersecting \overleftrightarrow{AD}

11) \overleftrightarrow{AB} parallel to \overleftrightarrow{CD}

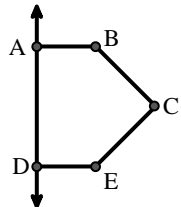
12) Right $\angle ADE$

1. _____
2. _____
3. _____
4. _____
5. _____
6. _____
7. _____
8. _____
9. _____
10. _____
11. _____
12. _____

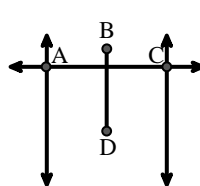
A.



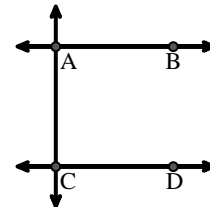
B.



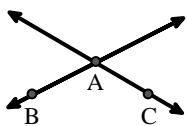
C.



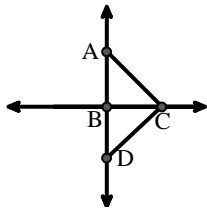
D.



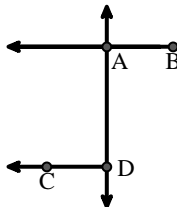
E.



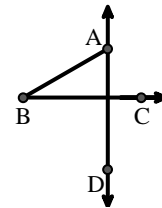
F.



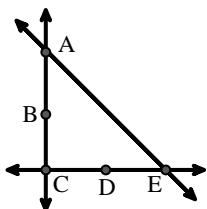
G.



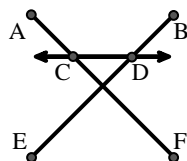
H.



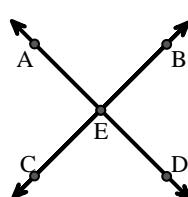
I.



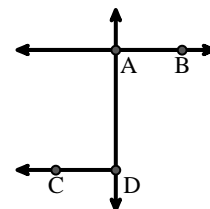
J.



K.



L.





Match the description on the top with the visual image on the bottom.

Answers

1) \overleftrightarrow{AD} intersecting \overleftrightarrow{BC} at point E

1. **K**

2) \overleftrightarrow{AC} parallel to \overleftrightarrow{EB}

2. **A**

3) D as the midpoint of \overleftrightarrow{CE}

3. **I**

4) \overleftrightarrow{AC} intersected by \overleftrightarrow{BD}

4. **C**

5) \overleftrightarrow{BE} intersecting \overleftrightarrow{CD}

5. **J**

6) \overleftrightarrow{BC} intersecting $\angle ACD$

6. **F**

7) $\angle BAC$ creating an obtuse angle

7. **E**

8) Acute $\angle ABC$ intersecting \overleftrightarrow{AD}

8. **H**

9) \overleftrightarrow{AB} intersecting \overleftrightarrow{AD}

9. **L**

10) \overleftrightarrow{BA} intersecting \overleftrightarrow{AD}

10. **G**

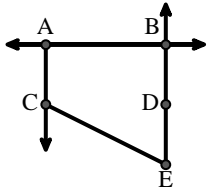
11) \overleftrightarrow{AB} parallel to \overleftrightarrow{CD}

11. **D**

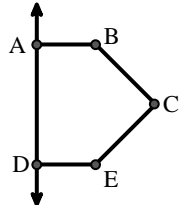
12) Right $\angle ADE$

12. **B**

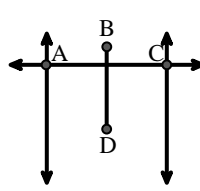
A.



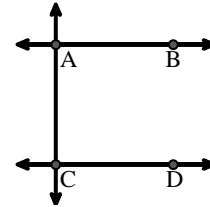
B.



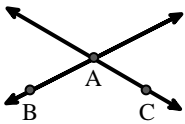
C.



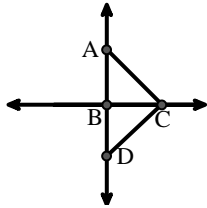
D.



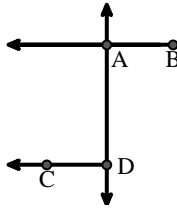
E.



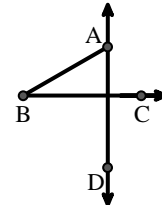
F.



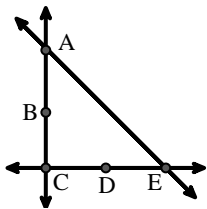
G.



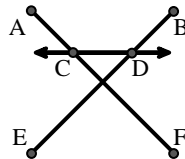
H.



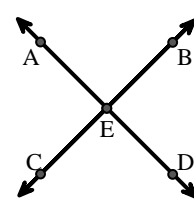
I.



J.



K.



L.

