



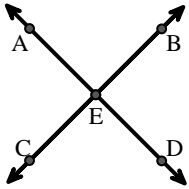
Match the description on the top with the visual image on the bottom.

Answers

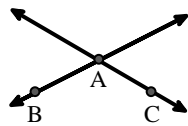
- 1) \vec{AC} parallel to \vec{EB}
- 2) \vec{BA} intersecting \vec{AD}
- 3) Acute $\angle BED$
- 4) \vec{AD} intersecting \vec{BC} at point E
- 5) \vec{BE} intersecting \vec{CD}
- 6) \vec{AC} intersected by \vec{BD}
- 7) $\angle BAC$ creating an obtuse angle
- 8) \vec{BC} intersecting $\angle ACD$
- 9) \vec{AB} intersecting \vec{AD}
- 10) Acute $\angle ABC$ intersecting \vec{AD}
- 11) $\angle DEC$ intersected by \vec{AC}
- 12) \vec{AC} perpendicular to \vec{AD}

1. _____
2. _____
3. _____
4. _____
5. _____
6. _____
7. _____
8. _____
9. _____
10. _____
11. _____
12. _____

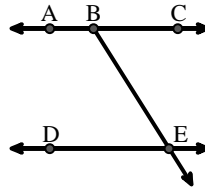
A.



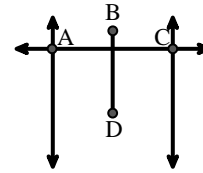
B.



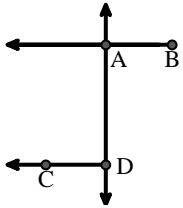
C.



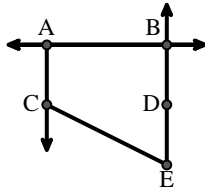
D.



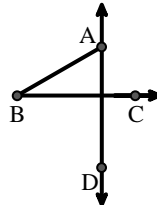
E.



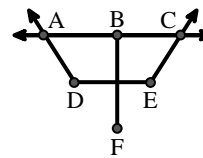
F.



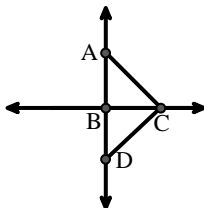
G.



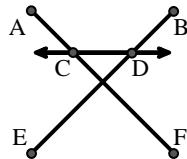
H.



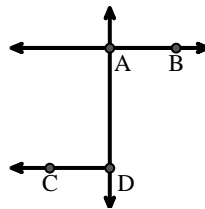
I.



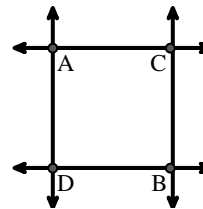
J.



K.



L.





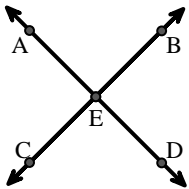
Match the description on the top with the visual image on the bottom.

Answers

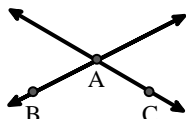
- 1) \vec{AC} parallel to \vec{EB}
- 2) \vec{BA} intersecting \vec{AD}
- 3) Acute $\angle BED$
- 4) \vec{AD} intersecting \vec{BC} at point E
- 5) \vec{BE} intersecting \vec{CD}
- 6) \vec{AC} intersected by \vec{BD}
- 7) $\angle BAC$ creating an obtuse angle
- 8) \vec{BC} intersecting $\angle ACD$
- 9) \vec{AB} intersecting \vec{AD}
- 10) Acute $\angle ABC$ intersecting \vec{AD}
- 11) $\angle DEC$ intersected by \vec{AC}
- 12) \vec{AC} perpendicular to \vec{AD}

1. **F**
2. **E**
3. **C**
4. **A**
5. **J**
6. **D**
7. **B**
8. **I**
9. **K**
10. **G**
11. **H**
12. **L**

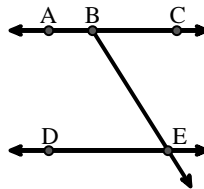
A.



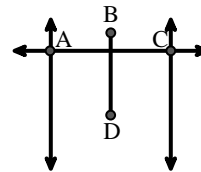
B.



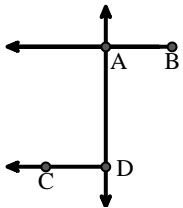
C.



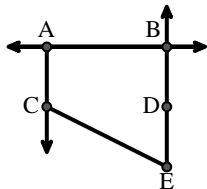
D.



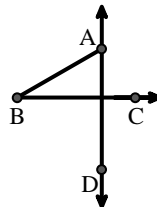
E.



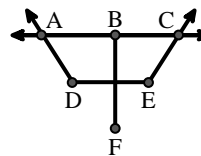
F.



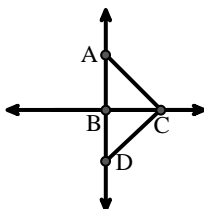
G.



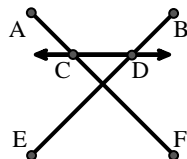
H.



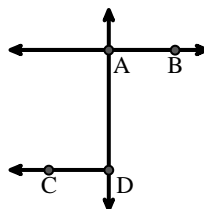
I.



J.



K.



L.

