



Measure each of the bars (in 1/4 inch) and then generate a line plot based on the information.

Answers



1. _____



2. _____



3. _____



4. _____



5. _____



6. _____



7. _____



8. _____



9. _____



10. _____



11. _____



12. _____



13. _____


















14. _____



15. _____



Measure each of the bars (in 1/4 inch) and then generate a line plot based on the information.

- 1)  $1\frac{2}{4}$
- 2)  $2\frac{1}{4}$
- 3)  $2\frac{1}{4}$
- 4)  $2\frac{0}{4}$
- 5)  $2\frac{2}{4}$
- 6)  $1\frac{0}{4}$
- 7)  $2\frac{1}{4}$
- 8)  $1\frac{1}{4}$
- 9)  $1\frac{1}{4}$
- 10)  $1\frac{3}{4}$
- 11)  $1\frac{0}{4}$
- 12)  $1\frac{1}{4}$
- 13)  $1\frac{1}{4}$
- 14)  $1\frac{1}{4}$
- 15)  $1\frac{2}{4}$

Answers

- 1. $1\frac{2}{4}$
- 2. $2\frac{1}{4}$
- 3. $2\frac{1}{4}$
- 4. $2\frac{0}{4}$
- 5. $2\frac{2}{4}$
- 6. $1\frac{0}{4}$
- 7. $2\frac{1}{4}$
- 8. $1\frac{1}{4}$
- 9. $1\frac{1}{4}$
- 10. $1\frac{3}{4}$
- 11. $1\frac{0}{4}$
- 12. $1\frac{1}{4}$
- 13. $1\frac{1}{4}$
- 14. $1\frac{1}{4}$
- 15. $1\frac{2}{4}$