





Create and label the line plot using the set of numbers provided.

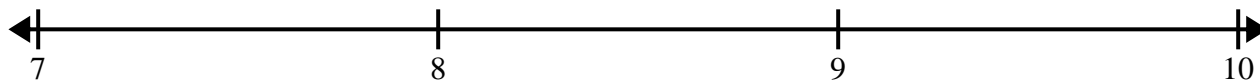
- 1)  $4$      $3\frac{1}{4}$      $5\frac{1}{4}$      $4\frac{3}{4}$      $3$      $5\frac{3}{4}$      $5\frac{1}{4}$      $4\frac{2}{4}$   
 $4\frac{3}{4}$      $3\frac{1}{4}$      $5\frac{1}{4}$      $4$      $4\frac{1}{4}$      $3\frac{3}{4}$      $3\frac{3}{4}$      $3\frac{3}{4}$




- 2)  $3\frac{1}{4}$      $3\frac{2}{4}$      $3\frac{3}{4}$      $3\frac{1}{4}$      $5\frac{3}{4}$      $4\frac{2}{4}$      $4\frac{3}{4}$      $3$   
 $4$      $4$      $5\frac{2}{4}$      $4\frac{2}{4}$      $3\frac{3}{4}$      $4\frac{1}{4}$      $3\frac{3}{4}$      $5\frac{1}{4}$




- 3)  $9\frac{1}{2}$      $8$      $7\frac{1}{2}$      $9\frac{1}{2}$      $8$      $8$      $9\frac{1}{2}$      $7$   
 $9$      $7$      $7\frac{1}{2}$      $7$      $7\frac{1}{2}$      $9$      $9$      $8\frac{1}{2}$



- 4)  $7$      $9\frac{6}{8}$      $7\frac{4}{8}$      $7\frac{7}{8}$      $7\frac{1}{8}$      $8\frac{4}{8}$      $9\frac{1}{8}$      $8\frac{6}{8}$   
 $7\frac{7}{8}$      $9\frac{1}{8}$      $9\frac{5}{8}$      $7\frac{6}{8}$      $7$      $8\frac{6}{8}$      $7\frac{4}{8}$      $7\frac{1}{8}$



- 5)  $10\frac{7}{8}$      $9\frac{6}{8}$      $10\frac{6}{8}$      $8\frac{1}{8}$      $8\frac{5}{8}$      $8\frac{4}{8}$      $8\frac{3}{8}$      $8\frac{3}{8}$   
 $9\frac{2}{8}$      $10\frac{3}{8}$      $10\frac{5}{8}$      $10\frac{6}{8}$      $9\frac{2}{8}$      $9\frac{4}{8}$      $10\frac{3}{8}$      $10\frac{2}{8}$





Create and label the line plot using the set of numbers provided.

