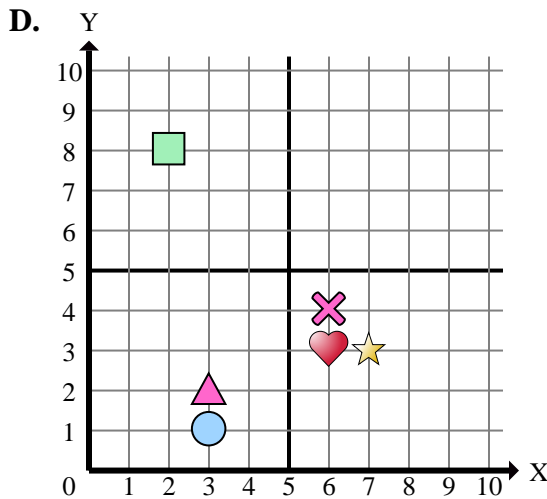
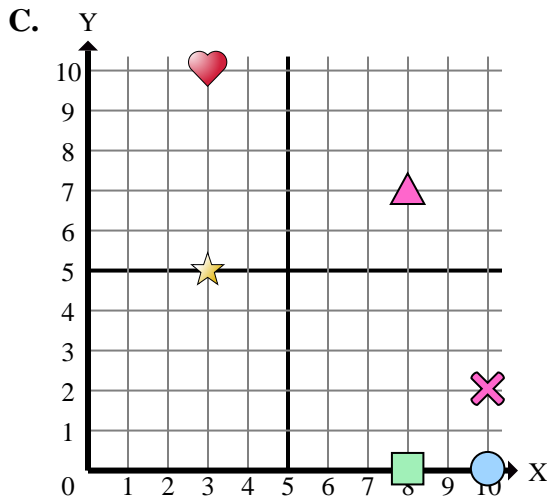
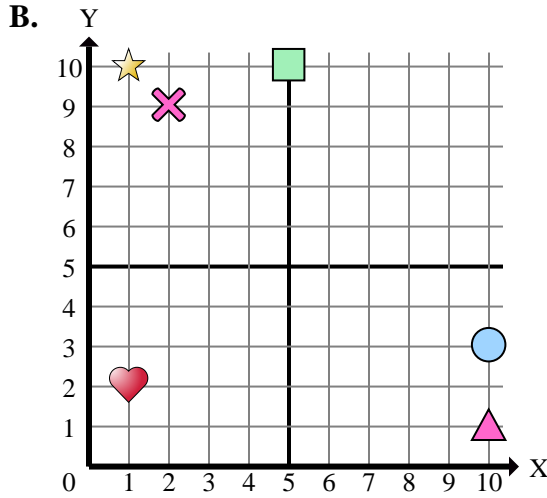
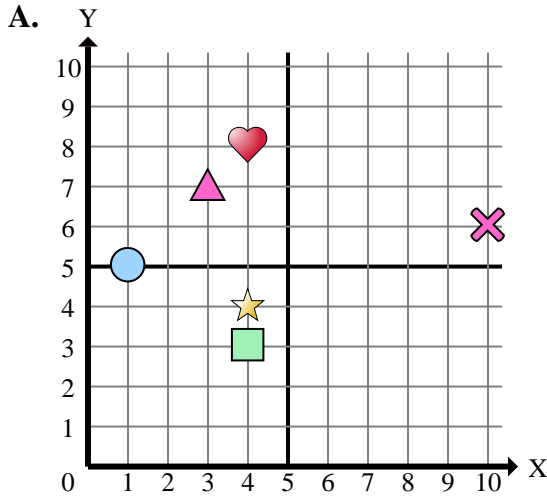




Determine which coordinate plane answers each question.



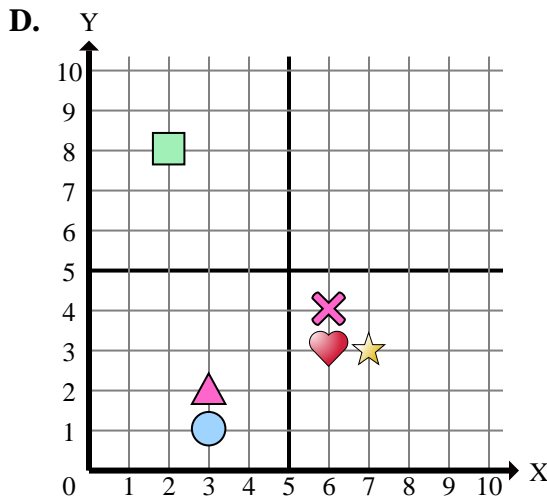
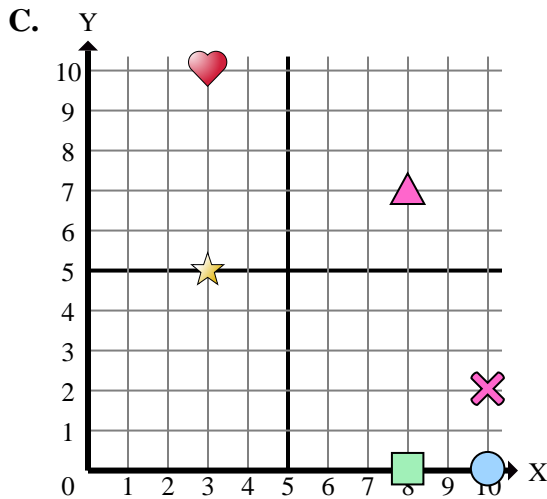
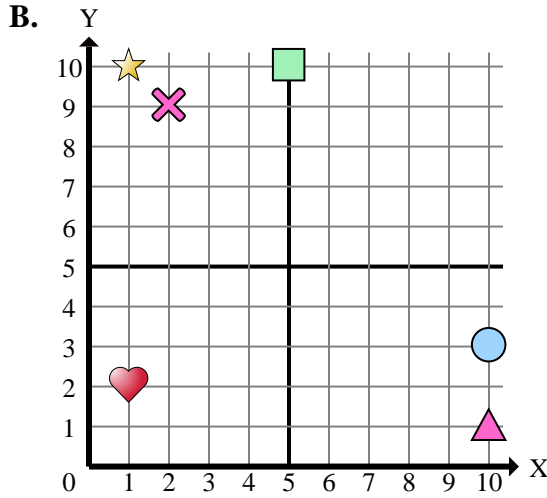
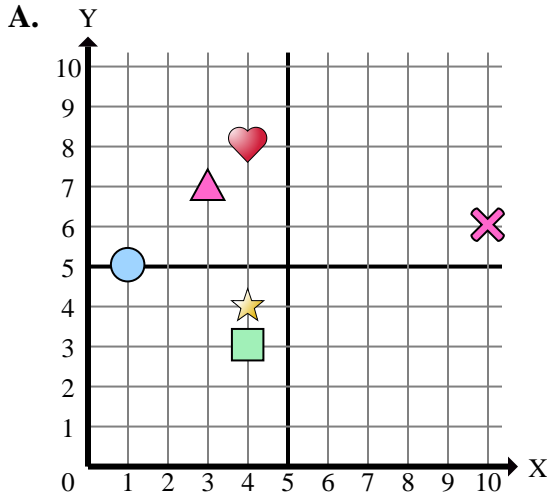
- 1) Which coordinate plane has a shape at (2 , 8)?
- 2) Which coordinate plane has a shape at (7 , 3)?
- 3) Which coordinate plane has a shape at (8 , 7)?
- 4) Which coordinate plane has a shape at (3 , 7)?
- 5) Which coordinate plane has a shape at (6 , 4)?
- 6) Which coordinate plane has a shape at (3 , 2)?
- 7) Which coordinate plane has a shape at (4 , 3)?
- 8) Which coordinate plane has a shape at (3 , 10)?
- 9) Which coordinate plane has a shape at (4 , 8)?
- 10) Which coordinate plane has a shape at (10 , 3)?
- 11) Which coordinate plane has a shape at (1 , 5)?
- 12) Which coordinate plane has a shape at (5 , 10)?
- 13) Which coordinate plane has a shape at (2 , 9)?
- 14) Which coordinate plane has a shape at (10 , 1)?
- 15) Which coordinate plane has a shape at (6 , 3)?

Answers

1. _____
2. _____
3. _____
4. _____
5. _____
6. _____
7. _____
8. _____
9. _____
10. _____
11. _____
12. _____
13. _____
14. _____
15. _____



Determine which coordinate plane answers each question.



- Which coordinate plane has a shape at (2 , 8)?
- Which coordinate plane has a shape at (7 , 3)?
- Which coordinate plane has a shape at (8 , 7)?
- Which coordinate plane has a shape at (3 , 7)?
- Which coordinate plane has a shape at (6 , 4)?
- Which coordinate plane has a shape at (3 , 2)?
- Which coordinate plane has a shape at (4 , 3)?
- Which coordinate plane has a shape at (3 , 10)?
- Which coordinate plane has a shape at (4 , 8)?
- Which coordinate plane has a shape at (10 , 3)?
- Which coordinate plane has a shape at (1 , 5)?
- Which coordinate plane has a shape at (5 , 10)?
- Which coordinate plane has a shape at (2 , 9)?
- Which coordinate plane has a shape at (10 , 1)?
- Which coordinate plane has a shape at (6 , 3)?

Answers

- D**
- D**
- C**
- A**
- D**
- D**
- A**
- C**
- A**
- B**
- A**
- B**
- B**
- B**
- D**