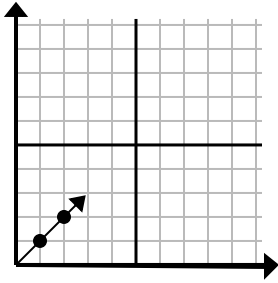




Determine which choice represents a point on the line if it were to continue.

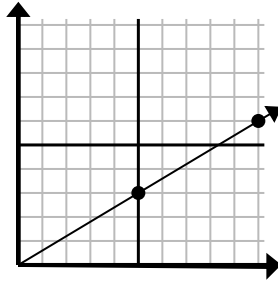
Answers

1)



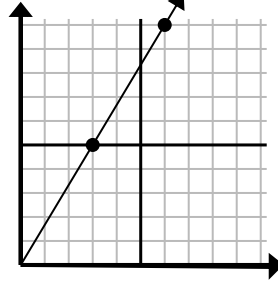
- A. (4, 5)
- B. (3, 2)
- C. (4, 4)
- D. (3, 3)

2)



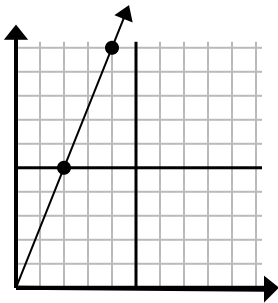
- A. (15, 9)
- B. (13, 6)
- C. (20, 12)
- D. (15, 8)

3)



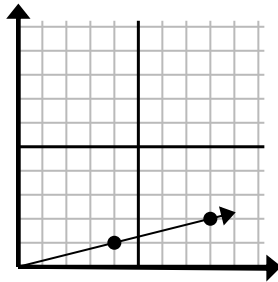
- A. (9, 15)
- B. (7, 9)
- C. (15, 25)
- D. (8, 9)

4)



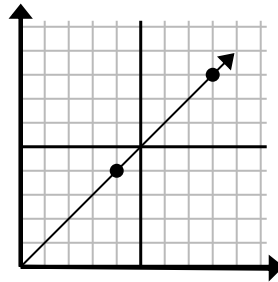
- A. (10, 25)
- B. (6, 15)
- C. (14, 35)
- D. (9, 7)

5)



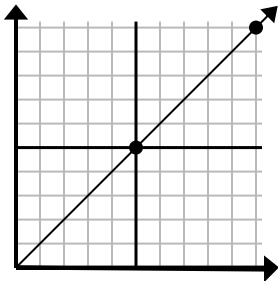
- A. (16, 4)
- B. (11, 6)
- C. (12, 3)
- D. (13, 5)

6)



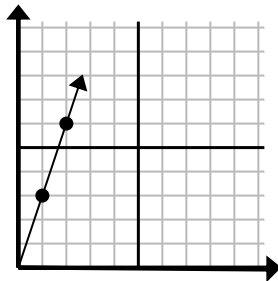
- A. (10, 5)
- B. (12, 12)
- C. (28, 28)
- D. (10, 9)

7)



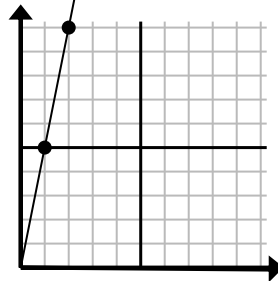
- A. (20, 20)
- B. (15, 15)
- C. (11, 9)
- D. (12, 7)

8)



- A. (3, 6)
- B. (6, 18)
- C. (4, 7)
- D. (3, 9)

9)



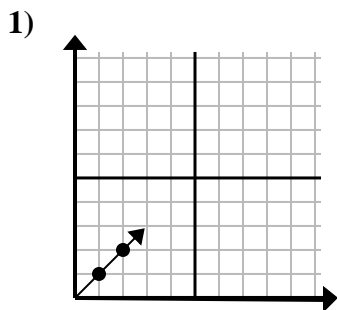
- A. (5, 8)
- B. (3, 15)
- C. (6, 30)
- D. (6, 7)

1. \_\_\_\_\_
2. \_\_\_\_\_
3. \_\_\_\_\_
4. \_\_\_\_\_
5. \_\_\_\_\_
6. \_\_\_\_\_
7. \_\_\_\_\_
8. \_\_\_\_\_
9. \_\_\_\_\_

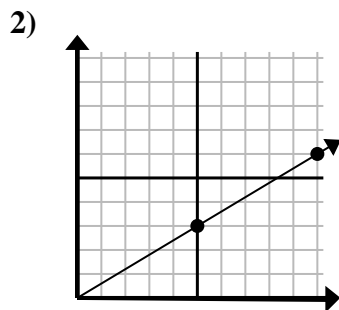


Determine which choice represents a point on the line if it were to continue.

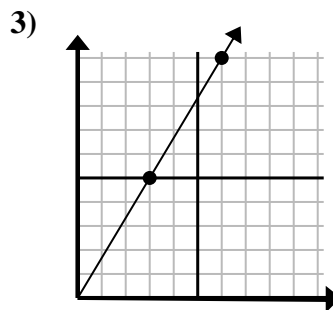
Answers



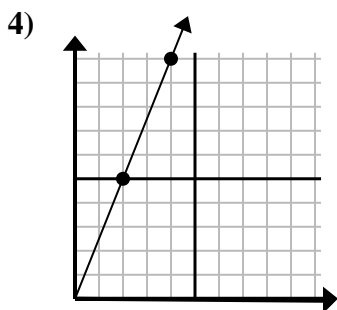
- A. (4, 5)
- B. (3, 2)
- C. (4, 4)
- D. (3, 3)



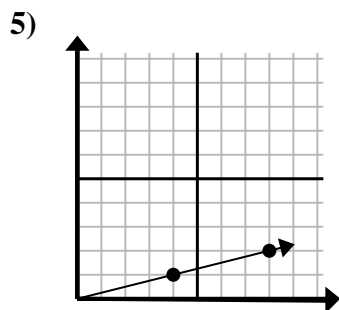
- A. (15, 9)
- B. (13, 6)
- C. (20, 12)
- D. (15, 8)



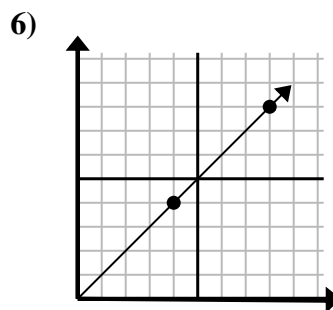
- A. (9, 15)
- B. (7, 9)
- C. (15, 25)
- D. (8, 9)



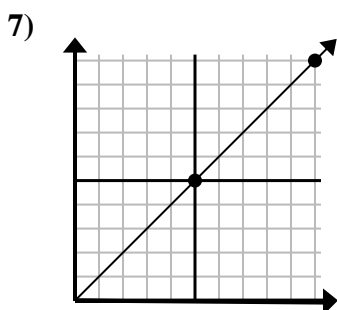
- A. (10, 25)
- B. (6, 15)
- C. (14, 35)
- D. (9, 7)



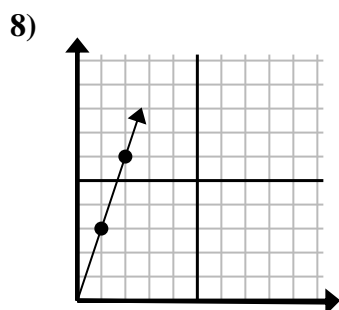
- A. (16, 4)
- B. (11, 6)
- C. (12, 3)
- D. (13, 5)



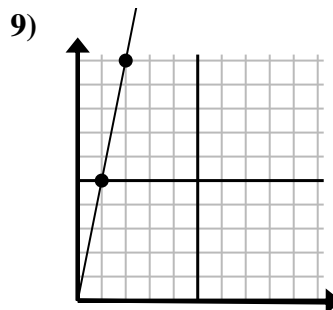
- A. (10, 5)
- B. (12, 12)
- C. (28, 28)
- D. (10, 9)



- A. (20, 20)
- B. (15, 15)
- C. (11, 9)
- D. (12, 7)



- A. (3, 6)
- B. (6, 18)
- C. (4, 7)
- D. (3, 9)



- A. (5, 8)
- B. (3, 15)
- C. (6, 30)
- D. (6, 7)

- 1.     **D**
- 2.     **A**
- 3.     **A**
- 4.     **B**
- 5.     **C**
- 6.     **B**
- 7.     **B**
- 8.     **D**
- 9.     **B**