



Fill in the grid using the chart.

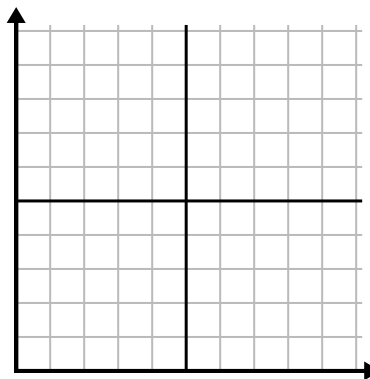
1)

| Day | 1 | 2 | 3 | 4 | 5 |
|-----------------|-----|----|-----|----|-----|
| Calories Burned | 160 | 40 | 100 | 20 | 180 |



2)

| Year | 1 | 2 | 3 | 4 | 5 |
|--------------------|---|---|---|---|----|
| Boxes of Pens Used | 9 | 2 | 8 | 6 | 10 |



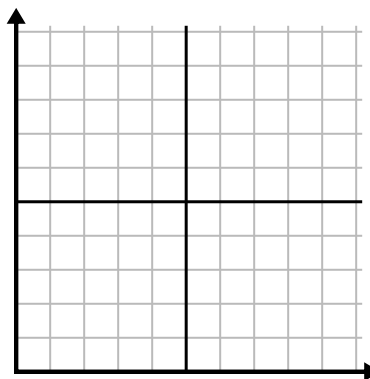
3)

| Day | 1 | 2 | 3 | 4 | 5 |
|------------|----|----|----|---|----|
| Texts Sent | 40 | 25 | 45 | 5 | 30 |



4)

| Day | 1 | 2 | 3 | 4 | 5 | 6 | 7 |
|------------|-----|-----|-----|-------|-----|-----|-----|
| Meals Sold | 600 | 900 | 200 | 1,000 | 500 | 400 | 700 |



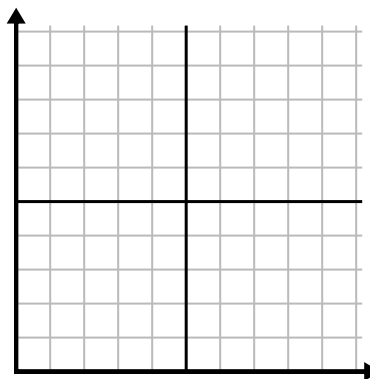
5)

| Hour | 1 | 2 | 3 | 4 | 5 |
|-------------|---|---|----|---|---|
| Amount Sold | 8 | 5 | 10 | 3 | 9 |



6)

| Week | 1 | 2 | 3 | 4 | 5 |
|----------------------|----|----|----|----|-----|
| Water Used (gallons) | 70 | 80 | 10 | 40 | 100 |

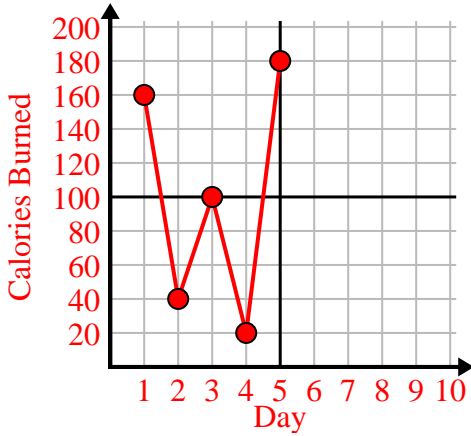




Fill in the grid using the chart.

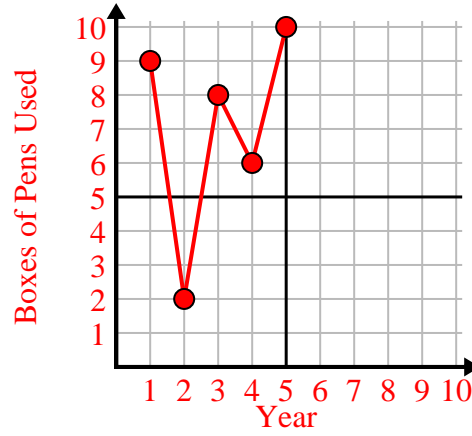
1)

| Day | 1 | 2 | 3 | 4 | 5 |
|-----------------|-----|----|-----|----|-----|
| Calories Burned | 160 | 40 | 100 | 20 | 180 |



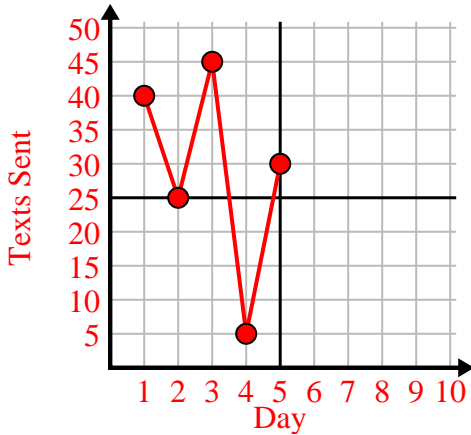
2)

| Year | 1 | 2 | 3 | 4 | 5 |
|--------------------|---|---|---|---|----|
| Boxes of Pens Used | 9 | 2 | 8 | 6 | 10 |



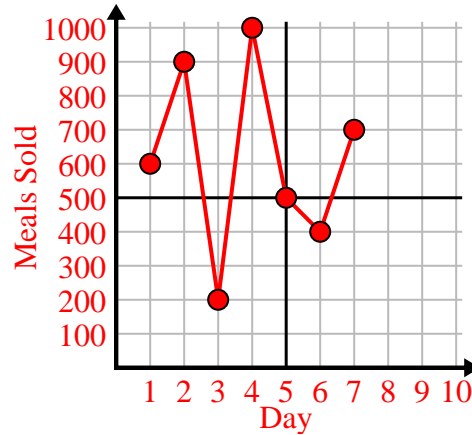
3)

| Day | 1 | 2 | 3 | 4 | 5 |
|------------|----|----|----|---|----|
| Texts Sent | 40 | 25 | 45 | 5 | 30 |



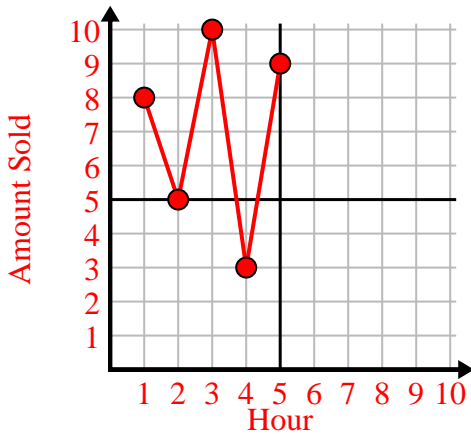
4)

| Day | 1 | 2 | 3 | 4 | 5 | 6 | 7 |
|------------|-----|-----|-----|-------|-----|-----|-----|
| Meals Sold | 600 | 900 | 200 | 1,000 | 500 | 400 | 700 |



5)

| Hour | 1 | 2 | 3 | 4 | 5 |
|-------------|---|---|----|---|---|
| Amount Sold | 8 | 5 | 10 | 3 | 9 |



6)

| Week | 1 | 2 | 3 | 4 | 5 |
|----------------------|----|----|----|----|-----|
| Water Used (gallons) | 70 | 80 | 10 | 40 | 100 |

