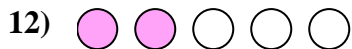
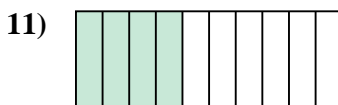

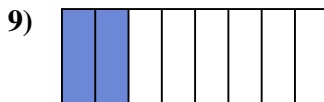
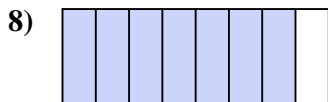
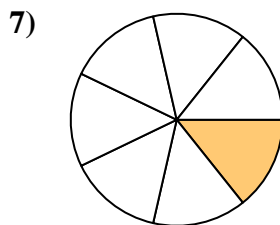
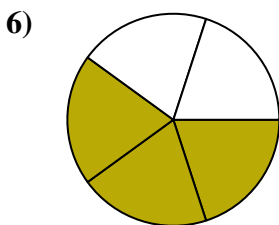
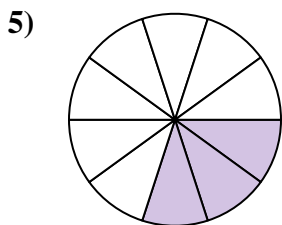

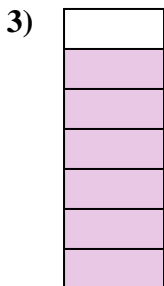






Determine if the shaded amount is 'more', 'less' or 'equal' to half.


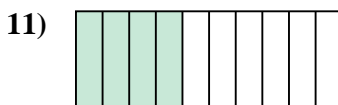

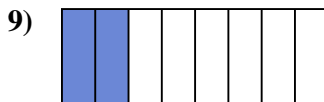
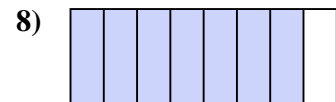
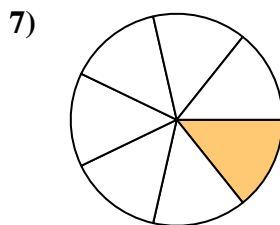
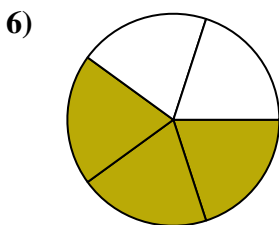
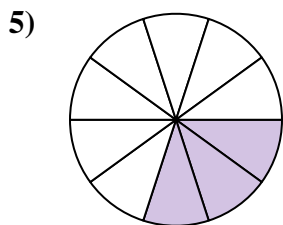

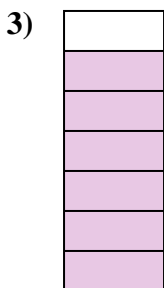


Answers



1. _____
2. _____
3. _____
4. _____
5. _____
6. _____
7. _____
8. _____
9. _____
10. _____
11. _____
12. _____
13. _____
14. _____
15. _____
16. _____
17. _____
18. _____
19. _____
20. _____



Determine if the shaded amount is 'more', 'less' or 'equal' to half.



Answers

1. less

2. more

3. more

4. less

5. less

6. more

7. less

8. more

9. less

10. equal

11. less

12. less

13. more

14. more

15. less

16. less

17. equal

18. less


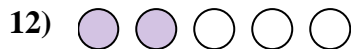

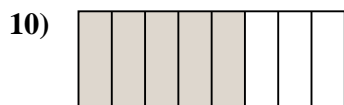
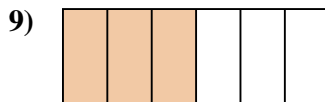
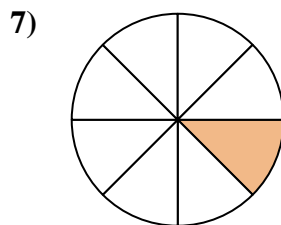
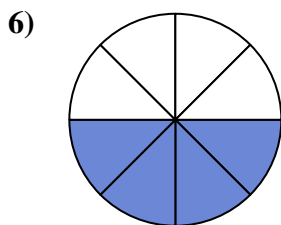
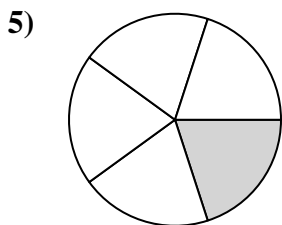

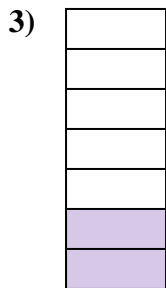


19. less

20. more



Determine if the shaded amount is 'more', 'less' or 'equal' to half.

Answers



1. _____

2. _____

3. _____

4. _____

5. _____

6. _____

7. _____

8. _____

9. _____

10. _____

11. _____

12. _____

13. _____

14. _____

15. _____

16. _____

17. _____



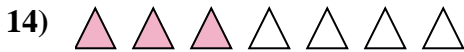
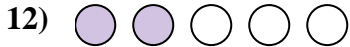
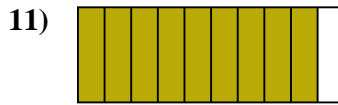
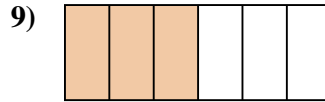
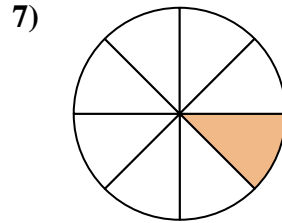
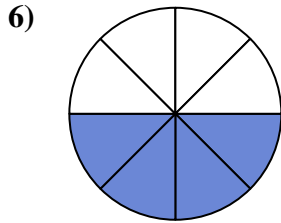
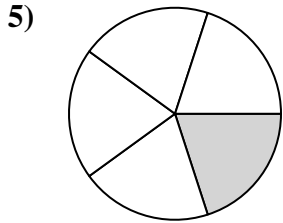

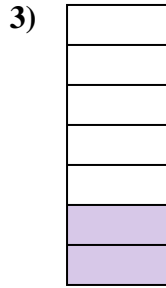


18. _____

19. _____

20. _____



Determine if the shaded amount is 'more', 'less' or 'equal' to half.



Answers

1. less

2. less

3. less

4. more

5. less

6. equal

7. less

8. more

9. equal

10. more

11. more

12. less

13. more

14. less

15. more

16. less

17. less

18. more

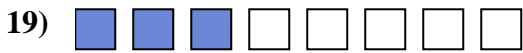
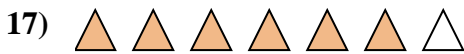

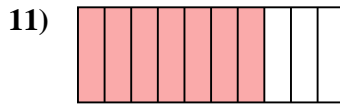

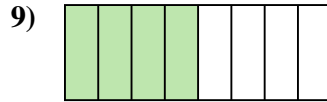
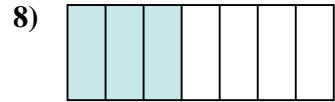
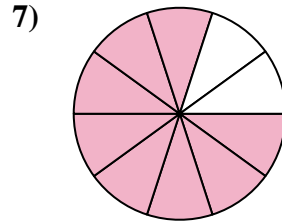
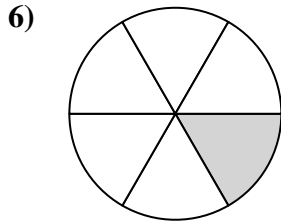
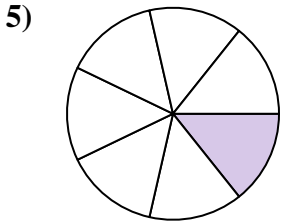

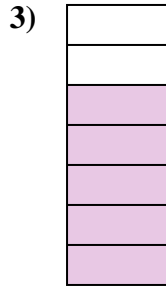
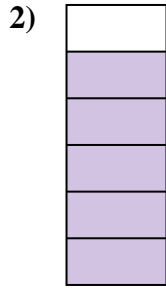

19. equal

20. less



Determine if the shaded amount is 'more', 'less' or 'equal' to half.


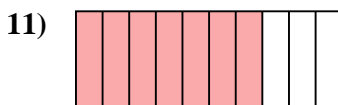
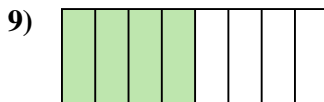
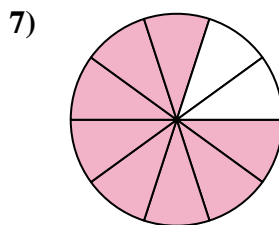
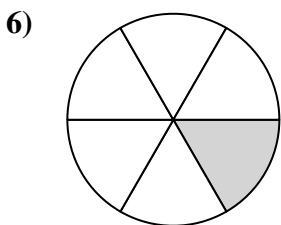
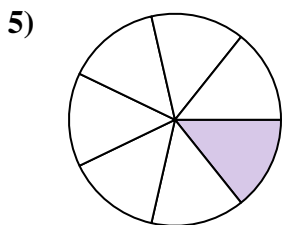

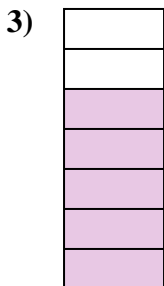
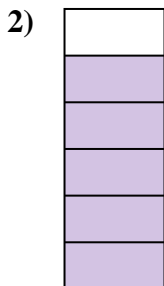
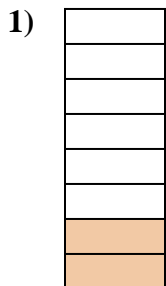
Answers



1. _____
2. _____
3. _____
4. _____
5. _____
6. _____
7. _____
8. _____
9. _____
10. _____
11. _____
12. _____
13. _____
14. _____
15. _____
16. _____
17. _____
18. _____
19. _____
20. _____



Determine if the shaded amount is 'more', 'less' or 'equal' to half.



Answers

1. less

2. more

3. more

4. more

5. less

6. less

7. more

8. less

9. equal

10. equal

11. more

12. more

13. less

14. equal

15. equal

16. less

17. more

18. more

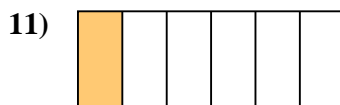
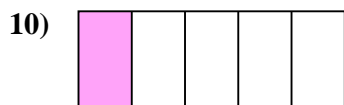
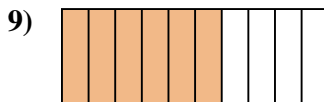
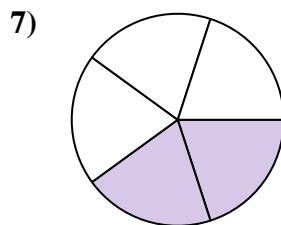
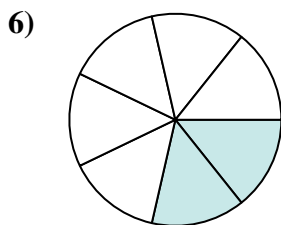
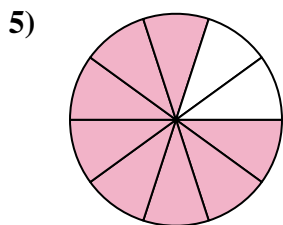


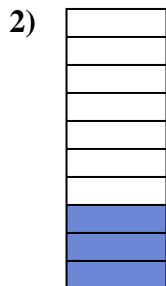

19. less

20. more



Determine if the shaded amount is 'more', 'less' or 'equal' to half.

Answers



1. _____

2. _____

3. _____

4. _____

5. _____

6. _____

7. _____

8. _____

9. _____

10. _____

11. _____

12. _____

13. _____

14. _____

15. _____

16. _____

17. _____


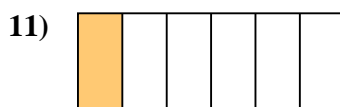

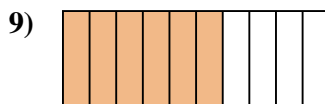
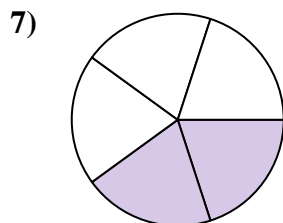
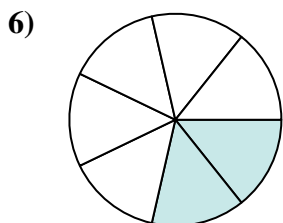
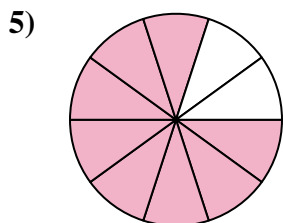


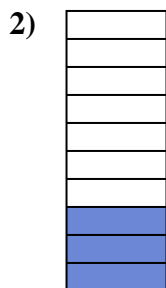

18. _____

19. _____

20. _____



Determine if the shaded amount is 'more', 'less' or 'equal' to half.



Answers

1. more

2. less

3. less

4. more

5. more

6. less

7. less

8. less

9. more

10. less

11. less

12. more

13. equal

14. more

15. less

16. less

17. equal

18. less

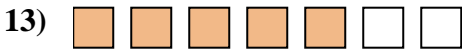
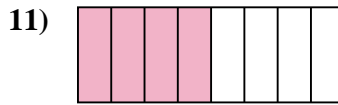
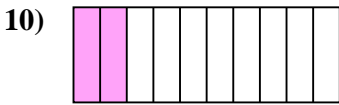
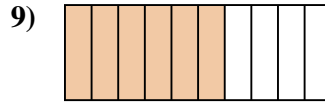
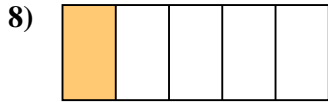
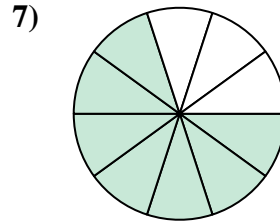
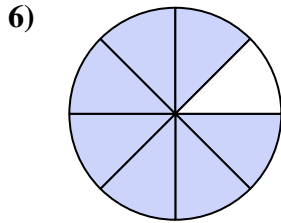
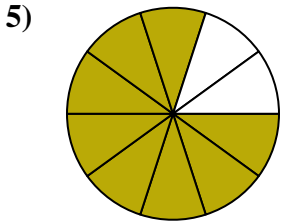


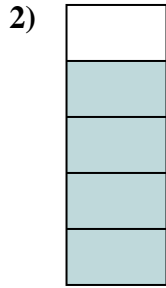
19. less

20. equal



Determine if the shaded amount is 'more', 'less' or 'equal' to half.

Answers



1. _____

2. _____

3. _____

4. _____

5. _____

6. _____

7. _____

8. _____

9. _____

10. _____

11. _____

12. _____

13. _____

14. _____

15. _____

16. _____

17. _____

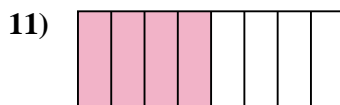
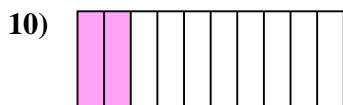
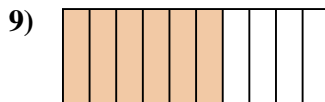

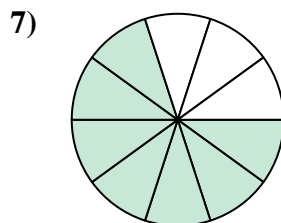
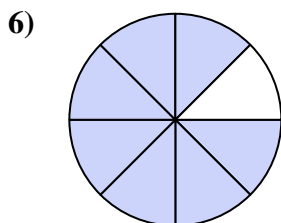
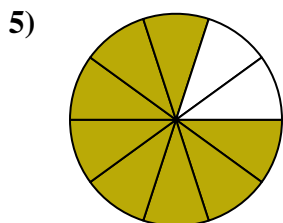


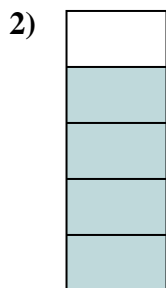

18. _____

19. _____

20. _____



Determine if the shaded amount is 'more', 'less' or 'equal' to half.



Answers

1. less

2. more

3. less

4. less

5. more

6. more

7. more

8. less

9. more

10. less

11. equal

12. more

13. more

14. equal

15. equal

16. less

17. less

18. more

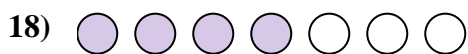



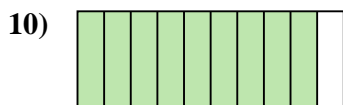
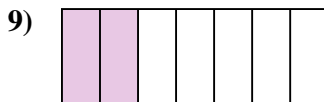
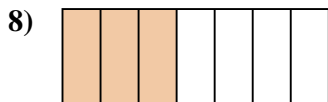
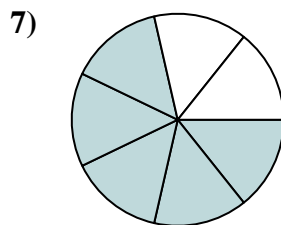
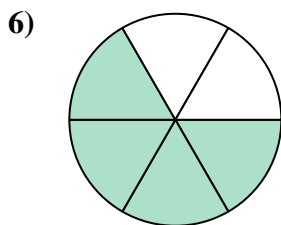
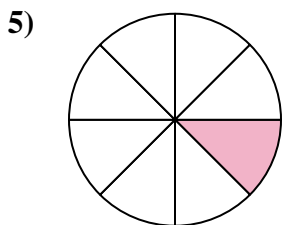
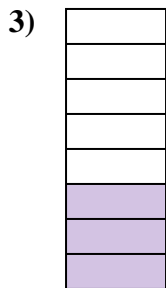


19. less

20. less



Determine if the shaded amount is 'more', 'less' or 'equal' to half.





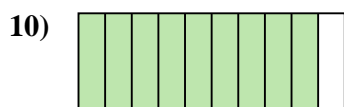
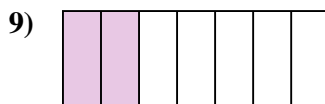
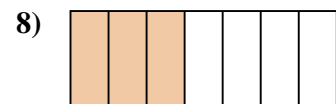
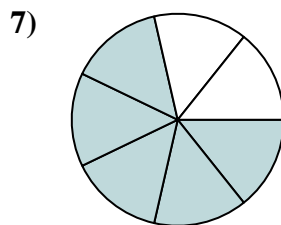
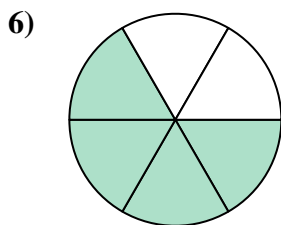
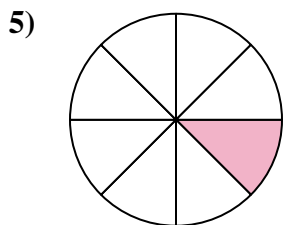
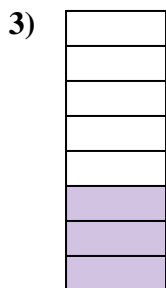


Answers



1. _____
2. _____
3. _____
4. _____
5. _____
6. _____
7. _____
8. _____
9. _____
10. _____
11. _____
12. _____
13. _____
14. _____
15. _____
16. _____
17. _____
18. _____
19. _____
20. _____



Determine if the shaded amount is 'more', 'less' or 'equal' to half.



Answers

1. more

2. equal

3. less

4. less

5. less

6. more

7. more

8. less

9. less

10. more

11. equal

12. more

13. less

14. less

15. less

16. more

17. less

18. more





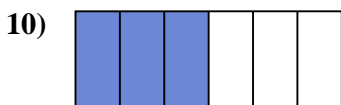

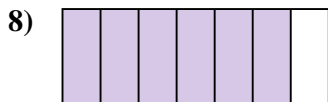
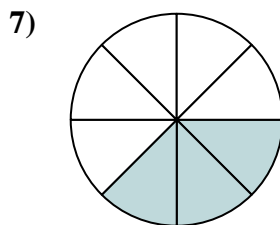
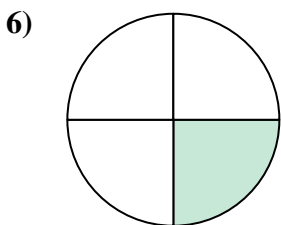
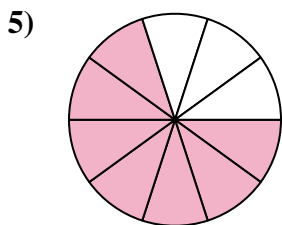

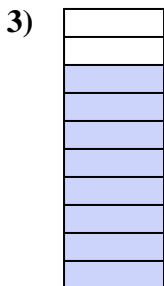


19. more

20. equal



Determine if the shaded amount is 'more', 'less' or 'equal' to half.


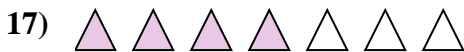
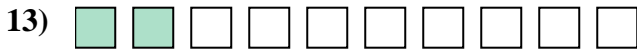

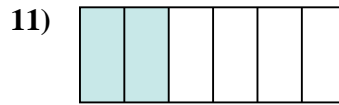
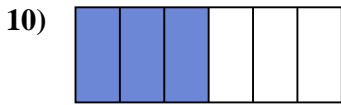
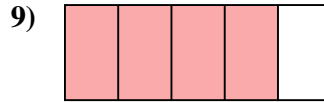
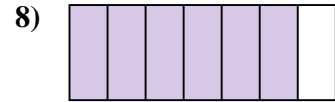
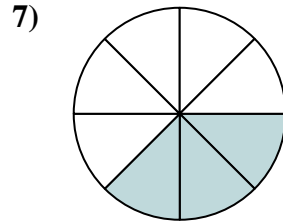
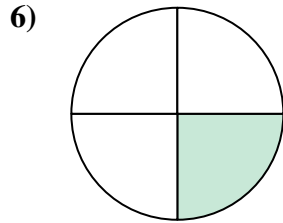
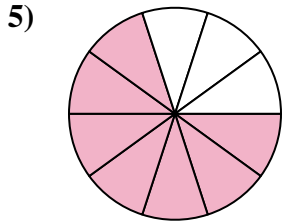


Answers



1. _____
2. _____
3. _____
4. _____
5. _____
6. _____
7. _____
8. _____
9. _____
10. _____
11. _____
12. _____
13. _____
14. _____
15. _____
16. _____
17. _____
18. _____
19. _____
20. _____



Determine if the shaded amount is 'more', 'less' or 'equal' to half.



Answers

1. equal

2. less

3. more

4. more

5. more

6. less

7. less

8. more

9. more

10. equal

11. less

12. equal

13. less

14. more

15. less

16. more

17. more

18. less


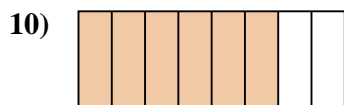
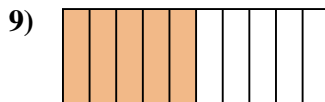

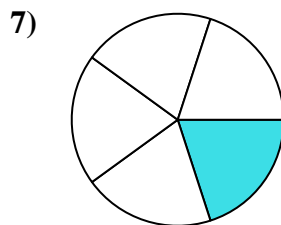
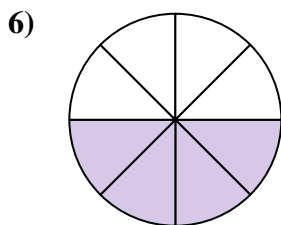
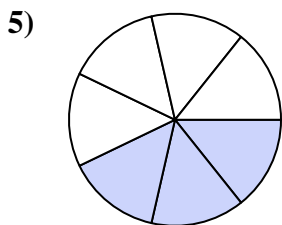

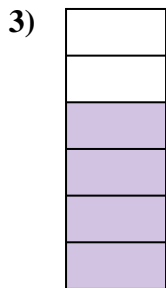

19. equal

20. less



Determine if the shaded amount is 'more', 'less' or 'equal' to half.

Answers


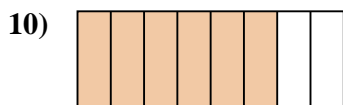
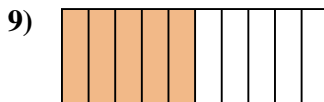

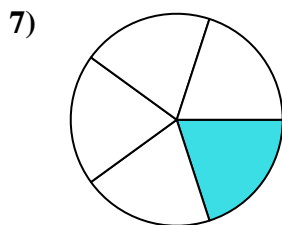
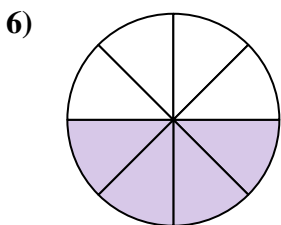
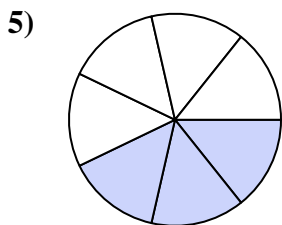

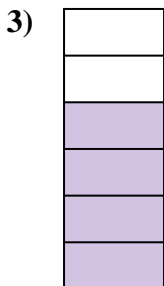



1. _____
2. _____
3. _____
4. _____
5. _____
6. _____
7. _____
8. _____
9. _____
10. _____
11. _____
12. _____
13. _____
14. _____
15. _____
16. _____
17. _____
18. _____
19. _____
20. _____



Determine if the shaded amount is 'more', 'less' or 'equal' to half.

Answers



1. more

2. less

3. more

4. less

5. less

6. equal

7. less

8. more

9. equal

10. more

11. more

12. less

13. more

14. more

15. less

16. more

17. less

18. less

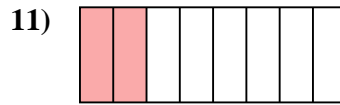
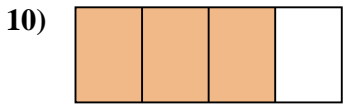
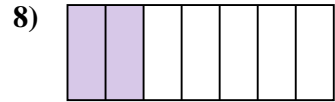
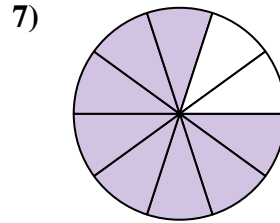
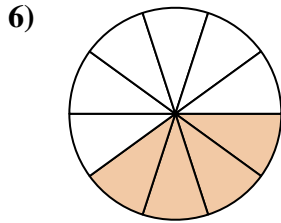
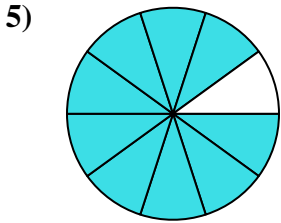

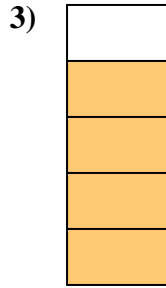
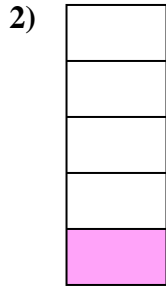

19. less

20. more



Determine if the shaded amount is 'more', 'less' or 'equal' to half.

Answers



1. _____

2. _____

3. _____

4. _____

5. _____

6. _____

7. _____

8. _____

9. _____

10. _____

11. _____

12. _____

13. _____

14. _____

15. _____

16. _____

17. _____

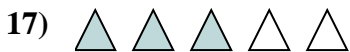
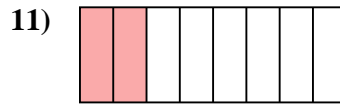
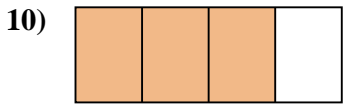
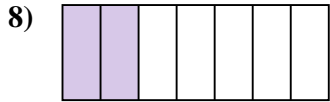
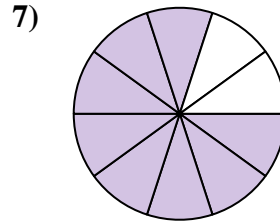
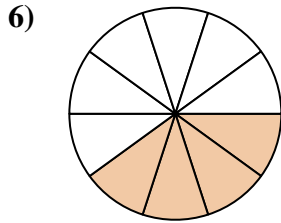
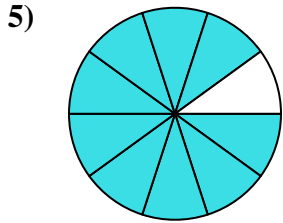

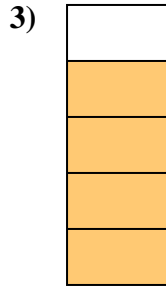
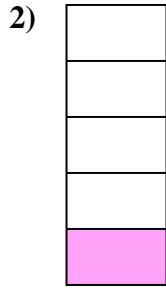

18. _____

19. _____

20. _____



Determine if the shaded amount is 'more', 'less' or 'equal' to half.



Answers

1. more

2. less

3. more

4. more

5. more

6. less

7. more

8. less

9. less

10. more

11. less

12. more

13. less

14. less

15. less

16. equal

17. more

18. equal

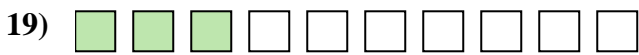
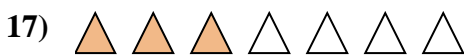
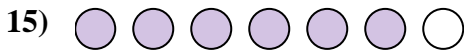
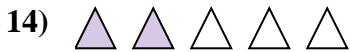
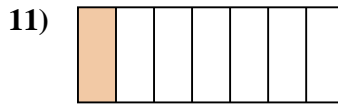
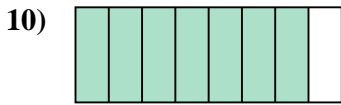
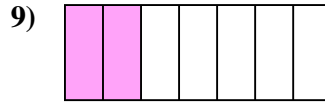
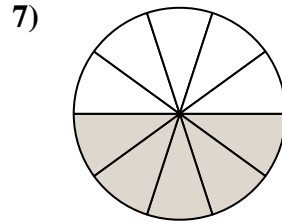
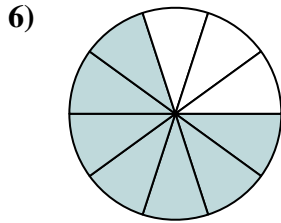
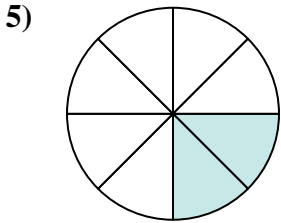




19. equal

20. more



Determine if the shaded amount is 'more', 'less' or 'equal' to half.



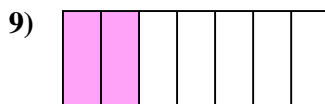

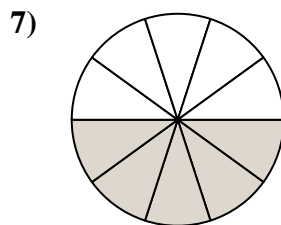
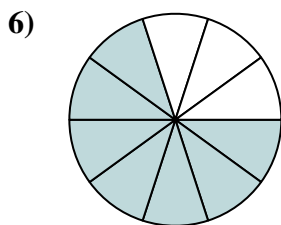
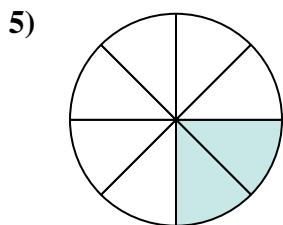




Answers



1. _____
2. _____
3. _____
4. _____
5. _____
6. _____
7. _____
8. _____
9. _____
10. _____
11. _____
12. _____
13. _____
14. _____
15. _____
16. _____
17. _____
18. _____
19. _____
20. _____



Determine if the shaded amount is 'more', 'less' or 'equal' to half.



Answers

1. less

2. less

3. more

4. more

5. less

6. more

7. equal

8. more

9. less

10. more

11. less

12. more

13. less

14. less

15. more

16. equal

17. less

18. less

19. less

20. less