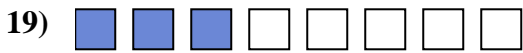
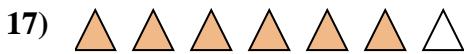

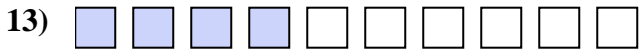
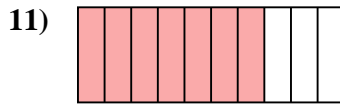

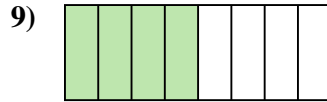
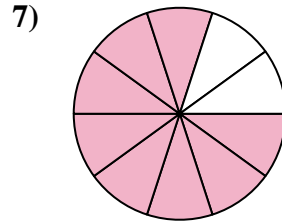
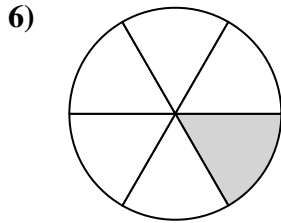
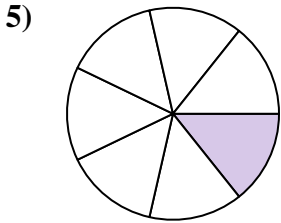

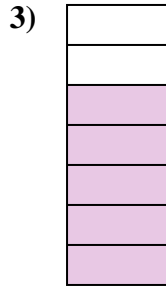
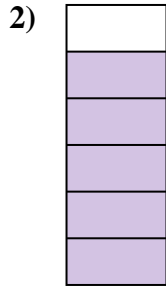





Determine if the shaded amount is 'more', 'less' or 'equal' to half.



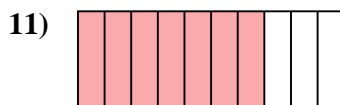

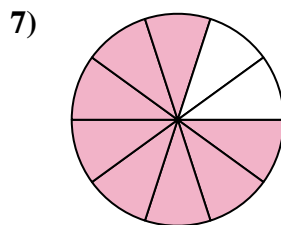
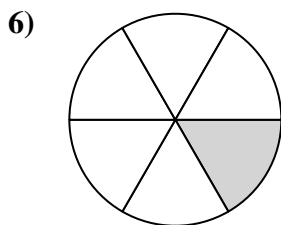
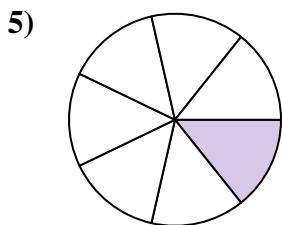
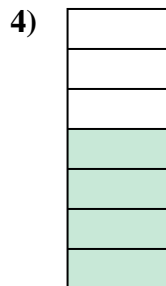
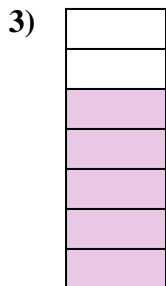
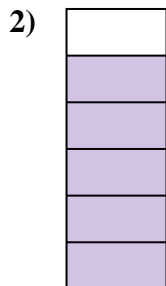
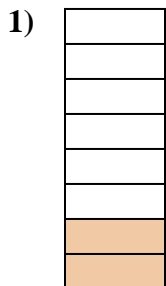
Answers



1. _____
2. _____
3. _____
4. _____
5. _____
6. _____
7. _____
8. _____
9. _____
10. _____
11. _____
12. _____
13. _____
14. _____
15. _____
16. _____
17. _____
18. _____
19. _____
20. _____



Determine if the shaded amount is 'more', 'less' or 'equal' to half.



Answers

1. less

2. more

3. more

4. more

5. less

6. less

7. more

8. less

9. equal

10. equal

11. more

12. more

13. less

14. equal

15. equal

16. less

17. more

18. more

19. less

20. more