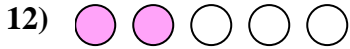
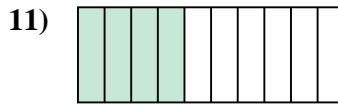
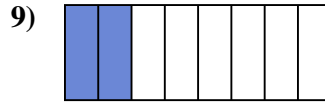
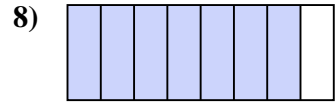
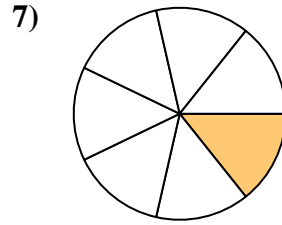
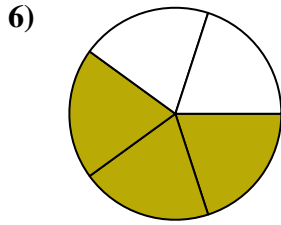
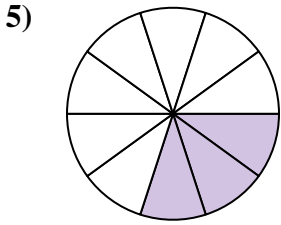

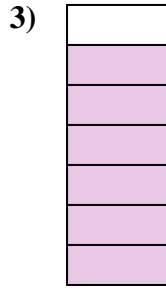






Determine if the shaded amount is 'more', 'less' or 'equal' to half.

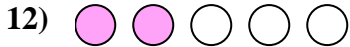
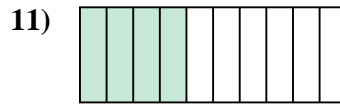
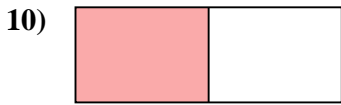
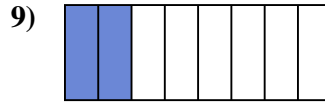
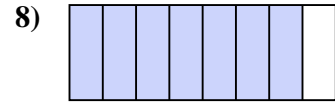
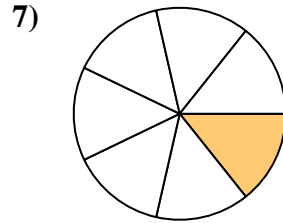
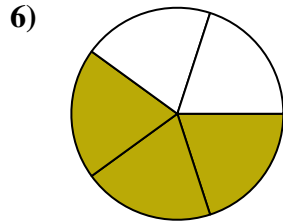
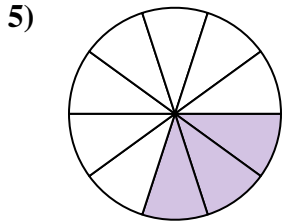

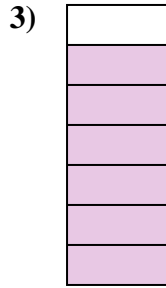


Answers



1. _____
2. _____
3. _____
4. _____
5. _____
6. _____
7. _____
8. _____
9. _____
10. _____
11. _____
12. _____
13. _____
14. _____
15. _____
16. _____
17. _____
18. _____
19. _____
20. _____



Determine if the shaded amount is 'more', 'less' or 'equal' to half.



Answers

1. less

2. more

3. more

4. less

5. less

6. more

7. less

8. more

9. less

10. equal

11. less

12. less

13. more

14. more

15. less

16. less

17. equal

18. less

19. less

20. more