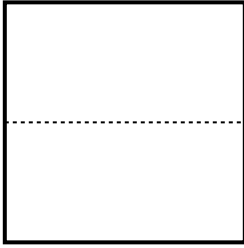




**Partition and label each shape.**


**Ex)** *Split the shape into 4 equal parts and label each part.*




**1)** *Split the shape into 8 equal parts and label each part.*




**2)** *Split the shape into 2 equal parts and label each part.*




**3)** *Split the shape into 6 equal parts and label each part.*




**4)** *Split the shape into 3 equal parts and label each part.*




**5)** *Split the shape into 4 equal parts and label each part.*




**6)** *Split the shape into 8 equal parts and label each part.*




**7)** *Split the shape into 3 equal parts and label each part.*



**8)** *Split the shape into 6 equal parts and label each part.*



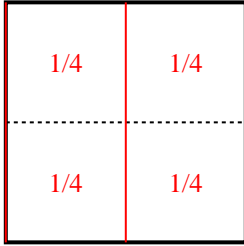
**9)** *Split the shape into 2 equal parts and label each part.*



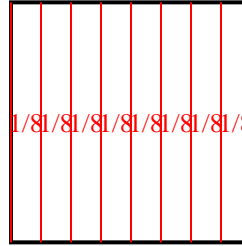


Partition and label each shape.

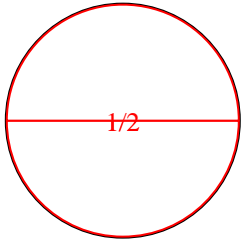
Ex) Split the shape into 4 equal parts and label each part.



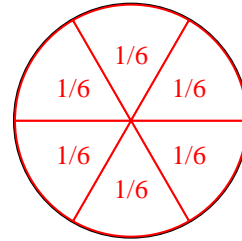
1) Split the shape into 8 equal parts and label each part.



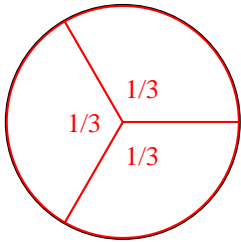
2) Split the shape into 2 equal parts and label each part.




3) Split the shape into 6 equal parts and label each part.



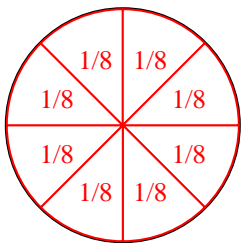
4) Split the shape into 3 equal parts and label each part.




5) Split the shape into 4 equal parts and label each part.



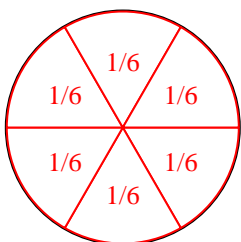
6) Split the shape into 8 equal parts and label each part.



7) Split the shape into 3 equal parts and label each part.



8) Split the shape into 6 equal parts and label each part.



9) Split the shape into 2 equal parts and label each part.

