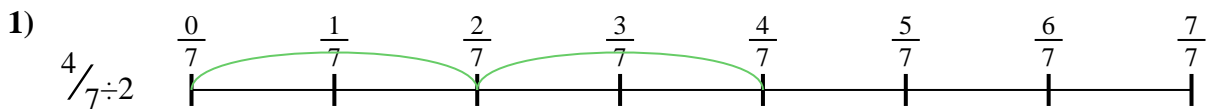




Use the numberline to solve each problem. The first is marked for you.


Answers



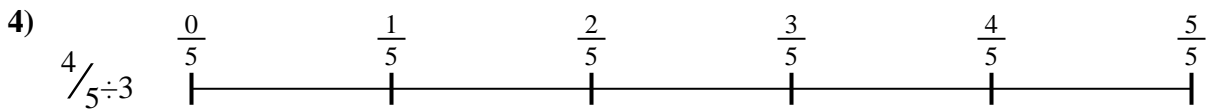
1. _____



2. _____



3. _____



4. _____



5. _____




6. _____



7. _____



8. _____

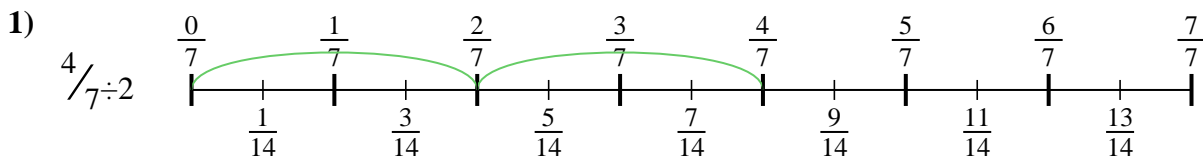


9. _____

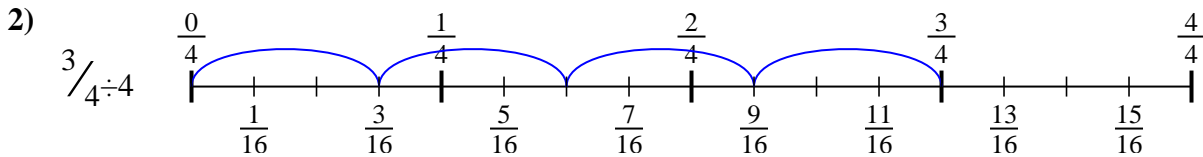


Use the numberline to solve each problem. The first is marked for you.

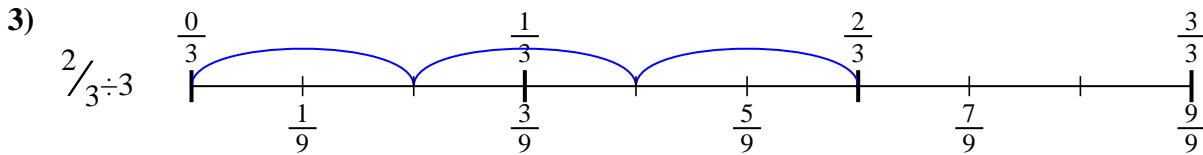
Answers



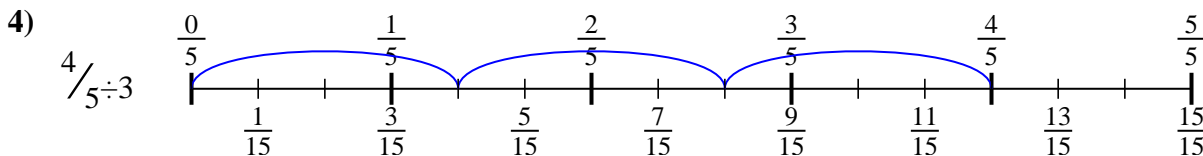
1. $\frac{4}{14}$



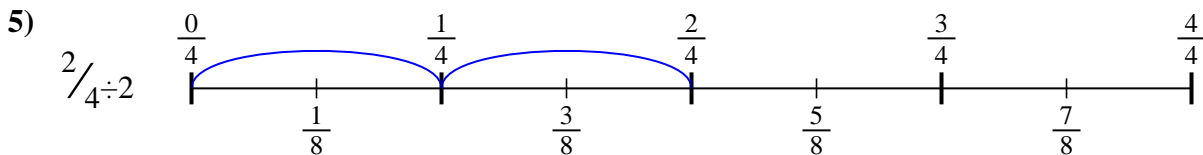
2. $\frac{3}{16}$



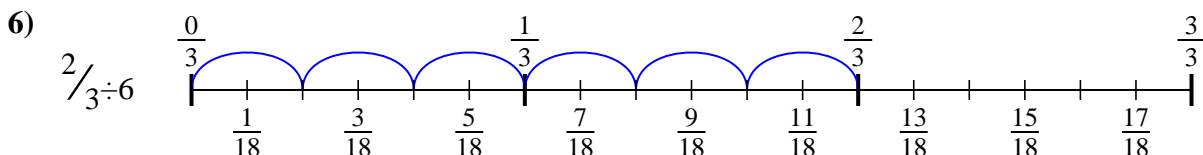
3. $\frac{2}{9}$



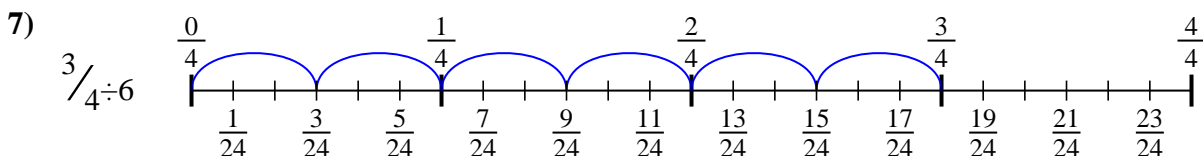
4. $\frac{4}{15}$



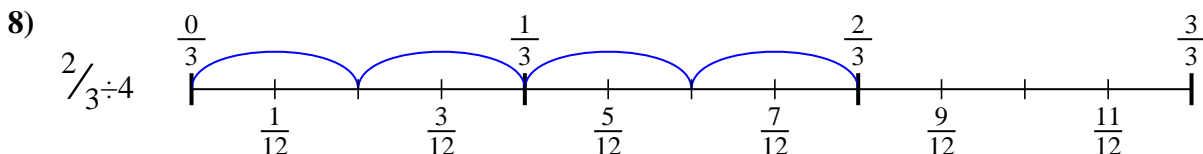
5. $\frac{2}{8}$



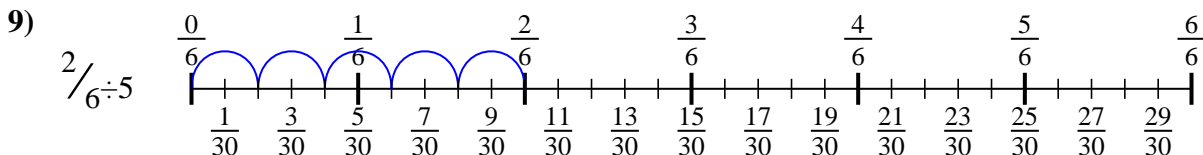
6. $\frac{2}{18}$



7. $\frac{3}{24}$



8. $\frac{2}{12}$



9. $\frac{2}{30}$



Use the numberline to solve each problem. The first is marked for you.

Answers

$\frac{2}{18}$

$\frac{2}{9}$

$\frac{4}{15}$

$\frac{2}{30}$

$\frac{4}{14}$

$\frac{2}{8}$

$\frac{3}{24}$

$\frac{3}{16}$

$\frac{2}{12}$

1. _____

2. _____

3. _____

4. _____

5. _____

6. _____

7. _____

8. _____

9. _____

