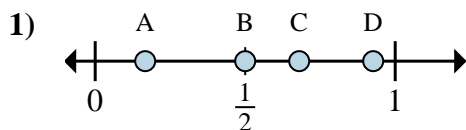
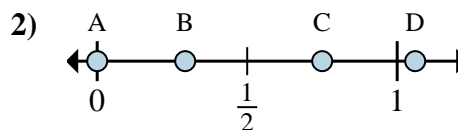
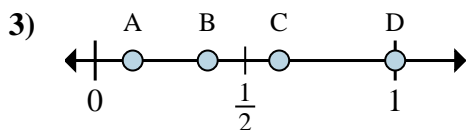
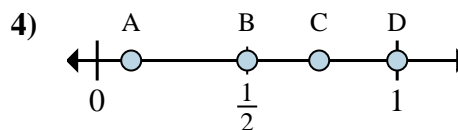
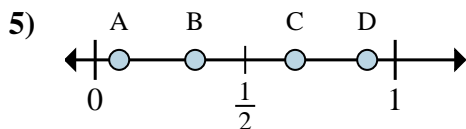
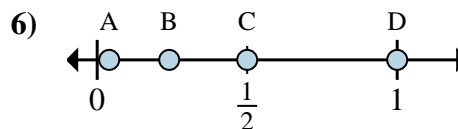
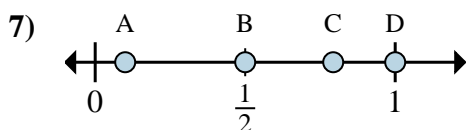
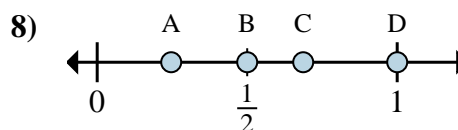


**Determine which letter best shows the location of the fraction.****Answers**a. Which letter best shows $\frac{1}{6}$?b. Which letter best shows $\frac{3}{6}$?a. Which letter best shows $\frac{0}{4}$?b. Which letter best shows $\frac{3}{4}$?a. Which letter best shows $\frac{1}{8}$?b. Which letter best shows $\frac{3}{8}$?a. Which letter best shows $\frac{2}{2}$?b. Which letter best shows $\frac{1}{2}$?a. Which letter best shows $\frac{1}{3}$?b. Which letter best shows $\frac{2}{3}$?a. Which letter best shows $\frac{2}{2}$?b. Which letter best shows $\frac{1}{2}$?a. Which letter best shows $\frac{1}{2}$?b. Which letter best shows $\frac{2}{2}$?a. Which letter best shows $\frac{1}{2}$?b. Which letter best shows $\frac{2}{2}$?

1. _____

2. _____

3. _____

4. _____

5. _____

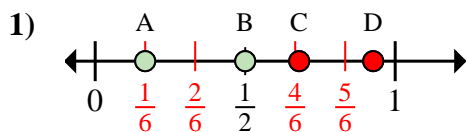
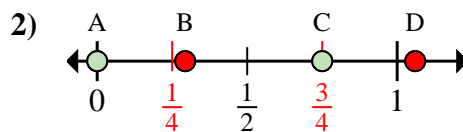
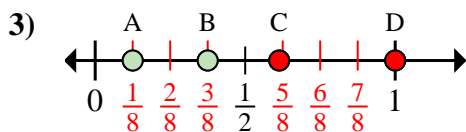
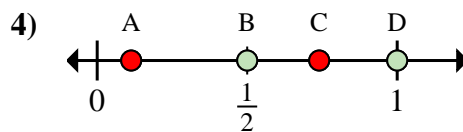
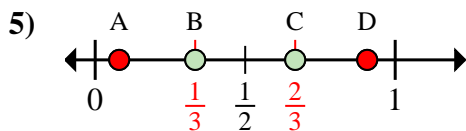
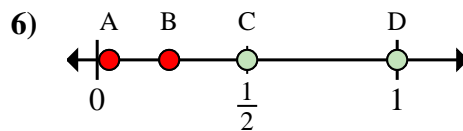
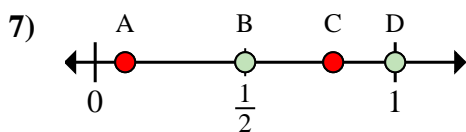
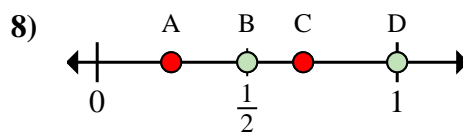
6. _____

7. _____

8. _____



Determine which letter best shows the location of the fraction.

Answersa. Which letter best shows $\frac{1}{6}$?b. Which letter best shows $\frac{3}{6}$?a. Which letter best shows $\frac{0}{4}$?b. Which letter best shows $\frac{3}{4}$?a. Which letter best shows $\frac{1}{8}$?b. Which letter best shows $\frac{3}{8}$?a. Which letter best shows $\frac{2}{2}$?b. Which letter best shows $\frac{1}{2}$?a. Which letter best shows $\frac{1}{3}$?b. Which letter best shows $\frac{2}{3}$?a. Which letter best shows $\frac{2}{2}$?b. Which letter best shows $\frac{1}{2}$?a. Which letter best shows $\frac{1}{2}$?b. Which letter best shows $\frac{2}{2}$?a. Which letter best shows $\frac{1}{2}$?b. Which letter best shows $\frac{2}{2}$?1. **A** **B**2. **A** **C**3. **A** **B**4. **D** **B**5. **B** **C**6. **D** **C**7. **B** **D**8. **B** **D**