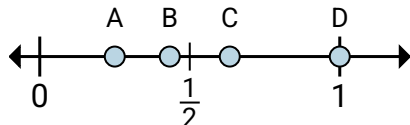




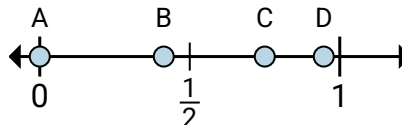
Determine which letter best shows the location of the fraction.

**Answers**

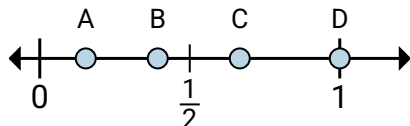
1)

a. Which letter best shows  $\frac{1}{4}$ ?b. Which letter best shows  $\frac{4}{4}$ ?

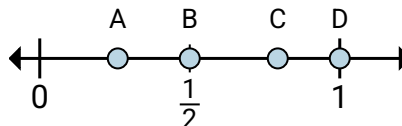
2)

a. Which letter best shows  $\frac{0}{8}$ ?b. Which letter best shows  $\frac{6}{8}$ ?

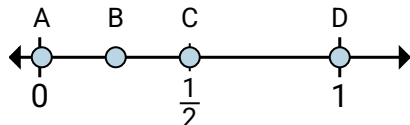
3)

a. Which letter best shows  $\frac{2}{3}$ ?b. Which letter best shows  $\frac{3}{3}$ ?

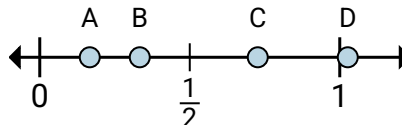
4)

a. Which letter best shows  $\frac{1}{2}$ ?b. Which letter best shows  $\frac{2}{2}$ ?

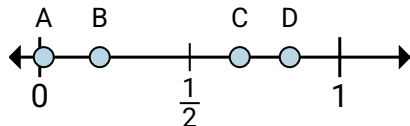
5)

a. Which letter best shows  $\frac{8}{8}$ ?b. Which letter best shows  $\frac{4}{8}$ ?

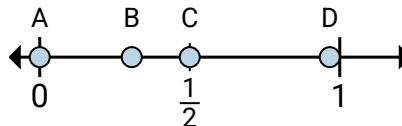
6)

a. Which letter best shows  $\frac{2}{6}$ ?b. Which letter best shows  $\frac{1}{6}$ ?

7)

a. Which letter best shows  $\frac{5}{6}$ ?b. Which letter best shows  $\frac{4}{6}$ ?

8)

a. Which letter best shows  $\frac{0}{6}$ ?b. Which letter best shows  $\frac{3}{6}$ ?

1. \_\_\_\_\_

2. \_\_\_\_\_

3. \_\_\_\_\_

4. \_\_\_\_\_

5. \_\_\_\_\_

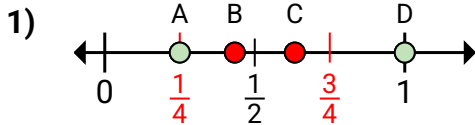
6. \_\_\_\_\_

7. \_\_\_\_\_

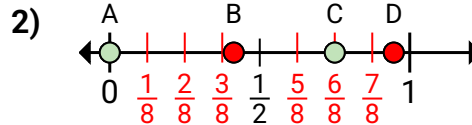
8. \_\_\_\_\_



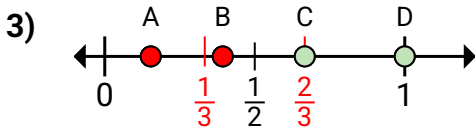
Determine which letter best shows the location of the fraction.

**Answers**

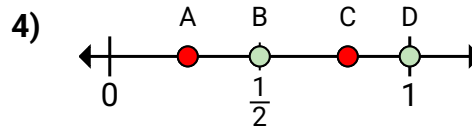
- a. Which letter best shows  $\frac{1}{4}$ ?  
b. Which letter best shows  $\frac{4}{4}$ ?



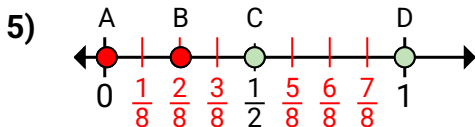
- a. Which letter best shows  $\frac{0}{8}$ ?  
b. Which letter best shows  $\frac{6}{8}$ ?



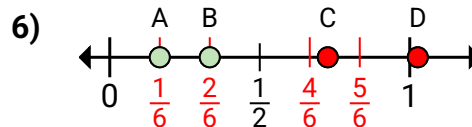
- a. Which letter best shows  $\frac{2}{3}$ ?  
b. Which letter best shows  $\frac{3}{3}$ ?



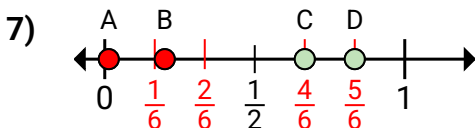
- a. Which letter best shows  $\frac{1}{2}$ ?  
b. Which letter best shows  $\frac{2}{2}$ ?



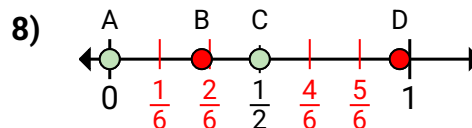
- a. Which letter best shows  $\frac{8}{8}$ ?  
b. Which letter best shows  $\frac{4}{8}$ ?



- a. Which letter best shows  $\frac{2}{6}$ ?  
b. Which letter best shows  $\frac{1}{6}$ ?



- a. Which letter best shows  $\frac{5}{6}$ ?  
b. Which letter best shows  $\frac{4}{6}$ ?



- a. Which letter best shows  $\frac{0}{6}$ ?  
b. Which letter best shows  $\frac{3}{6}$ ?

1. A D  
2. A C  
3. C D  
4. B D  
5. D C  
6. B A  
7. D C  
8. A C