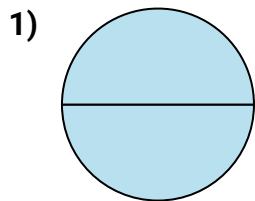
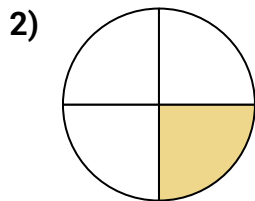




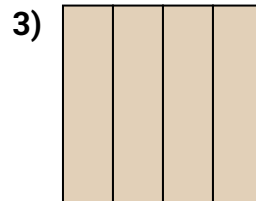
Determine which letter best describes the shaded portion.

Answers


- A. two-halves
B. two-fourths
C. one-half



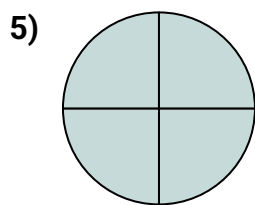
- A. two-quarters
B. one-half
C. one-fourth



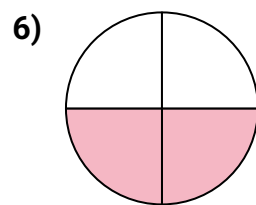
- A. three-fourths
B. one-fourth
C. four-quarters



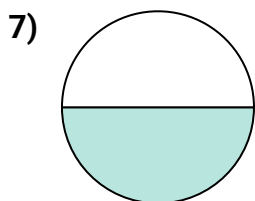
- A. one-half
B. four-quarters
C. three-fourths



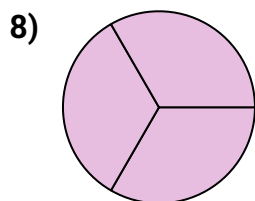
- A. four-quarters
B. one-quarter
C. two-halves



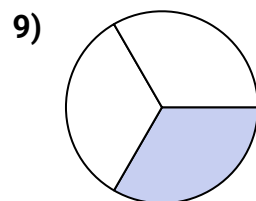
- A. one-half
B. two-quarters
C. four-fourths



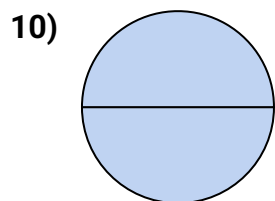
- A. one-half
B. two-quarters
C. one-quarter



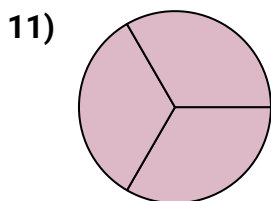
- A. three-thirds
B. four-quarters
C. two-fourths



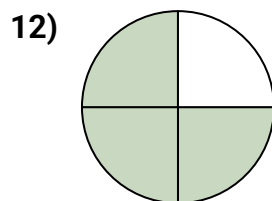
- A. three-fourths
B. two-quarters
C. one-third



- A. two-fourths
B. four-quarters
C. two-halves



- A. three-thirds
B. one-fourth
C. four-quarters



- A. one-half
B. two-quarters
C. three-fourths

1. _____

2. _____

3. _____

4. _____

5. _____

6. _____

7. _____

8. _____

9. _____

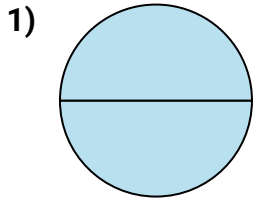
10. _____

11. _____

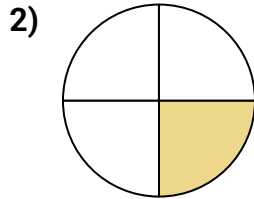
12. _____



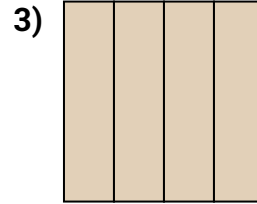
Determine which letter best describes the shaded portion.

Answers

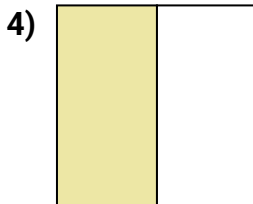
- A. two-halves
B. two-fourths
C. one-half



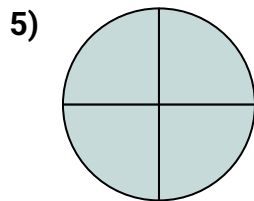
- A. two-quarters
B. one-half
C. one-fourth



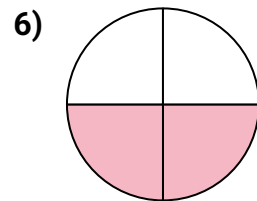
- A. three-fourths
B. one-fourth
C. four-quarters



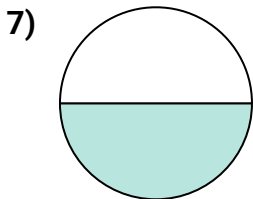
- A. one-half
B. four-quarters
C. three-fourths



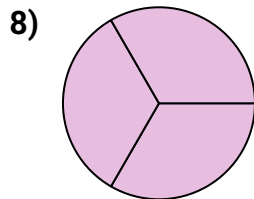
- A. four-quarters
B. one-quarter
C. two-halves



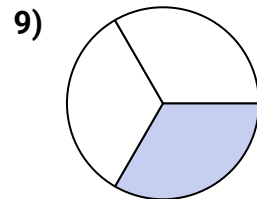
- A. one-half
B. two-quarters
C. four-fourths



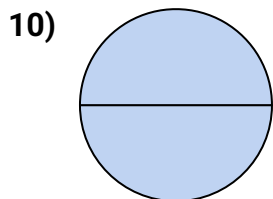
- A. one-half
B. two-quarters
C. one-quarter



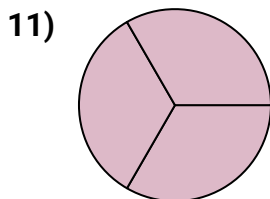
- A. three-thirds
B. four-quarters
C. two-fourths



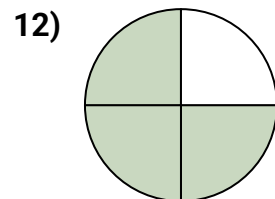
- A. three-fourths
B. two-quarters
C. one-third



- A. two-fourths
B. four-quarters
C. two-halves



- A. three-thirds
B. one-fourth
C. four-quarters



- A. one-half
B. two-quarters
C. three-fourths

1. **A**
2. **C**
3. **C**
4. **A**
5. **A**
6. **B**
7. **A**
8. **A**
9. **C**
10. **C**
11. **A**
12. **C**