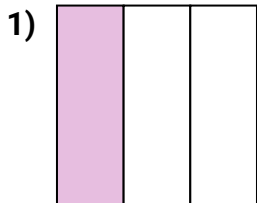
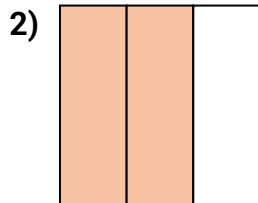




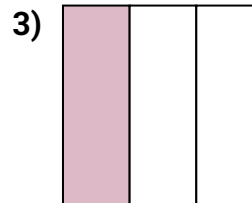
Determine which letter best describes the shaded portion.

Answers

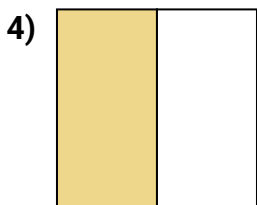
- A. three-quarters
B. two-fourths
C. one-third



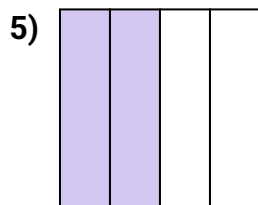
- A. two-thirds
B. one-half
C. three-fourths



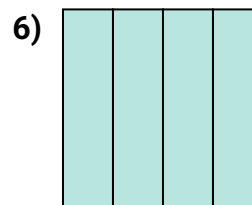
- A. two-quarters
B. one-third
C. one-half



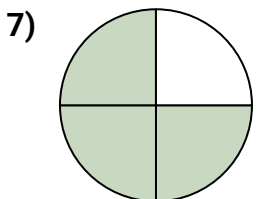
- A. one-half
B. one-fourth
C. three-fourths



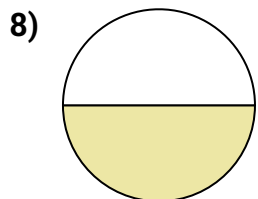
- A. one-half
B. two-quarters
C. one-quarter



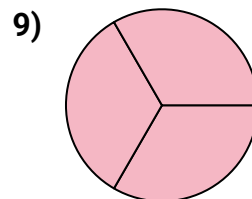
- A. one-half
B. two-halves
C. four-quarters



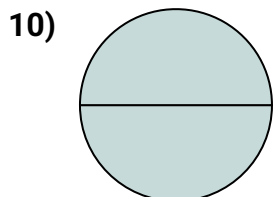
- A. three-fourths
B. four-quarters
C. one-fourth



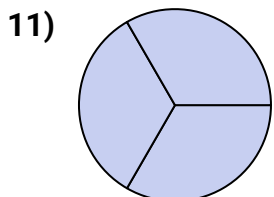
- A. three-quarters
B. one-half
C. one-quarter



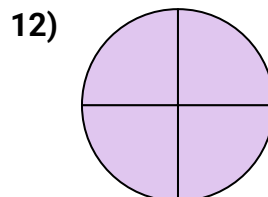
- A. two-halves
B. three-thirds
C. four-fourths



- A. four-quarters
B. two-halves
C. one-half



- A. four-quarters
B. one-half
C. three-thirds



- A. two-quarters
B. four-fourths
C. one-fourth

1. _____

2. _____

3. _____

4. _____

5. _____

6. _____

7. _____

8. _____

9. _____

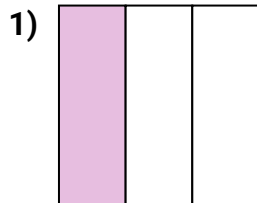
10. _____

11. _____

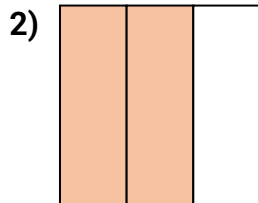
12. _____



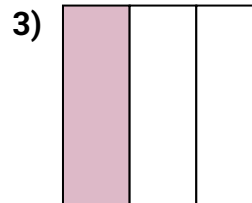
Determine which letter best describes the shaded portion.

Answers

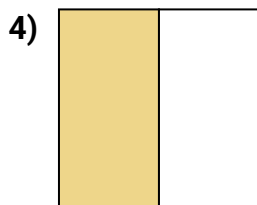
- A. three-quarters
B. two-fourths
C. one-third



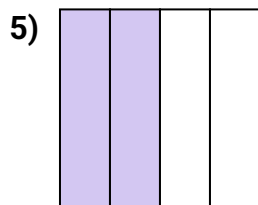
- A. two-thirds
B. one-half
C. three-fourths



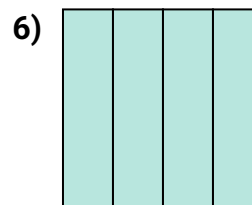
- A. two-quarters
B. one-third
C. one-half



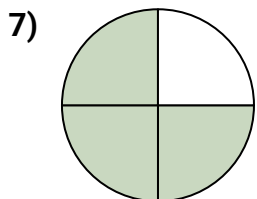
- A. one-half
B. one-fourth
C. three-fourths



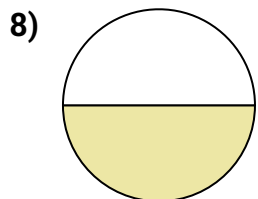
- A. one-half
B. two-quarters
C. one-quarter



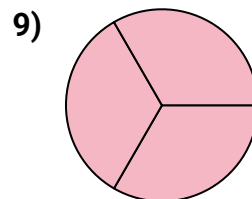
- A. one-half
B. two-halves
C. four-quarters



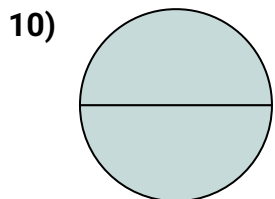
- A. three-fourths
B. four-quarters
C. one-fourth



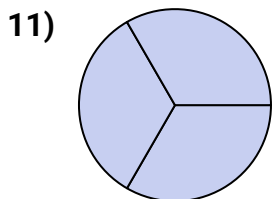
- A. three-quarters
B. one-half
C. one-quarter



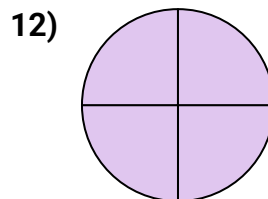
- A. two-halves
B. three-thirds
C. four-fourths



- A. four-quarters
B. two-halves
C. one-half



- A. four-quarters
B. one-half
C. three-thirds



- A. two-quarters
B. four-fourths
C. one-fourth

1. **C**2. **A**3. **B**4. **A**5. **B**6. **C**7. **A**8. **B**9. **B**10. **B**11. **C**12. **B**