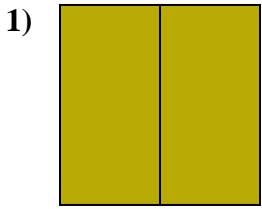


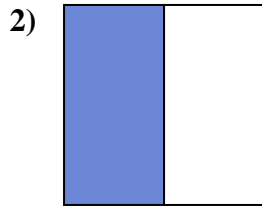


Determine which letter best describes the shaded portion.

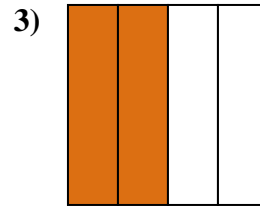
**Answers**



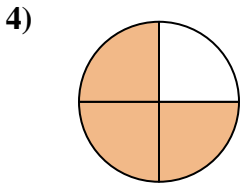
- A. two-halves
- B. one-half
- C. four-fourths



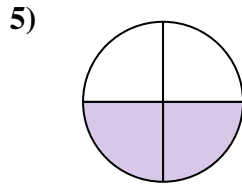
- A. two-halves
- B. three-fourths
- C. one-half



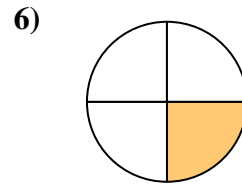
- A. two-halves
- B. two-quarters
- C. three-fourths



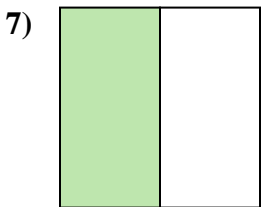
- A. three-fourths
- B. one-fourth
- C. two-halves



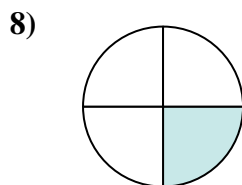
- A. three-fourths
- B. four-quarters
- C. two-quarters



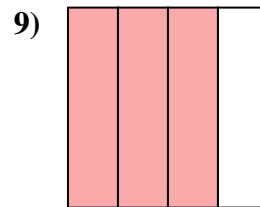
- A. four-quarters
- B. one-fourth
- C. one-half



- A. four-quarters
- B. one-half
- C. three-fourths



- A. one-quarter
- B. one-half
- C. two-halves

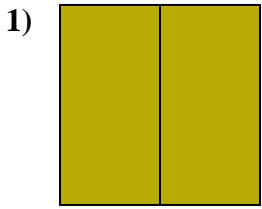


- A. three-fourths
- B. two-fourths
- C. two-halves

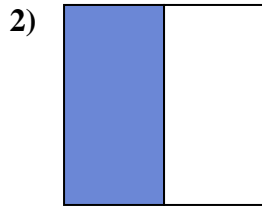
- 1. \_\_\_\_\_
- 2. \_\_\_\_\_
- 3. \_\_\_\_\_
- 4. \_\_\_\_\_
- 5. \_\_\_\_\_
- 6. \_\_\_\_\_
- 7. \_\_\_\_\_
- 8. \_\_\_\_\_
- 9. \_\_\_\_\_



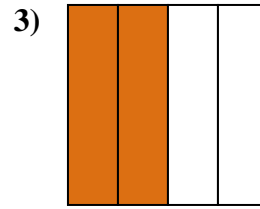
Determine which letter best describes the shaded portion.



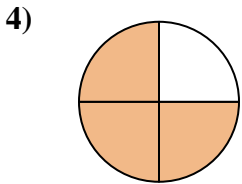
- A. two-halves
- B. one-half
- C. four-fourths



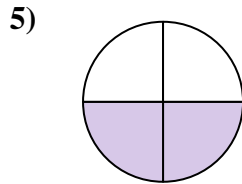
- A. two-halves
- B. three-fourths
- C. one-half



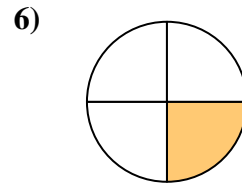
- A. two-halves
- B. two-quarters
- C. three-fourths



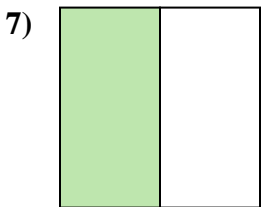
- A. three-fourths
- B. one-fourth
- C. two-halves



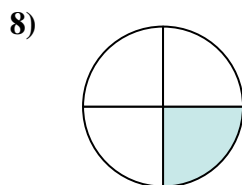
- A. three-fourths
- B. four-quarters
- C. two-quarters



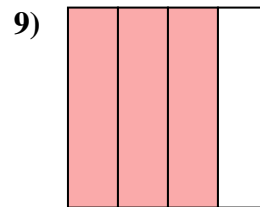
- A. four-quarters
- B. one-fourth
- C. one-half



- A. four-quarters
- B. one-half
- C. three-fourths



- A. one-quarter
- B. one-half
- C. two-halves



- A. three-fourths
- B. two-fourths
- C. two-halves

**Answers**

- 1.   **A**
- 2.   **C**
- 3.   **B**
- 4.   **A**
- 5.   **C**
- 6.   **B**
- 7.   **B**
- 8.   **A**
- 9.   **A**