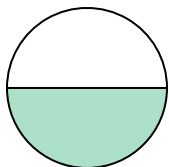


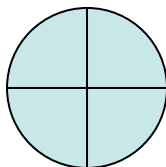
**Determine which letter best describes the shaded portion.****Answers**

1)



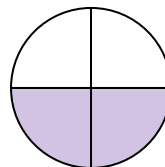
- A. two-fourths
B. one-half
C. one-fourth

2)



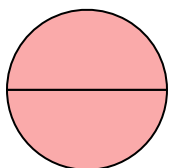
- A. two-halves
B. four-fourths
C. one-half

3)



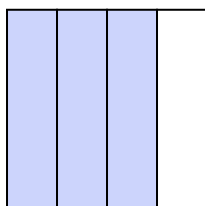
- A. two-fourths
B. three-fourths
C. one-quarter

4)




- A. four-quarters
B. two-quarters
C. two-halves

5)




- A. three-fourths
B. two-fourths
C. four-fourths

6)



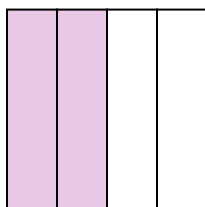
- A. one-fourth
B. two-halves
C. one-half

7)



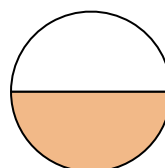
- A. two-fourths
B. four-quarters
C. three-quarters

8)



- A. one-half
B. two-fourths
C. three-quarters

9)



- A. two-halves
B. two-fourths
C. one-half

1. _____

2. _____

3. _____

4. _____

5. _____

6. _____

7. _____

8. _____

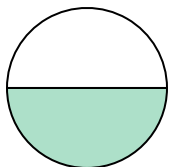
9. _____



Determine which letter best describes the shaded portion.

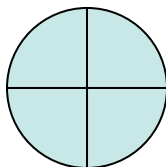
Answers

1)



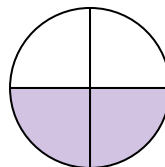
- A. two-fourths
B. one-half
C. one-fourth

2)



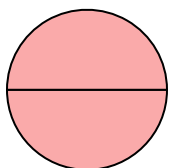
- A. two-halves
B. four-fourths
C. one-half

3)



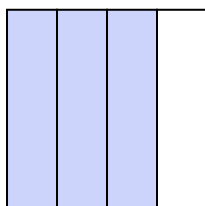
- A. two-fourths
B. three-fourths
C. one-quarter

4)




- A. four-quarters
B. two-quarters
C. two-halves

5)




- A. three-fourths
B. two-fourths
C. four-fourths

6)



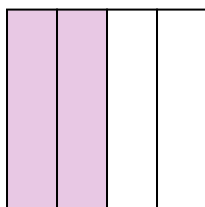
- A. one-fourth
B. two-halves
C. one-half

7)



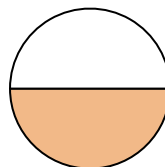
- A. two-fourths
B. four-quarters
C. three-quarters

8)



- A. one-half
B. two-fourths
C. three-quarters

9)



- A. two-halves
B. two-fourths
C. one-half

1. **B**2. **B**3. **A**4. **C**5. **A**6. **B**7. **B**8. **B**9. **C**